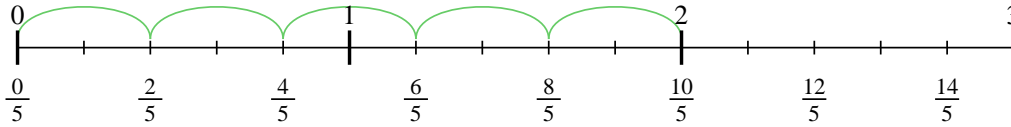


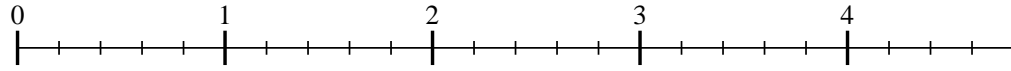


Usa la recta numérica para resolver cada problema. El primero ya está marcado como ejemplo.

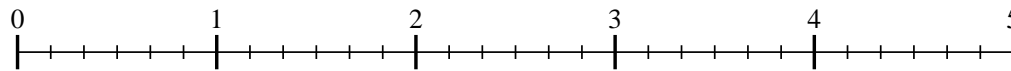
1) $2 \div \frac{2}{5}$



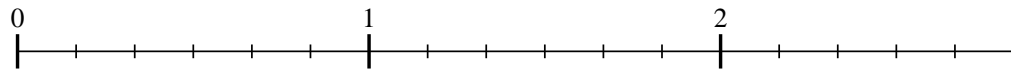
2) $4 \div \frac{3}{5}$



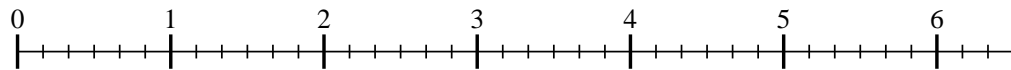
3) $4 \div \frac{2}{6}$



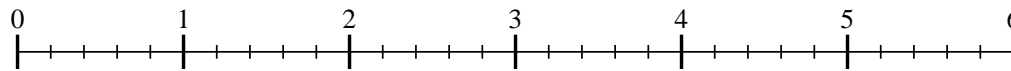
4) $2 \div \frac{3}{6}$



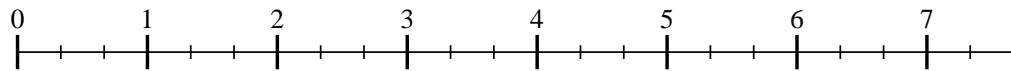
5) $6 \div \frac{2}{6}$



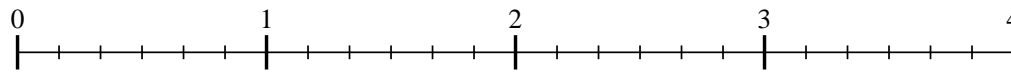
6) $5 \div \frac{3}{5}$



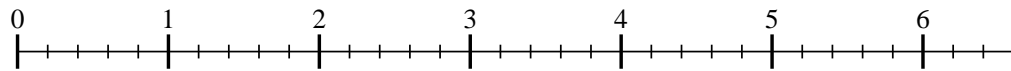
7) $7 \div \frac{2}{3}$



8) $3 \div \frac{4}{6}$



9) $6 \div \frac{3}{5}$



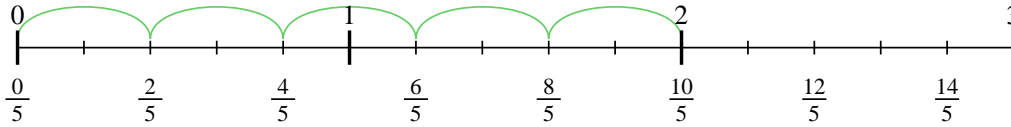
Respuestas

- 1. _____
- 2. _____
- 3. _____
- 4. _____
- 5. _____
- 6. _____
- 7. _____
- 8. _____
- 9. _____

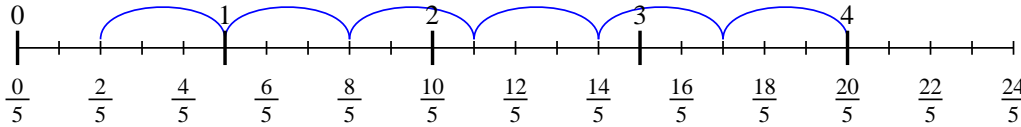


Usa la recta numérica para resolver cada problema. El primero ya está marcado como ejemplo.

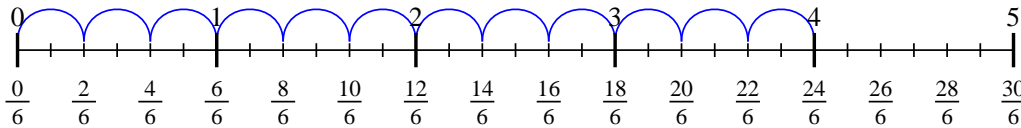
1) $2 \div \frac{2}{5}$



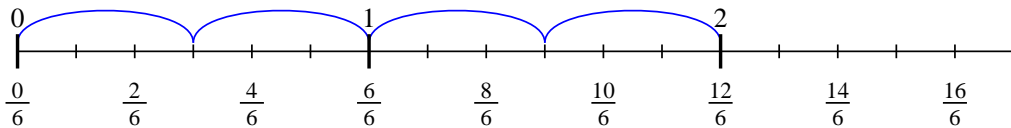
2) $4 \div \frac{3}{5}$



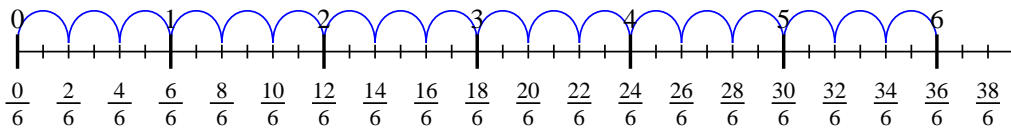
3) $4 \div \frac{2}{6}$



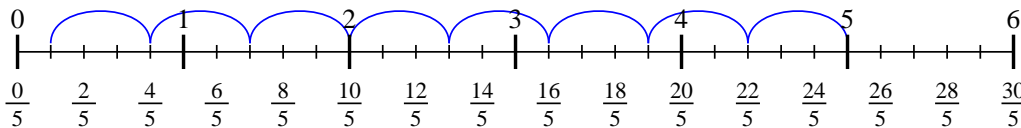
4) $2 \div \frac{3}{6}$



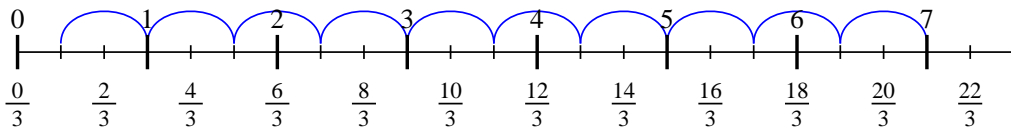
5) $6 \div \frac{2}{6}$



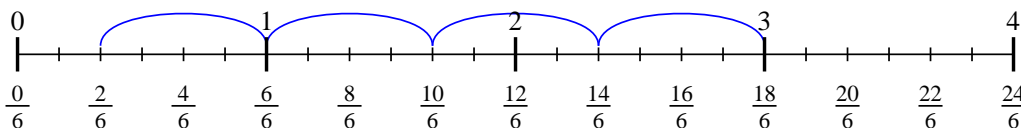
6) $5 \div \frac{3}{5}$



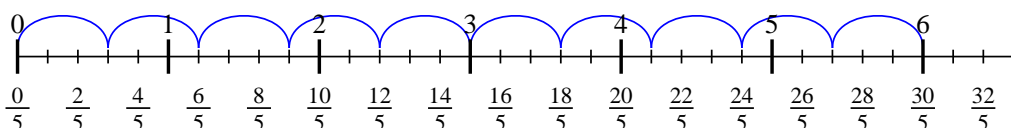
7) $7 \div \frac{2}{3}$



8) $3 \div \frac{4}{6}$



9) $6 \div \frac{3}{5}$



Respuestas

1. 5
2. $6 \frac{2}{3}$
3. 12
4. 4
5. 18
6. $8 \frac{1}{3}$
7. $10 \frac{1}{2}$
8. $4 \frac{2}{4}$
9. 10