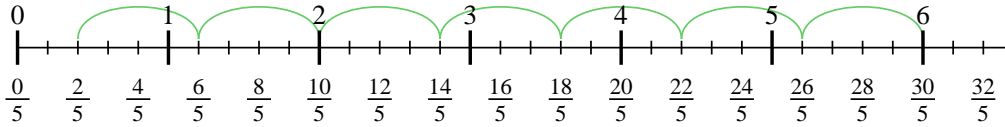


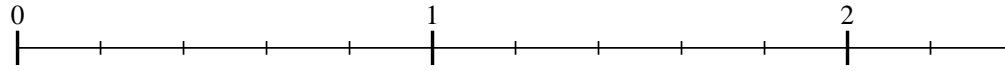


Usa la recta numérica para resolver cada problema. El primero ya está marcado como ejemplo.

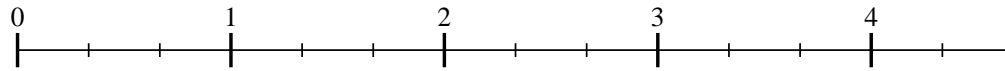
1) $6 \div \frac{4}{5}$



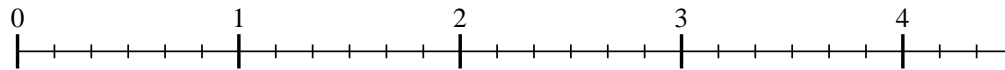
2) $2 \div \frac{3}{5}$



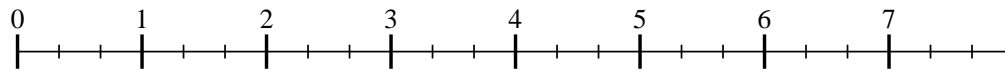
3) $4 \div \frac{2}{3}$



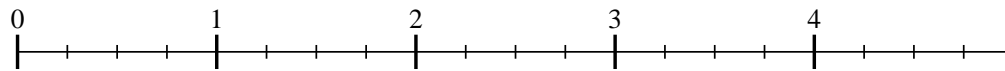
4) $4 \div \frac{2}{6}$



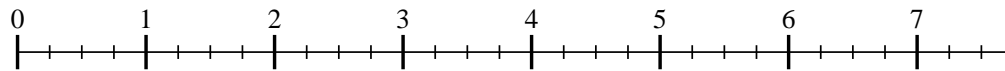
5) $7 \div \frac{2}{3}$



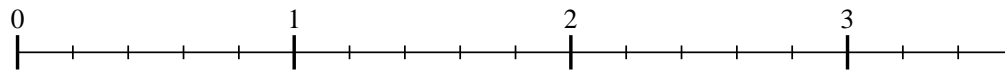
6) $4 \div \frac{3}{4}$



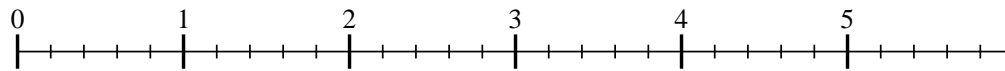
7) $7 \div \frac{2}{4}$



8) $3 \div \frac{4}{5}$



9) $5 \div \frac{2}{5}$



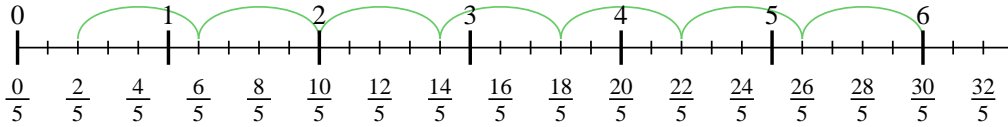
Respuestas

- 1. _____
- 2. _____
- 3. _____
- 4. _____
- 5. _____
- 6. _____
- 7. _____
- 8. _____
- 9. _____

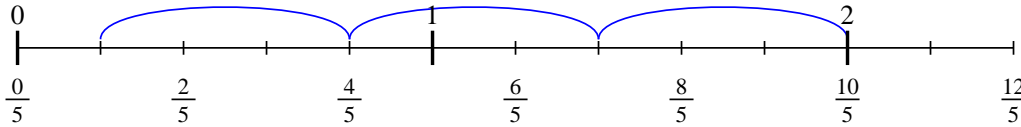


Usa la recta numérica para resolver cada problema. El primero ya está marcado como ejemplo.

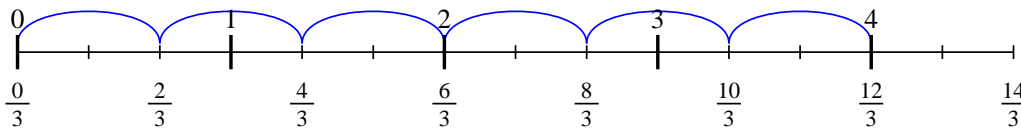
1) $6 \div \frac{4}{5}$



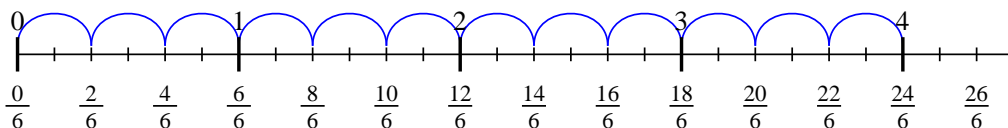
2) $2 \div \frac{3}{5}$



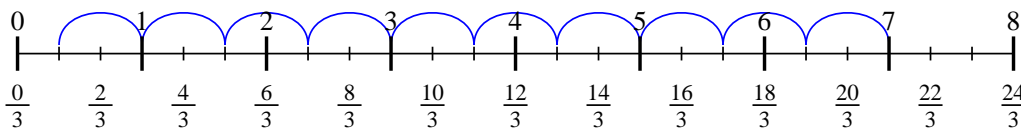
3) $4 \div \frac{2}{3}$



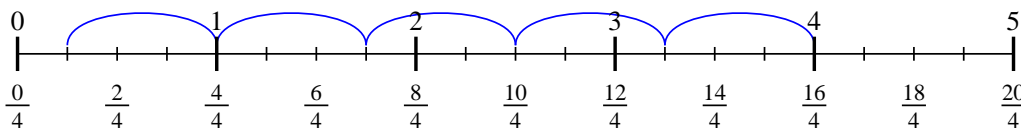
4) $4 \div \frac{2}{6}$



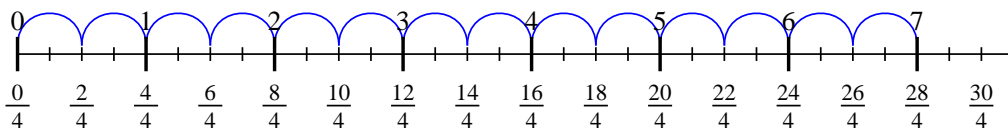
5) $7 \div \frac{2}{3}$



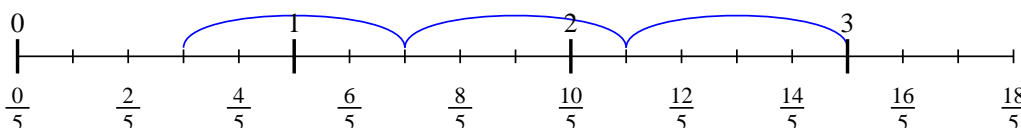
6) $4 \div \frac{3}{4}$



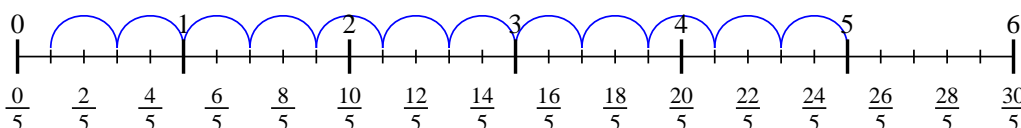
7) $7 \div \frac{2}{4}$



8) $3 \div \frac{4}{5}$



9) $5 \div \frac{2}{5}$



Respuestas

1. $7 \frac{2}{4}$
2. $3 \frac{1}{3}$
3. 6
4. 12
5. $10 \frac{1}{2}$
6. $5 \frac{1}{3}$
7. 14
8. $3 \frac{3}{4}$
9. $12 \frac{1}{2}$