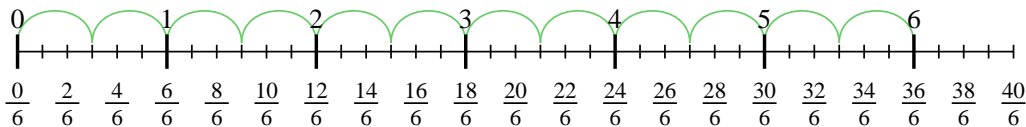




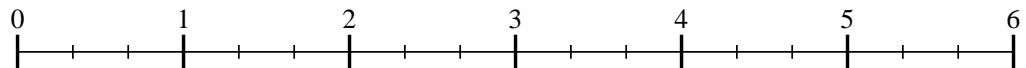
Usa la recta numérica para resolver cada problema. El primero ya está marcado como ejemplo.

**Respuestas**

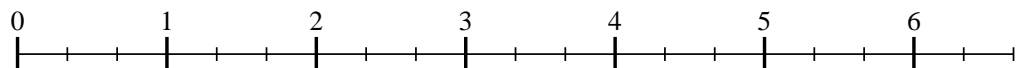
1)  $6 \div \frac{3}{6}$



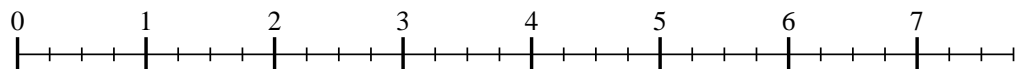
2)  $5 \div \frac{2}{3}$



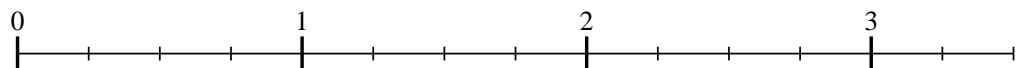
3)  $6 \div \frac{2}{3}$



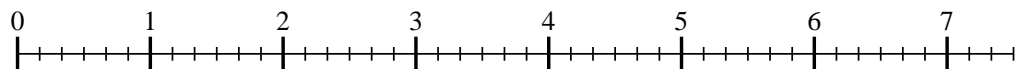
4)  $7 \div \frac{2}{4}$



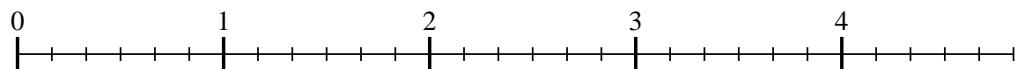
5)  $3 \div \frac{2}{4}$




6)  $7 \div \frac{5}{6}$



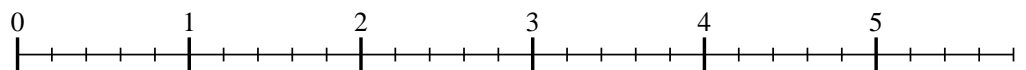
7)  $4 \div \frac{4}{6}$



8)  $2 \div \frac{2}{4}$



9)  $5 \div \frac{4}{5}$



1. \_\_\_\_\_

2. \_\_\_\_\_

3. \_\_\_\_\_

4. \_\_\_\_\_

5. \_\_\_\_\_

6. \_\_\_\_\_

7. \_\_\_\_\_

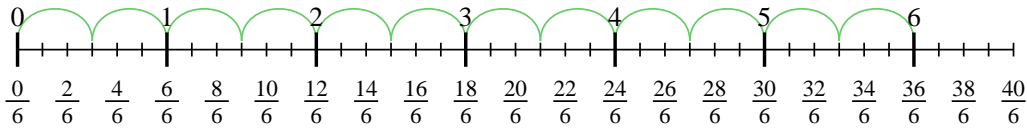
8. \_\_\_\_\_

9. \_\_\_\_\_

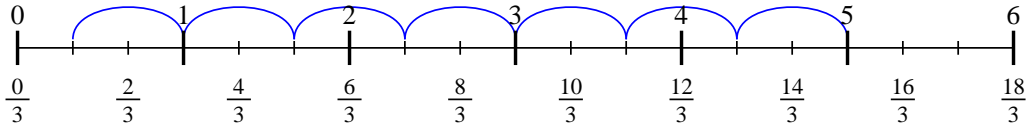


Usa la recta numérica para resolver cada problema. El primero ya está marcado como ejemplo.

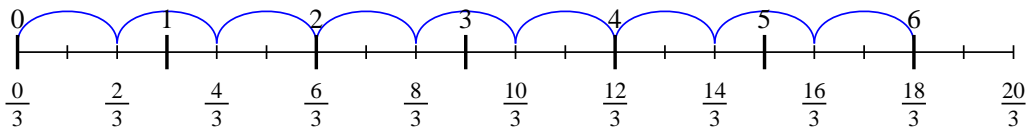
1)  $6 \div \frac{3}{6}$



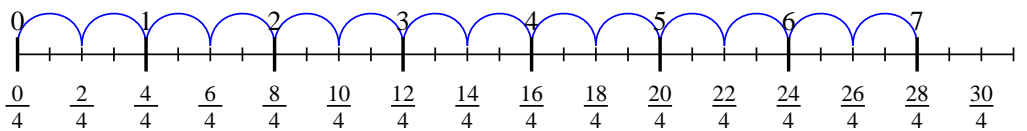
2)  $5 \div \frac{2}{3}$



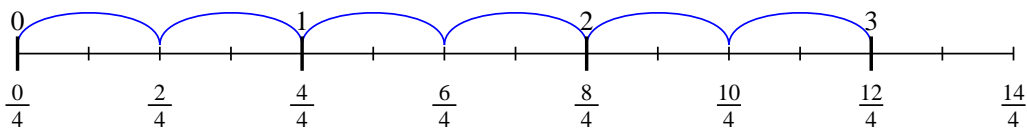
3)  $6 \div \frac{2}{3}$



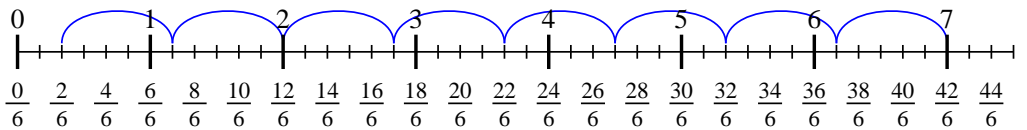
4)  $7 \div \frac{2}{4}$



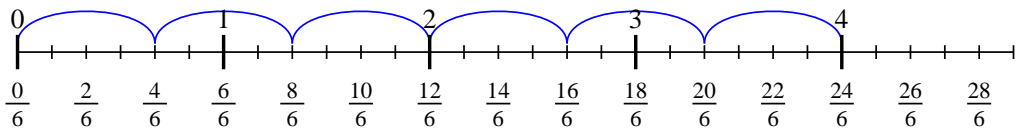
5)  $3 \div \frac{2}{4}$



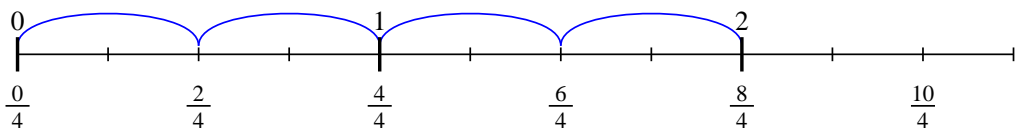
6)  $7 \div \frac{5}{6}$



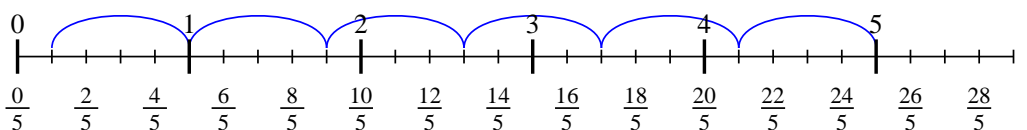
7)  $4 \div \frac{4}{6}$



8)  $2 \div \frac{2}{4}$



9)  $5 \div \frac{4}{5}$



**Respuestas**

1. 12
2.  $7 \frac{1}{2}$
3. 9
4. 14
5. 6
6.  $8 \frac{2}{5}$
7. 6
8. 4
9.  $6 \frac{1}{4}$