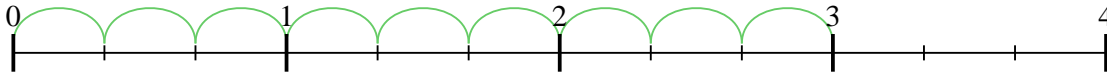




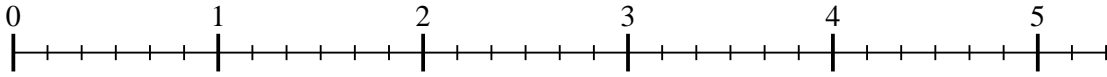
Usa la recta numérica para resolver cada problema. El primero ya está marcado como ejemplo.

Respuestas

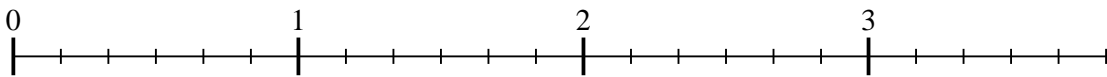
1) $3 \div \frac{1}{3}$



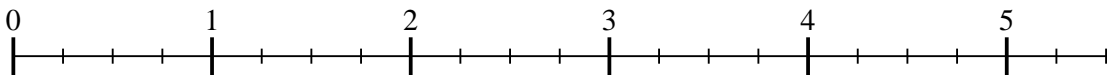
2) $5 \div \frac{1}{6}$



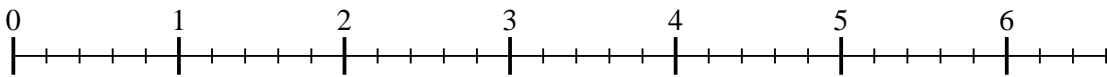
3) $3 \div \frac{1}{6}$



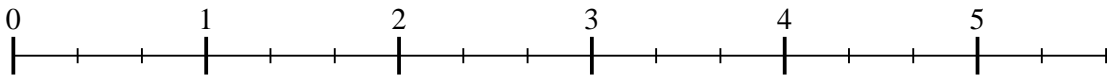
4) $5 \div \frac{1}{4}$



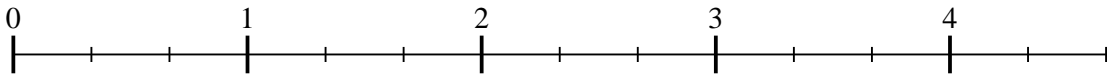
5) $6 \div \frac{1}{5}$



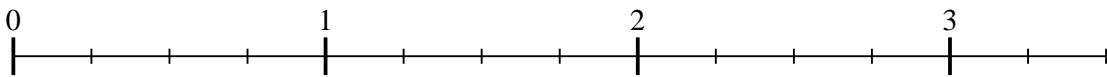
6) $5 \div \frac{1}{3}$




7) $4 \div \frac{1}{3}$



8) $3 \div \frac{1}{4}$



9) $2 \div \frac{1}{3}$



1. _____

2. _____

3. _____

4. _____

5. _____

6. _____

7. _____

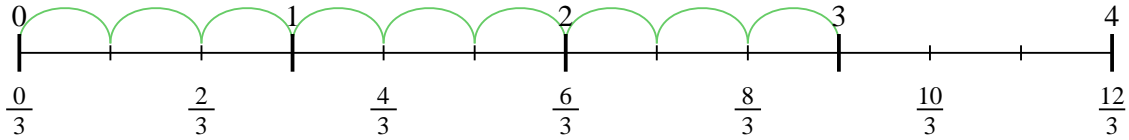
8. _____

9. _____

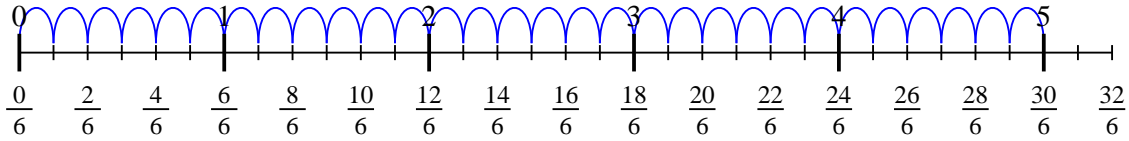


Usa la recta numérica para resolver cada problema. El primero ya está marcado como ejemplo.

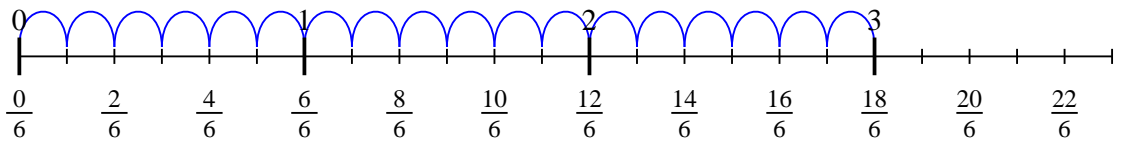
1) $3 \div \frac{1}{3}$



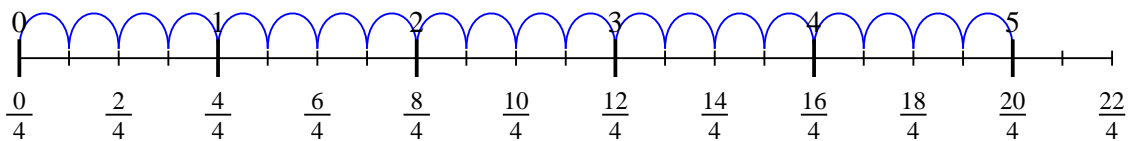
2) $5 \div \frac{1}{6}$



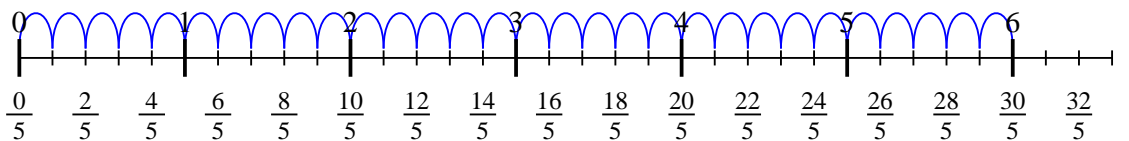
3) $3 \div \frac{1}{6}$



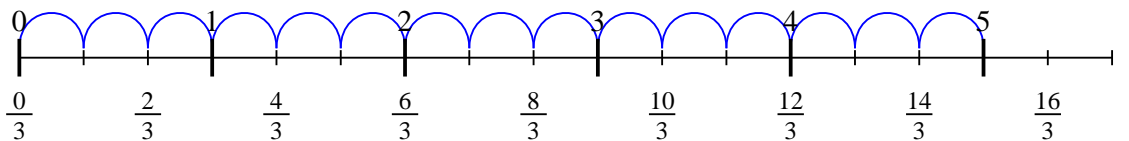
4) $5 \div \frac{1}{4}$



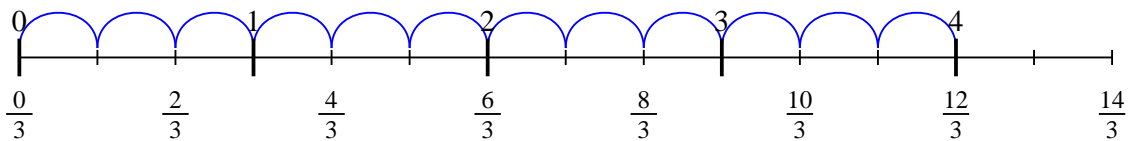
5) $6 \div \frac{1}{5}$



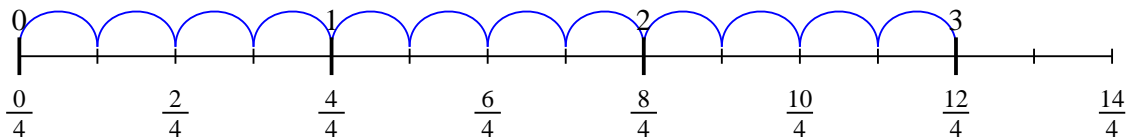
6) $5 \div \frac{1}{3}$



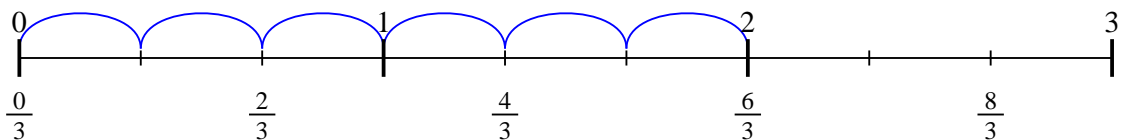
7) $4 \div \frac{1}{3}$



8) $3 \div \frac{1}{4}$



9) $2 \div \frac{1}{3}$



Respuestas

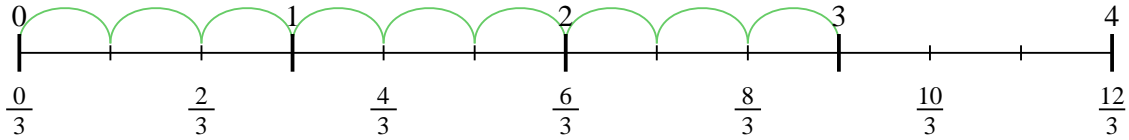
1. 9
2. 30
3. 18
4. 20
5. 30
6. 15
7. 12
8. 12
9. 6



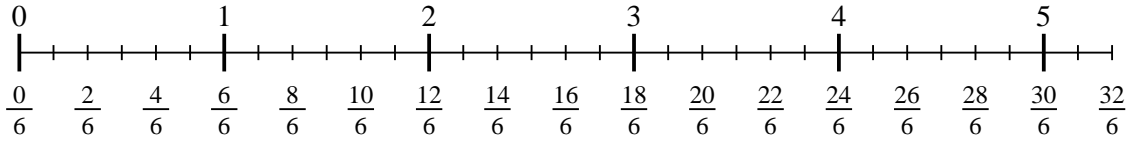
Usa la recta numérica para resolver cada problema. El primero ya está marcado como ejemplo.

Respuestas

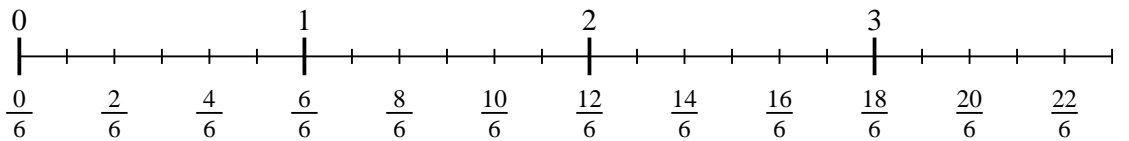
1) $3 \div \frac{1}{3}$



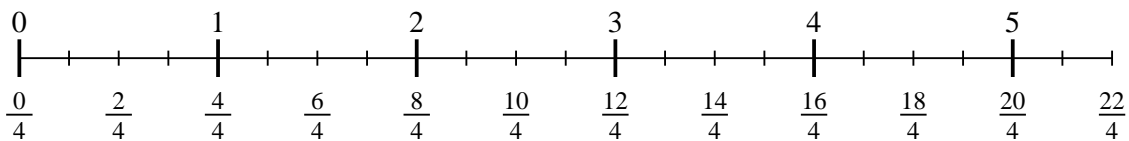
2) $5 \div \frac{1}{6}$



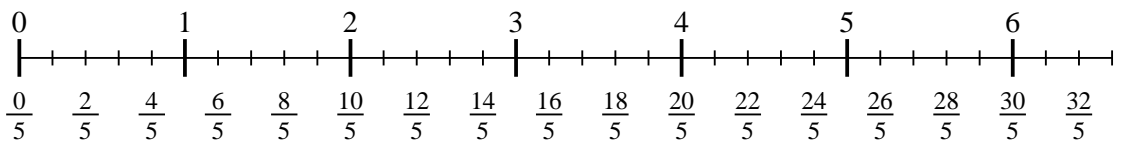
3) $3 \div \frac{1}{6}$



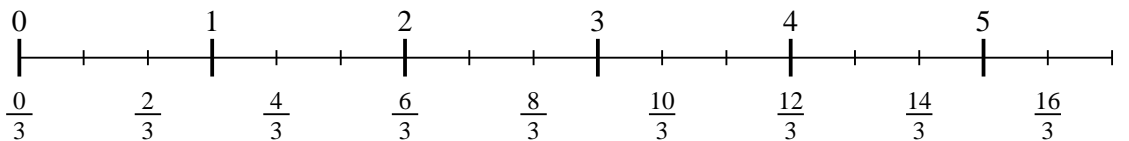
4) $5 \div \frac{1}{4}$



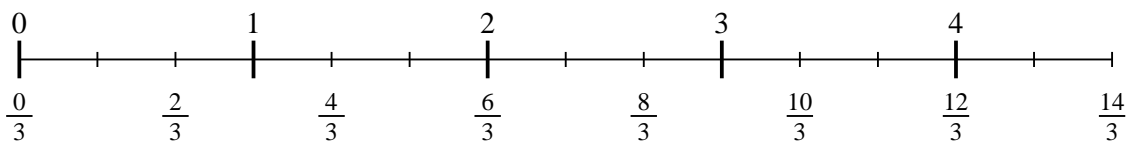
5) $6 \div \frac{1}{5}$



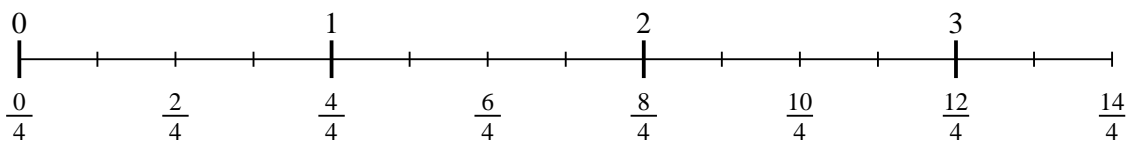
6) $5 \div \frac{1}{3}$



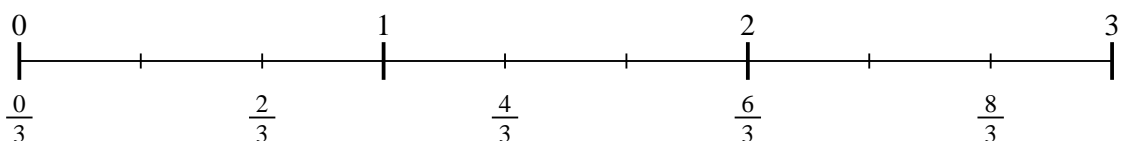
7) $4 \div \frac{1}{3}$



8) $3 \div \frac{1}{4}$



9) $2 \div \frac{1}{3}$



- 1. _____
- 2. _____
- 3. _____
- 4. _____
- 5. _____
- 6. _____
- 7. _____
- 8. _____
- 9. _____