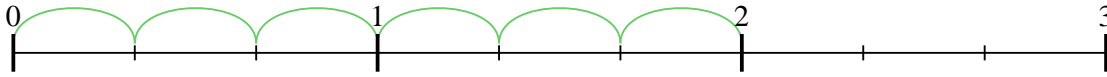




Usa la recta numérica para resolver cada problema. El primero ya está marcado como ejemplo.

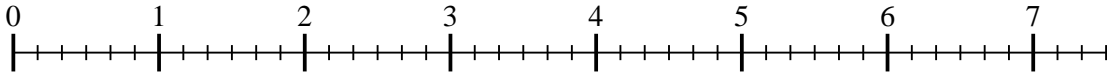
**Respuestas**

1)  $2 \div \frac{1}{3}$



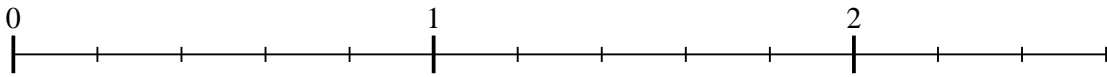
1. \_\_\_\_\_

2)  $7 \div \frac{1}{6}$



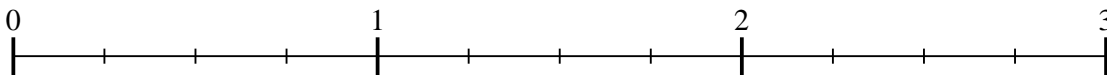
2. \_\_\_\_\_

3)  $2 \div \frac{1}{5}$



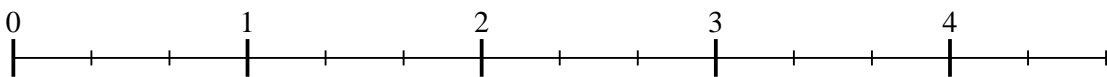
3. \_\_\_\_\_

4)  $2 \div \frac{1}{4}$



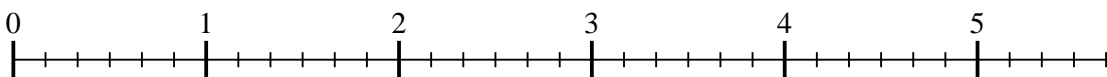
4. \_\_\_\_\_

5)  $4 \div \frac{1}{3}$



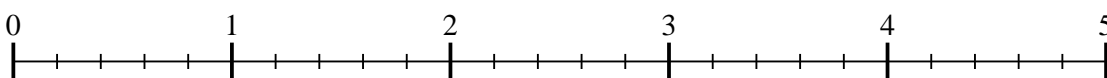
5. \_\_\_\_\_

6)  $5 \div \frac{1}{6}$



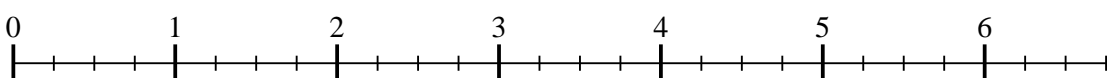
6. \_\_\_\_\_

7)  $4 \div \frac{1}{5}$



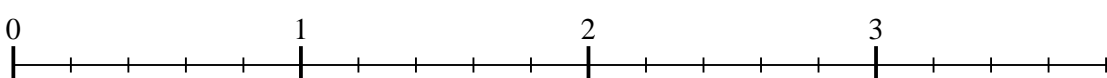
7. \_\_\_\_\_

8)  $6 \div \frac{1}{4}$



8. \_\_\_\_\_

9)  $3 \div \frac{1}{5}$

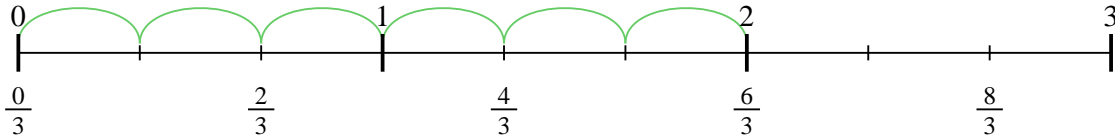


9. \_\_\_\_\_

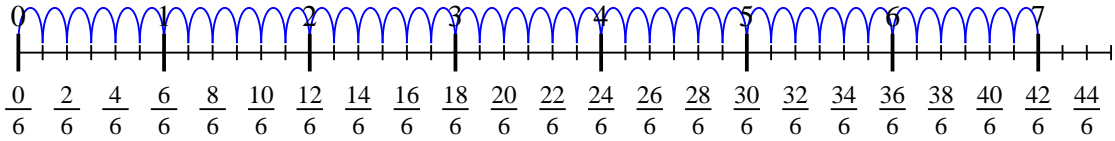


Usa la recta numérica para resolver cada problema. El primero ya está marcado como ejemplo.

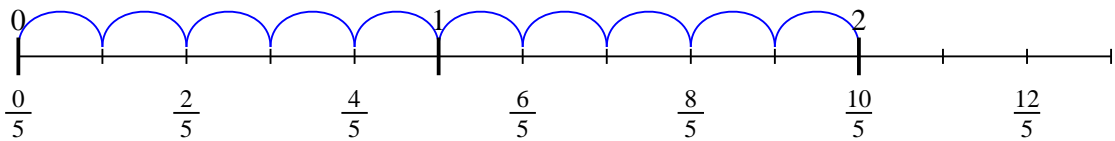
1)  $2 \div \frac{1}{3}$



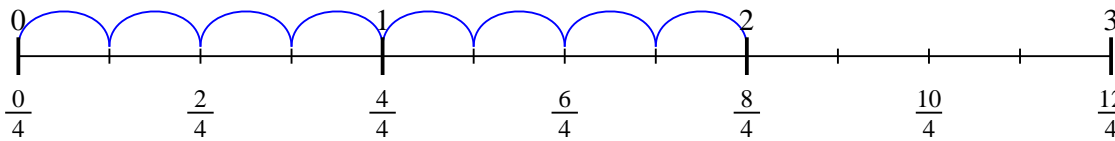
2)  $7 \div \frac{1}{6}$



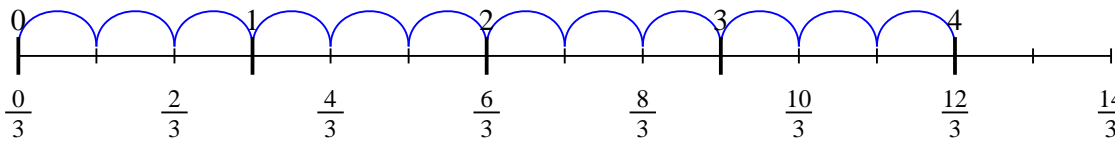
3)  $2 \div \frac{1}{5}$



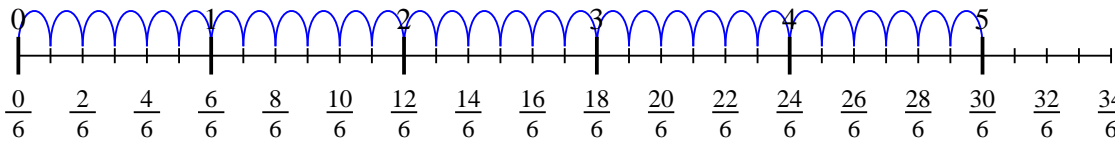
4)  $2 \div \frac{1}{4}$



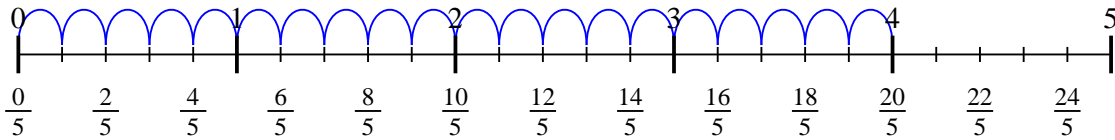
5)  $4 \div \frac{1}{3}$



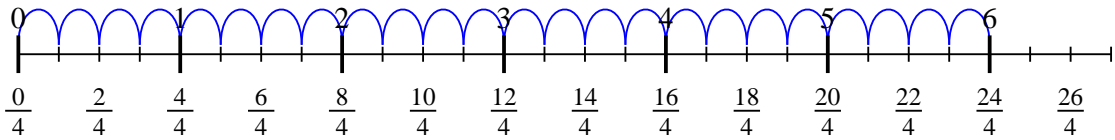
6)  $5 \div \frac{1}{6}$



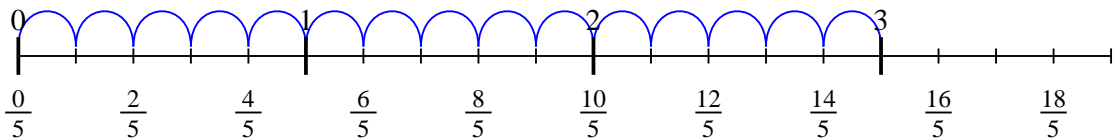
7)  $4 \div \frac{1}{5}$



8)  $6 \div \frac{1}{4}$



9)  $3 \div \frac{1}{5}$



**Respuestas**

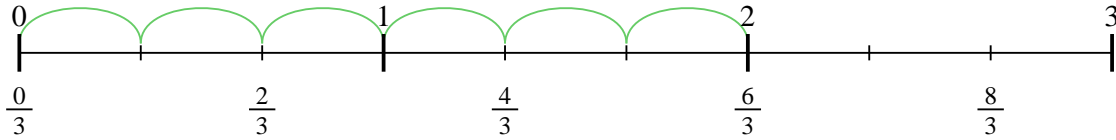
1. 6
2. 42
3. 10
4. 8
5. 12
6. 30
7. 20
8. 24
9. 15



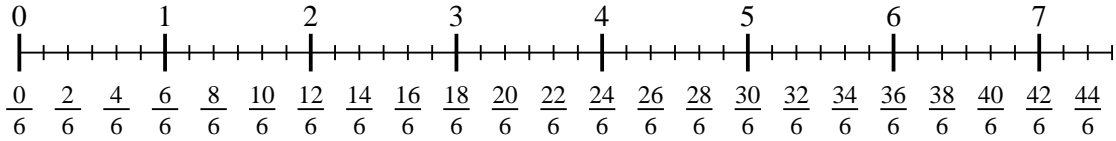
Usa la recta numérica para resolver cada problema. El primero ya está marcado como ejemplo.

**Respuestas**

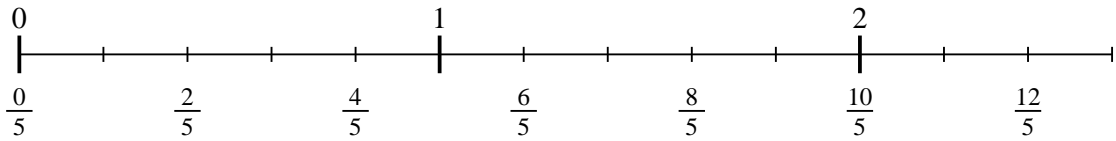
1)  $2 \div \frac{1}{3}$



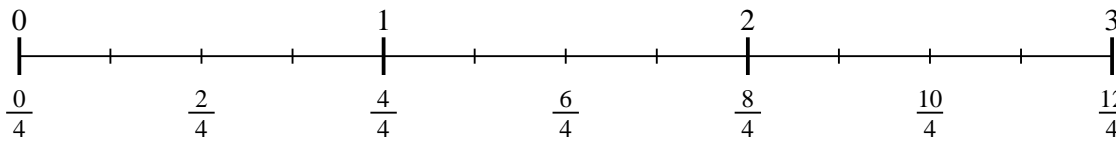
2)  $7 \div \frac{1}{6}$



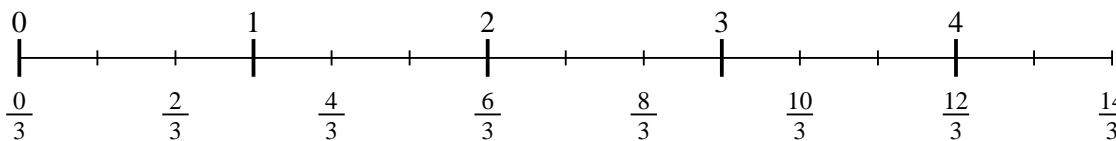
3)  $2 \div \frac{1}{5}$



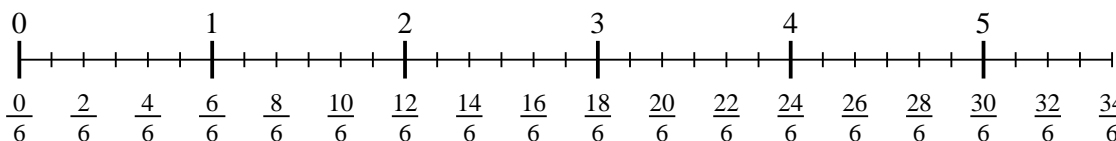
4)  $2 \div \frac{1}{4}$



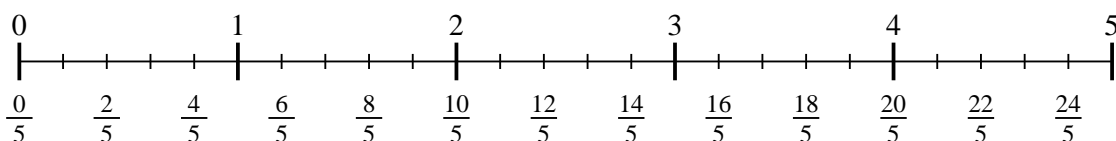
5)  $4 \div \frac{1}{3}$



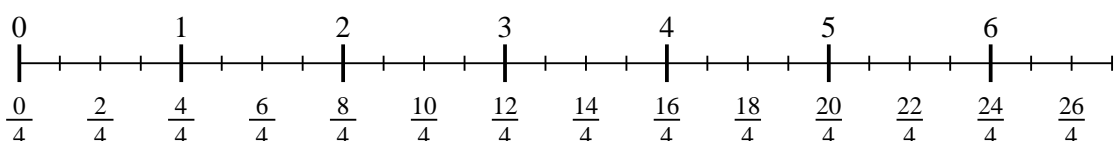
6)  $5 \div \frac{1}{6}$



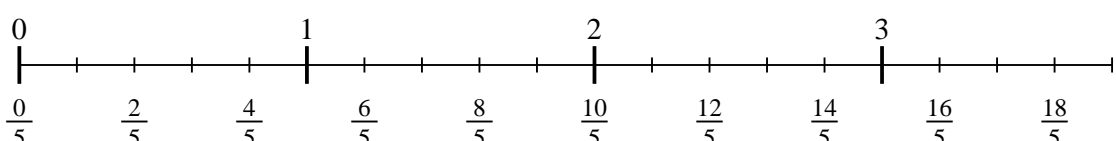
7)  $4 \div \frac{1}{5}$



8)  $6 \div \frac{1}{4}$



9)  $3 \div \frac{1}{5}$



- 1. \_\_\_\_\_
- 2. \_\_\_\_\_
- 3. \_\_\_\_\_
- 4. \_\_\_\_\_
- 5. \_\_\_\_\_
- 6. \_\_\_\_\_
- 7. \_\_\_\_\_
- 8. \_\_\_\_\_
- 9. \_\_\_\_\_