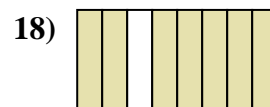
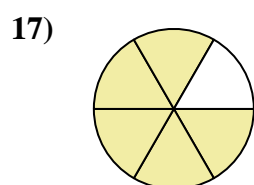
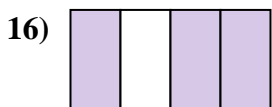

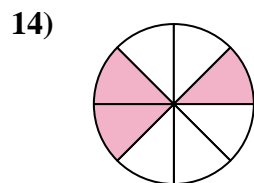
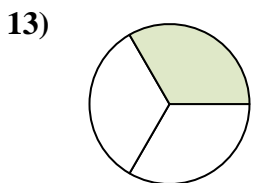
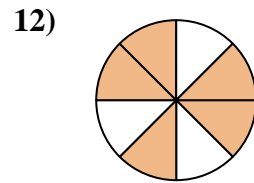
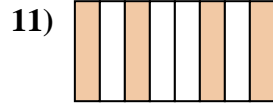
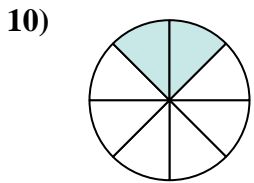
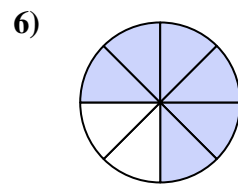
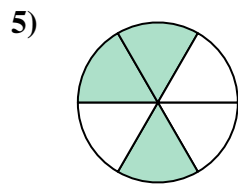

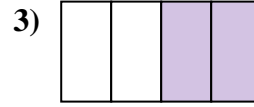
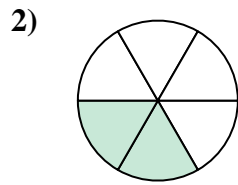





Escribe la cantidad sombreada como una fracción de la cantidad entera.

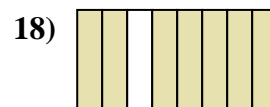
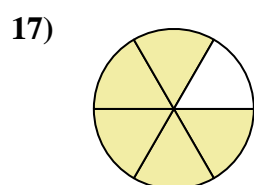
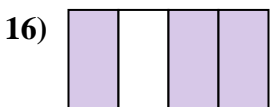

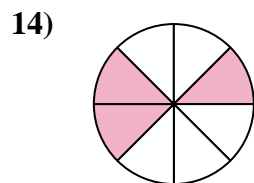
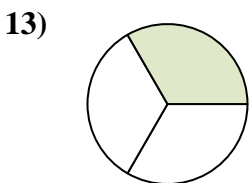
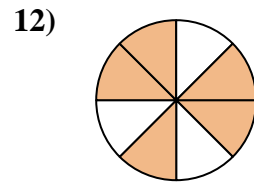
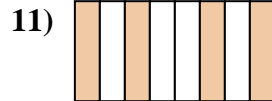
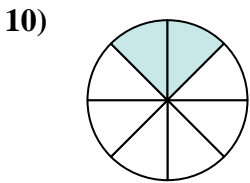
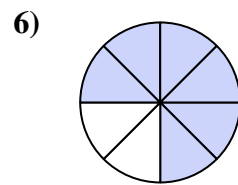
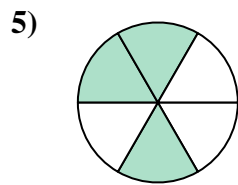

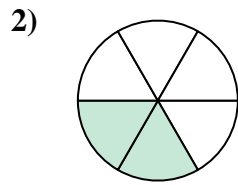



Respuestas

1. _____
2. _____
3. _____
4. _____
5. _____
6. _____
7. _____
8. _____
9. _____
10. _____
11. _____
12. _____
13. _____
14. _____
15. _____
16. _____
17. _____
18. _____



Escribe la cantidad sombreada como una fracción de la cantidad entera.



Respuestas

1. 1/2

2. 2/6

3. 2/4

4. 2/3

5. 3/6

6. 6/8

7. 1/4

8. 1/6

9. 1/8

10. 2/8

11. 4/8

12. 5/8

13. 1/3

14. 3/6

15. 4/6

16. 3/4

17. 5/6

18. 7/8