



Medir el ancho y alto de cada bloque en pulgadas y en centímetros

Ej)



**Respuestas**

Ej.(in-w) 5

Ej.(in-h) 1 1/2

Ej.(cm-w) 12

Ej.(cm-h) 4

1)




1.(in-w) \_\_\_\_\_

1.(in-h) \_\_\_\_\_

1.(cm-w) \_\_\_\_\_

1.(cm-h) \_\_\_\_\_

2)




2.(in-w) \_\_\_\_\_

2.(in-h) \_\_\_\_\_

2.(cm-w) \_\_\_\_\_

2.(cm-h) \_\_\_\_\_

3)




3.(in-w) \_\_\_\_\_

3.(in-h) \_\_\_\_\_

3.(cm-w) \_\_\_\_\_

3.(cm-h) \_\_\_\_\_

4)



4.(in-w) \_\_\_\_\_

4.(in-h) \_\_\_\_\_

4.(cm-w) \_\_\_\_\_

4.(cm-h) \_\_\_\_\_

In		1		2		3		4		5		6		7				
Cm	1	2	3	4	5	6	7	8	9	10	11	12	13	14	15	16	17	18
In		1		2		3		4		5		6		7				
Cm	1	2	3	4	5	6	7	8	9	10	11	12	13	14	15	16	17	18
In		1		2		3		4		5		6		7				
Cm	1	2	3	4	5	6	7	8	9	10	11	12	13	14	15	16	17	18
In		1		2		3		4		5		6		7				
Cm	1	2	3	4	5	6	7	8	9	10	11	12	13	14	15	16	17	18
In		1		2		3		4		5		6		7				
Cm	1	2	3	4	5	6	7	8	9	10	11	12	13	14	15	16	17	18
In		1		2		3		4		5		6		7				
Cm	1	2	3	4	5	6	7	8	9	10	11	12	13	14	15	16	17	18
In		1		2		3		4		5		6		7				
Cm	1	2	3	4	5	6	7	8	9	10	11	12	13	14	15	16	17	18
In		1		2		3		4		5		6		7				
Cm	1	2	3	4	5	6	7	8	9	10	11	12	13	14	15	16	17	18
In		1		2		3		4		5		6		7				
Cm	1	2	3	4	5	6	7	8	9	10	11	12	13	14	15	16	17	18




Medir el ancho y alto de cada bloque en pulgadas y en centímetros


Ej)



1)




2)



3)



4)



**Respuestas**

Ej.(in-w) 5

Ej.(in-h) 1 1/2

Ej.(cm-w) 12

Ej.(cm-h) 4

1.(in-w) 5 1/2

1.(in-h) 1 1/2

1.(cm-w) 14

1.(cm-h) 3.8

2.(in-w) 1

2.(in-h) 1 1/2

2.(cm-w) 2.5

2.(cm-h) 3.8

3.(in-w) 4 1/2

3.(in-h) 1 1/2

3.(cm-w) 11.4

3.(cm-h) 3.8

4.(in-w) 5

4.(in-h) 1

4.(cm-w) 12.7

4.(cm-h) 2.5