





Usar las matrices proporcionadas para resolver cada problema.


1)  $24 \times 10 =$



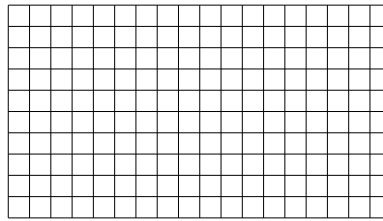
2)  $10 \times 22 =$




3)  $11 \times 10 =$




4)  $10 \times 18 =$



5)  $10 \times 16 =$



6)  $18 \times 10 =$



**Respuestas**

1. \_\_\_\_\_

2. \_\_\_\_\_

3. \_\_\_\_\_

4. \_\_\_\_\_

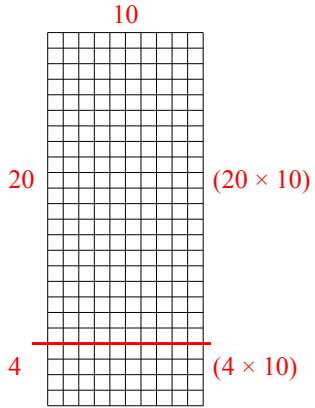
5. \_\_\_\_\_

6. \_\_\_\_\_

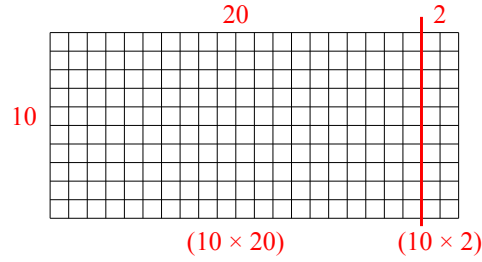


Usar las matrices proporcionadas para resolver cada problema.

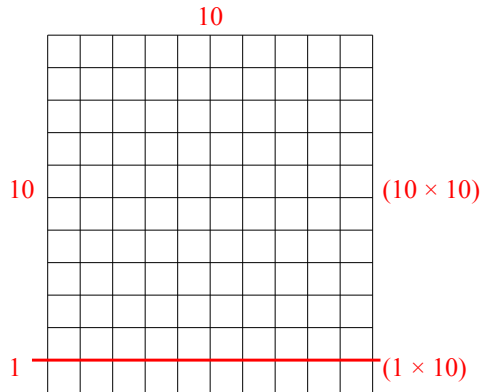
1)  $24 \times 10 =$



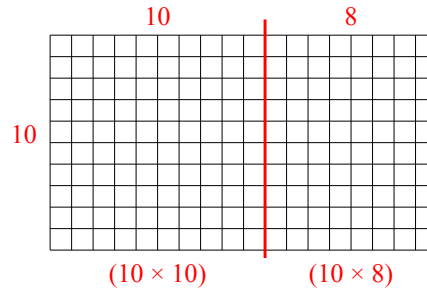
2)  $10 \times 22 =$



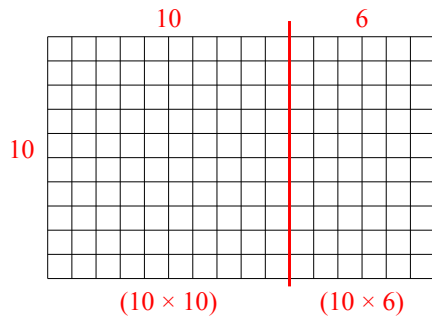
3)  $11 \times 10 =$



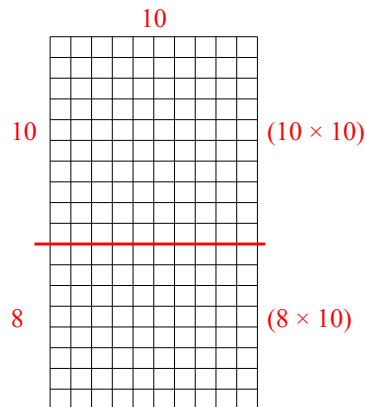
4)  $10 \times 18 =$



5)  $10 \times 16 =$



6)  $18 \times 10 =$



**Respuestas**

1. 240
2. 220
3. 110
4. 180
5. 160
6. 180