





Usar la matriz proporcionada para resolver cada problema.


1)  $44 \times 20 =$




2)  $30 \times 48 =$




3)  $40 \times 32 =$




4)  $25 \times 20 =$



5)  $23 \times 20 =$



6)  $21 \times 20 =$



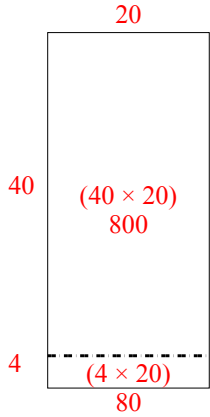
**Respuestas**

- 1. \_\_\_\_\_
- 2. \_\_\_\_\_
- 3. \_\_\_\_\_
- 4. \_\_\_\_\_
- 5. \_\_\_\_\_
- 6. \_\_\_\_\_

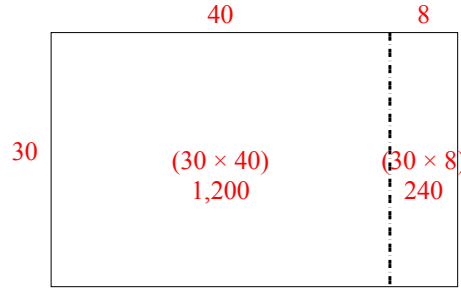


Usar la matriz proporcionada para resolver cada problema.

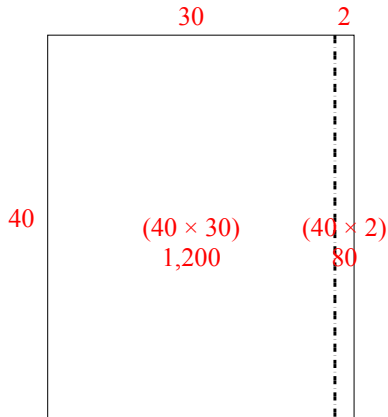
1)  $44 \times 20 =$



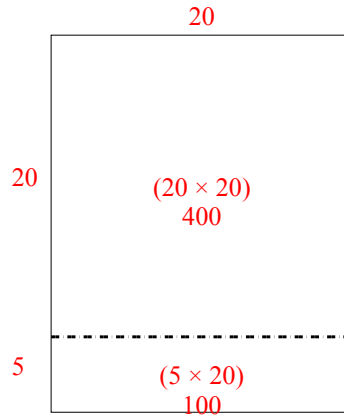
2)  $30 \times 48 =$



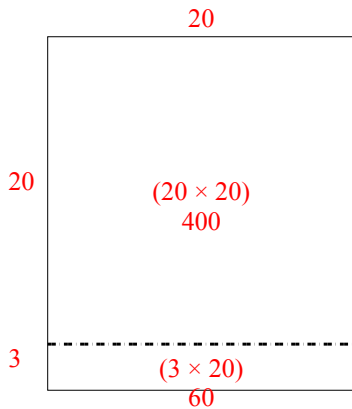
3)  $40 \times 32 =$



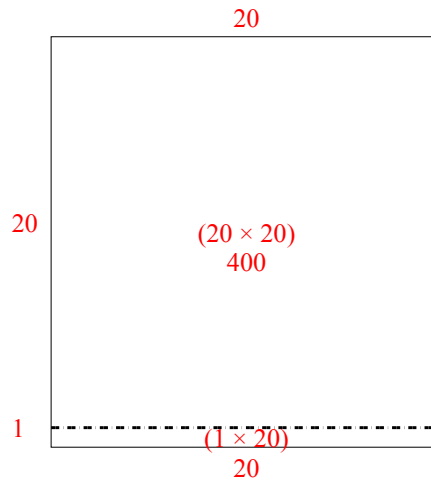
4)  $25 \times 20 =$



5)  $23 \times 20 =$



6)  $21 \times 20 =$



**Respuestas**

1. 880

2. 1,440

3. 1,280

4. 500

5. 460

6. 420