


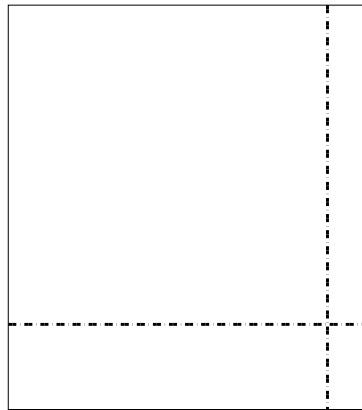


Usar la matriz proporcionada para resolver cada problema.

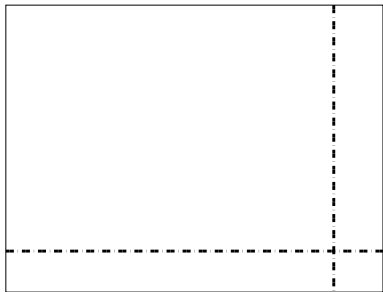
1) $43 \times 47 =$




2) $38 \times 34 =$




3) $35 \times 46 =$




4) $43 \times 32 =$



5) $33 \times 49 =$



6) $34 \times 19 =$



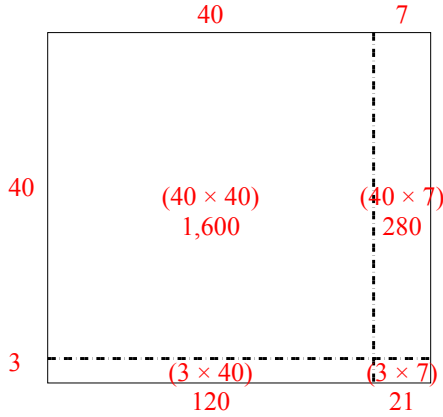
Respuestas

- 1. _____
- 2. _____
- 3. _____
- 4. _____
- 5. _____
- 6. _____

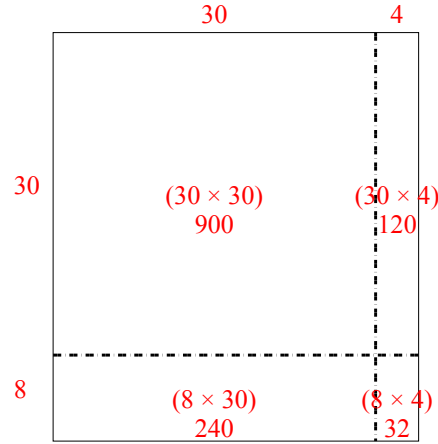


Usar la matriz proporcionada para resolver cada problema.

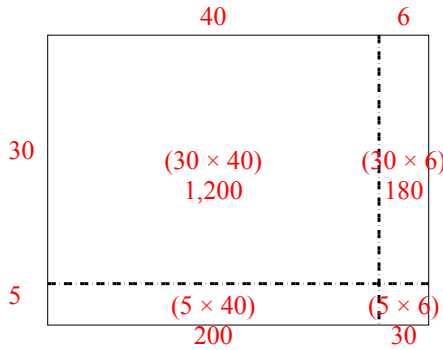
1) $43 \times 47 =$



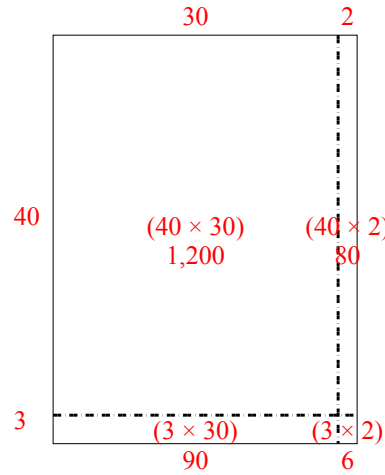
2) $38 \times 34 =$



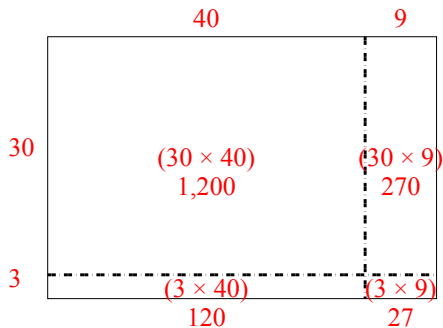
3) $35 \times 46 =$



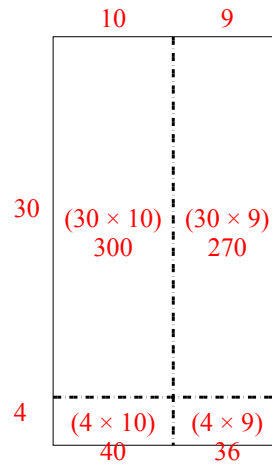
4) $43 \times 32 =$



5) $33 \times 49 =$



6) $34 \times 19 =$



Respuestas

1. 2,021
2. 1,292
3. 1,610
4. 1,376
5. 1,617
6. 646