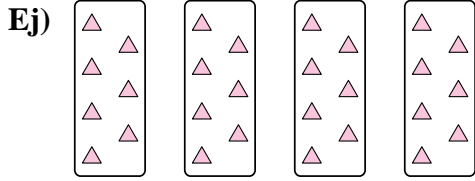





Expresar cada grupo como un problema de multiplicación.

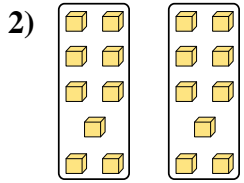
Respuestas



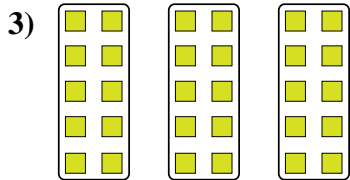
Ej. $4 \times 7 = 28$



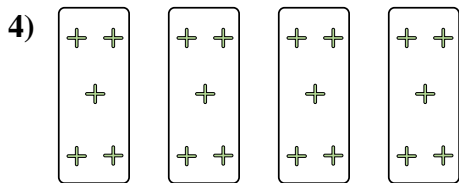
1. _____




2. _____



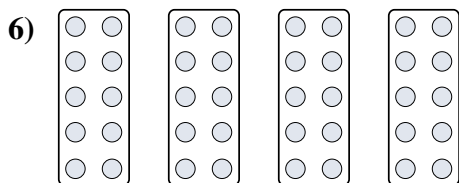
3. _____



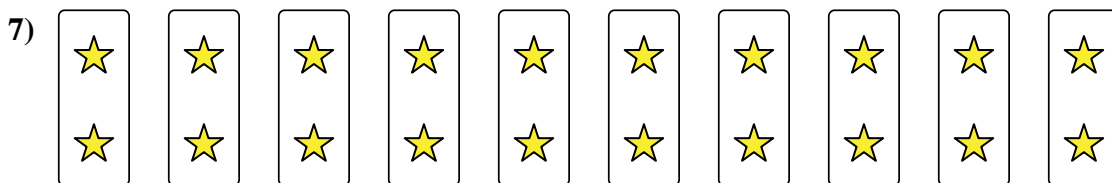
4. _____



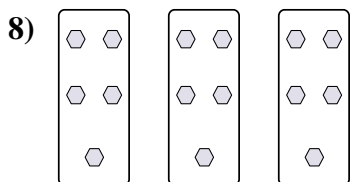
5. _____



6. _____



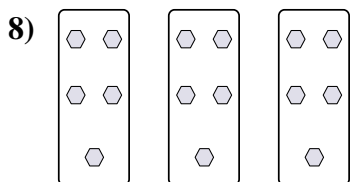
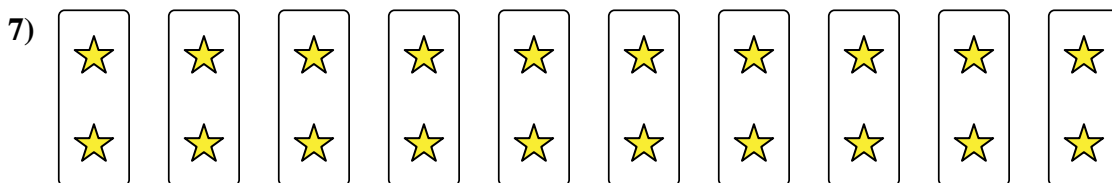
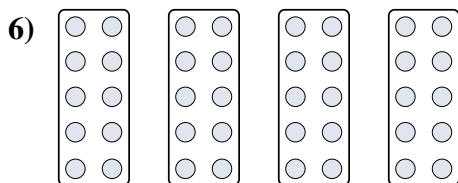

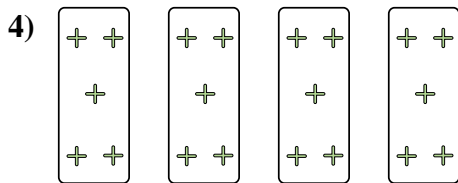
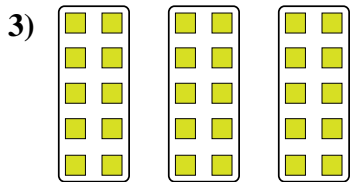
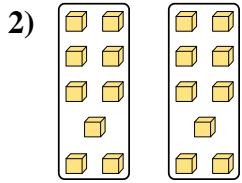

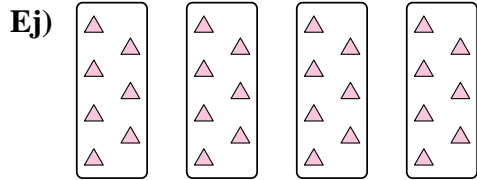
7. _____



8. _____



Expresar cada grupo como un problema de multiplicación.



Respuestas

Ej. $4 \times 7 = 28$

1. $5 \times 6 = 30$

2. $2 \times 9 = 18$

3. $3 \times 10 = 30$

4. $4 \times 5 = 20$

5. $3 \times 8 = 24$

6. $4 \times 10 = 40$

7. $10 \times 2 = 20$

8. $3 \times 5 = 15$