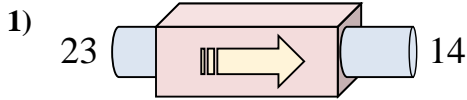
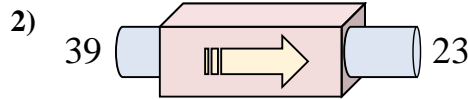




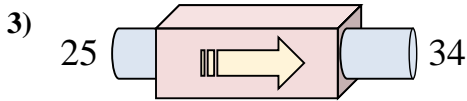
Determinar cuál regla está usando la máquina de funciones.



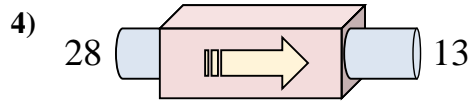
- A. Subtract 5
- B. Restar 9
- C. Add 8
- D. Subtract 10



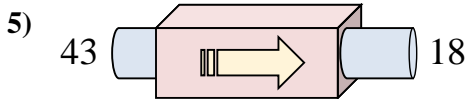
- A. Restar 16
- B. Subtract 11
- C. Subtract 17
- D. Add 20



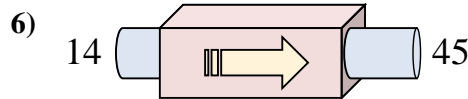
- A. Add 5
- B. Add 10
- C. Add 14
- D. Sumar 9



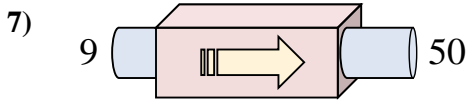
- A. Add 12
- B. Restar 15
- C. Subtract 11
- D. Subtract 18



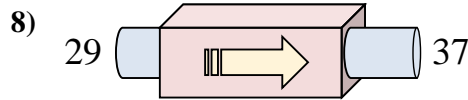
- A. Subtract 26
- B. Subtract 22
- C. Restar 25
- D. Subtract 30



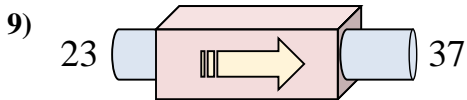
- A. Add 26
- B. Sumar 31
- C. Subtract 29
- D. Add 34



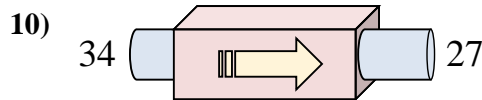
- A. Add 42
- B. Sumar 41
- C. Add 45
- D. Subtract 36



- A. Sumar 8
- B. Subtract 10
- C. Add 4
- D. Add 12



- A. Add 15
- B. Add 19
- C. Sumar 14
- D. Subtract 16



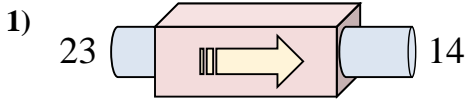
- A. Subtract 7
- B. Add 5
- C. Subtract 5
- D. Restar 7

Respuestas

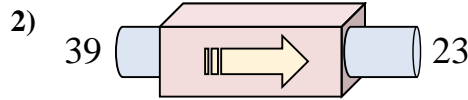
1. _____
2. _____
3. _____
4. _____
5. _____
6. _____
7. _____
8. _____
9. _____
10. _____



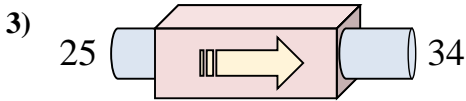
Determinar cuál regla está usando la máquina de funciones.



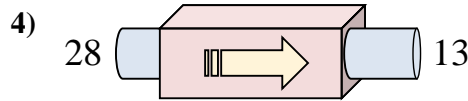
- A. Subtract 5
- B. Restar 9
- C. Add 8
- D. Subtract 10



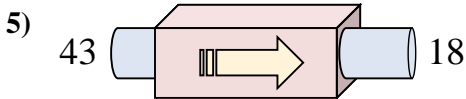
- A. Restar 16
- B. Subtract 11
- C. Subtract 17
- D. Add 20



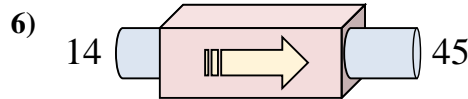
- A. Add 5
- B. Add 10
- C. Add 14
- D. Sumar 9



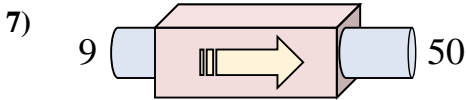
- A. Add 12
- B. Restar 15
- C. Subtract 11
- D. Subtract 18



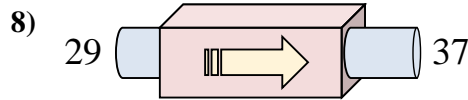
- A. Subtract 26
- B. Subtract 22
- C. Restar 25
- D. Subtract 30



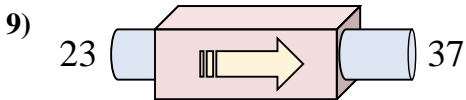
- A. Add 26
- B. Sumar 31
- C. Subtract 29
- D. Add 34



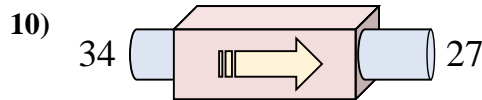
- A. Add 42
- B. Sumar 41
- C. Add 45
- D. Subtract 36



- A. Sumar 8
- B. Subtract 10
- C. Add 4
- D. Add 12



- A. Add 15
- B. Add 19
- C. Sumar 14
- D. Subtract 16



- A. Subtract 7
- B. Add 5
- C. Subtract 5
- D. Restar 7

Respuestas

- 1. **B**
- 2. **A**
- 3. **D**
- 4. **B**
- 5. **C**
- 6. **B**
- 7. **B**
- 8. **A**
- 9. **C**
- 10. **D**