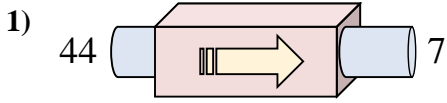
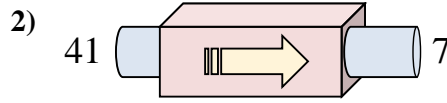




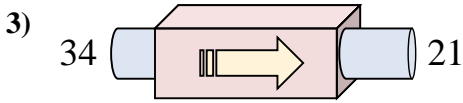
Determinar cuál regla está usando la máquina de funciones.



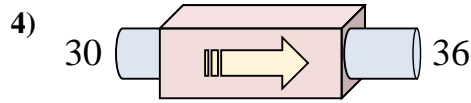
- A. Subtract 39
- B. Restar 37
- C. Add 36
- D. Subtract 41



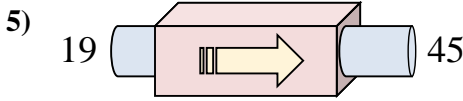
- A. Restar 34
- B. Subtract 31
- C. Subtract 39
- D. Add 37



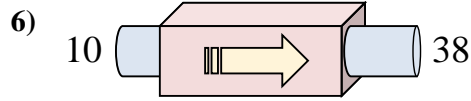
- A. Restar 13
- B. Subtract 14
- C. Subtract 9
- D. Add 9



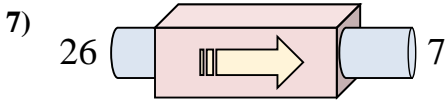
- A. Add 9
- B. Add 10
- C. Subtract 8
- D. Sumar 6



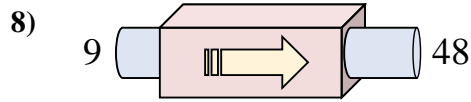
- A. Sumar 26
- B. Add 27
- C. Add 24
- D. Subtract 31



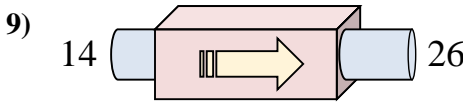
- A. Sumar 28
- B. Add 27
- C. Subtract 32
- D. Add 29



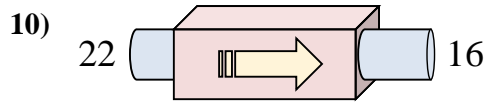
- A. Subtract 23
- B. Restar 19
- C. Subtract 19
- D. Subtract 22



- A. Add 39
- B. Subtract 43
- C. Sumar 39
- D. Subtract 42



- A. Add 11
- B. Add 17
- C. Subtract 12
- D. Sumar 12



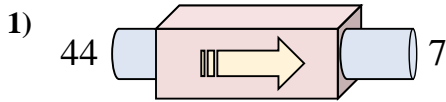
- A. Subtract 2
- B. Subtract 8
- C. Restar 6
- D. Subtract 4

**Respuestas**

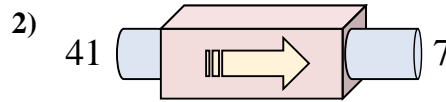
1. \_\_\_\_\_
2. \_\_\_\_\_
3. \_\_\_\_\_
4. \_\_\_\_\_
5. \_\_\_\_\_
6. \_\_\_\_\_
7. \_\_\_\_\_
8. \_\_\_\_\_
9. \_\_\_\_\_
10. \_\_\_\_\_



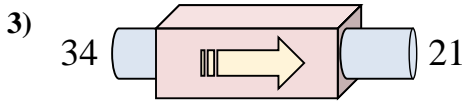
Determinar cuál regla está usando la máquina de funciones.



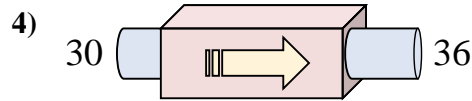
- A. Subtract 39
- B. Restar 37
- C. Add 36
- D. Subtract 41



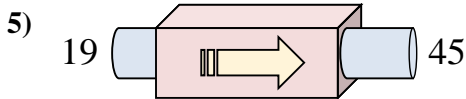
- A. Restar 34
- B. Subtract 31
- C. Subtract 39
- D. Add 37



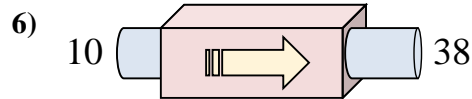
- A. Restar 13
- B. Subtract 14
- C. Subtract 9
- D. Add 9



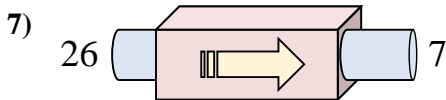
- A. Add 9
- B. Add 10
- C. Subtract 8
- D. Sumar 6



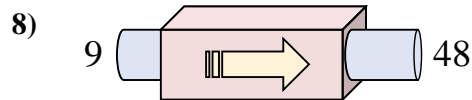
- A. Sumar 26
- B. Add 27
- C. Add 24
- D. Subtract 31



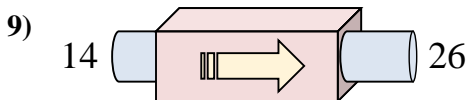
- A. Sumar 28
- B. Add 27
- C. Subtract 32
- D. Add 29



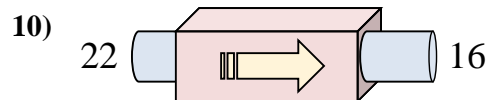
- A. Subtract 23
- B. Restar 19
- C. Subtract 19
- D. Subtract 22



- A. Add 39
- B. Subtract 43
- C. Sumar 39
- D. Subtract 42



- A. Add 11
- B. Add 17
- C. Subtract 12
- D. Sumar 12



- A. Subtract 2
- B. Subtract 8
- C. Restar 6
- D. Subtract 4

**Respuestas**1. **B**2. **A**3. **A**4. **D**5. **A**6. **A**7. **B**8. **C**9. **D**10. **C**