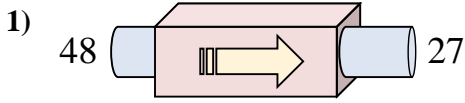
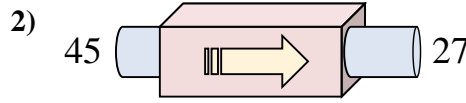




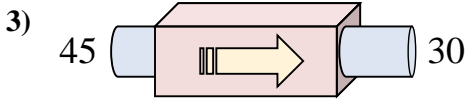
Determinar cuál regla está usando la máquina de funciones.



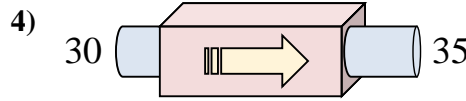
- A. Subtract 26
- B. Add 24
- C. Subtract 21
- D. Restar 21



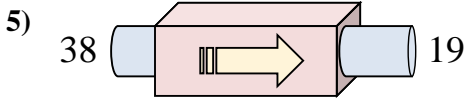
- A. Add 20
- B. Subtract 15
- C. Restar 18
- D. Subtract 19



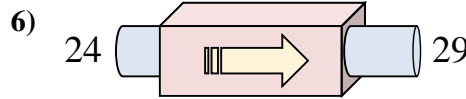
- A. Subtract 11
- B. Add 16
- C. Restar 15
- D. Subtract 10



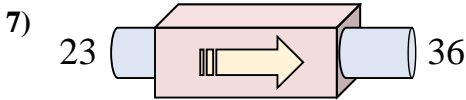
- A. Add 2
- B. Add 3
- C. Sumar 5
- D. Add 7



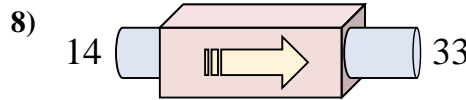
- A. Subtract 23
- B. Subtract 21
- C. Restar 19
- D. Subtract 20



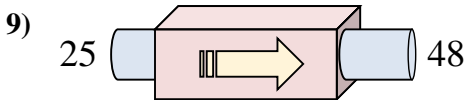
- A. Add 9
- B. Add 1
- C. Sumar 5
- D. Add 6



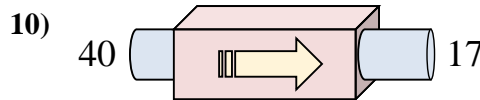
- A. Sumar 13
- B. Add 8
- C. Add 9
- D. Add 16



- A. Subtract 16
- B. Add 24
- C. Sumar 19
- D. Add 20



- A. Add 20
- B. Subtract 18
- C. Sumar 23
- D. Add 23



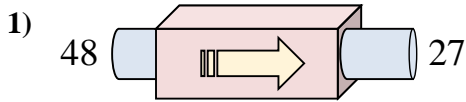
- A. Subtract 24
- B. Subtract 19
- C. Restar 23
- D. Add 19

Respuestas

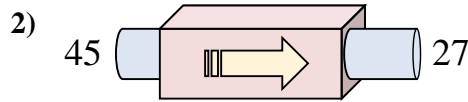
1. _____
2. _____
3. _____
4. _____
5. _____
6. _____
7. _____
8. _____
9. _____
10. _____



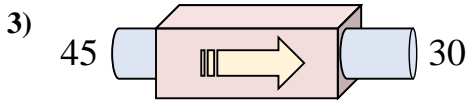
Determinar cuál regla está usando la máquina de funciones.



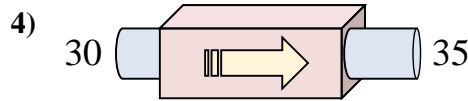
- A. Subtract 26
- B. Add 24
- C. Subtract 21
- D. Restar 21



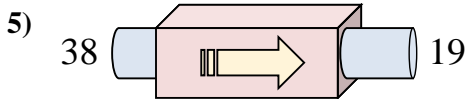
- A. Add 20
- B. Subtract 15
- C. Restar 18
- D. Subtract 19



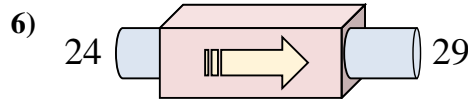
- A. Subtract 11
- B. Add 16
- C. Restar 15
- D. Subtract 10



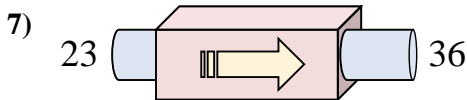
- A. Add 2
- B. Add 3
- C. Sumar 5
- D. Add 7



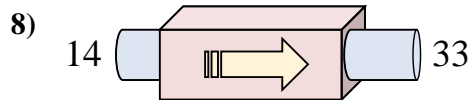
- A. Subtract 23
- B. Subtract 21
- C. Restar 19
- D. Subtract 20



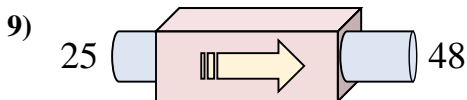
- A. Add 9
- B. Add 1
- C. Sumar 5
- D. Add 6



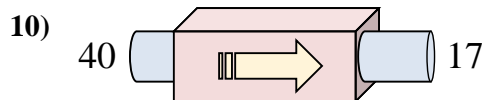
- A. Sumar 13
- B. Add 8
- C. Add 9
- D. Add 16



- A. Subtract 16
- B. Add 24
- C. Sumar 19
- D. Add 20



- A. Add 20
- B. Subtract 18
- C. Sumar 23
- D. Add 23



- A. Subtract 24
- B. Subtract 19
- C. Restar 23
- D. Add 19

Respuestas

- 1. **D**
- 2. **C**
- 3. **C**
- 4. **C**
- 5. **C**
- 6. **C**
- 7. **A**
- 8. **C**
- 9. **C**
- 10. **C**