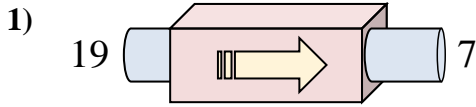
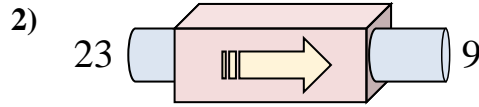




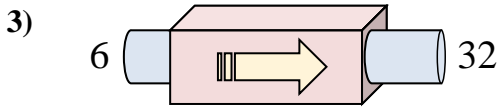
Determinar cuál regla está usando la máquina de funciones.

Respuestas

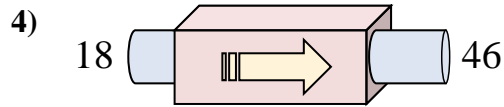
- A. Restar 16
- B. Restar 15
- C. Restar 17
- D. Restar 12



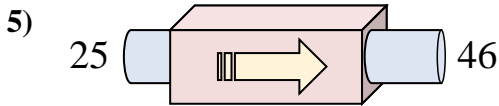
- A. Restar 14
- B. Sumar 9
- C. Restar 19
- D. Restar 13



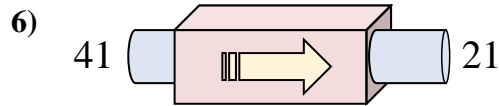
- A. Sumar 26
- B. Restar 29
- C. Restar 27
- D. Sumar 24



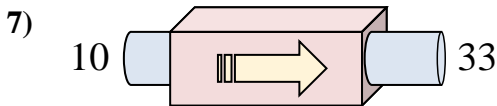
- A. Restar 25
- B. Sumar 28
- C. Sumar 33
- D. Restar 24



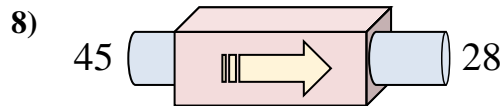
- A. Sumar 20
- B. Sumar 25
- C. Restar 21
- D. Sumar 21



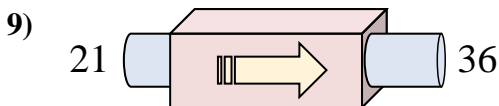
- A. Sumar 18
- B. Sumar 20
- C. Restar 20
- D. Restar 24



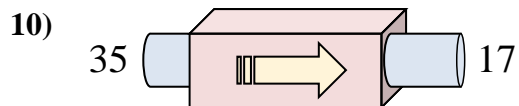
- A. Sumar 23
- B. Restar 20
- C. Restar 27
- D. Sumar 18



- A. Restar 16
- B. Restar 17
- C. Sumar 15
- D. Restar 15



- A. Sumar 15
- B. Sumar 16
- C. Restar 18
- D. Sumar 13

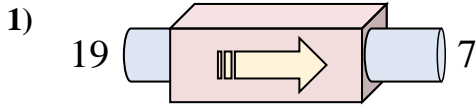


- A. Restar 22
- B. Restar 18
- C. Sumar 23
- D. Sumar 18

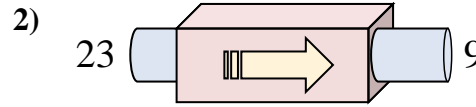
1. _____
2. _____
3. _____
4. _____
5. _____
6. _____
7. _____
8. _____
9. _____
10. _____



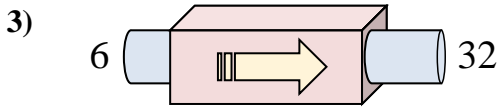
Determinar cuál regla está usando la máquina de funciones.



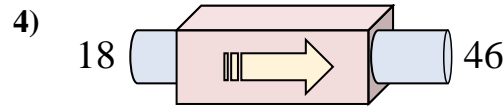
- A. Restar 16
- B. Restar 15
- C. Restar 17
- D. Restar 12



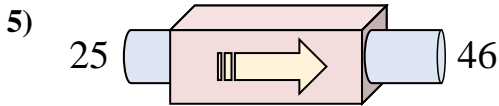
- A. Restar 14
- B. Sumar 9
- C. Restar 19
- D. Restar 13



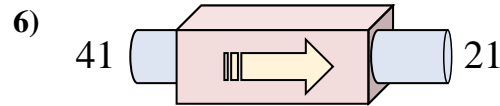
- A. Sumar 26
- B. Restar 29
- C. Restar 27
- D. Sumar 24



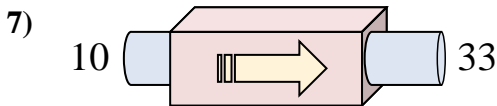
- A. Restar 25
- B. Sumar 28
- C. Sumar 33
- D. Restar 24



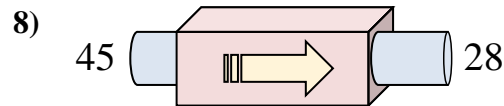
- A. Sumar 20
- B. Sumar 25
- C. Restar 21
- D. Sumar 21



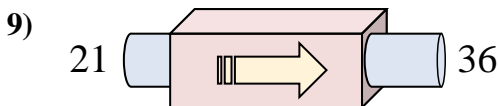
- A. Sumar 18
- B. Sumar 20
- C. Restar 20
- D. Restar 24



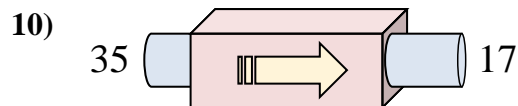
- A. Sumar 23
- B. Restar 20
- C. Restar 27
- D. Sumar 18



- A. Restar 16
- B. Restar 17
- C. Sumar 15
- D. Restar 15



- A. Sumar 15
- B. Sumar 16
- C. Restar 18
- D. Sumar 13



- A. Restar 22
- B. Restar 18
- C. Sumar 23
- D. Sumar 18

Respuestas

1. **D**
2. **A**
3. **A**
4. **B**
5. **D**
6. **C**
7. **A**
8. **B**
9. **A**
10. **B**