



Determina la regla que cada máquina de función está usando.

Ej)
Restar 16

1)
Sumar 14

2)
Sumar 23

3)
Restar 5

4)
Restar 24

5)
Sumar 17

6)
Sumar 23

7)
Restar 9

8)
Sumar 13

9)
Restar 25

10)
Restar 8

11)
Restar 8

Respuestas

Ej. **Restar 16**

1. **Sumar 14**

2. **Sumar 23**

3. **Restar 5**

4. **Restar 24**

5. **Sumar 17**

6. **Sumar 23**

7. **Restar 9**

8. **Sumar 13**

9. **Restar 25**

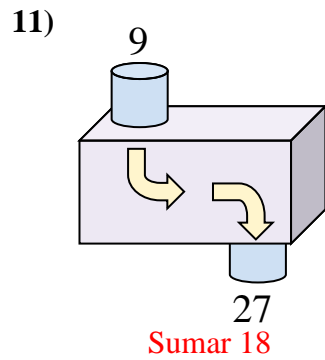
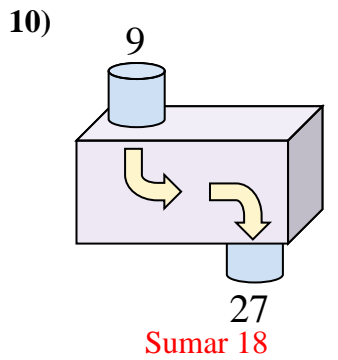
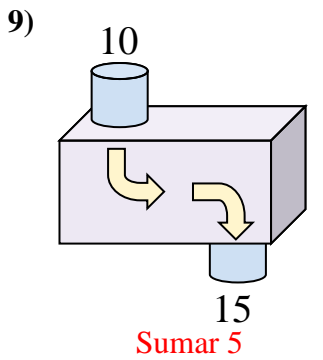
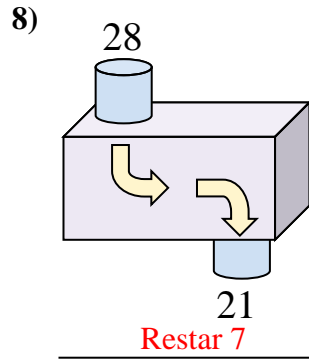
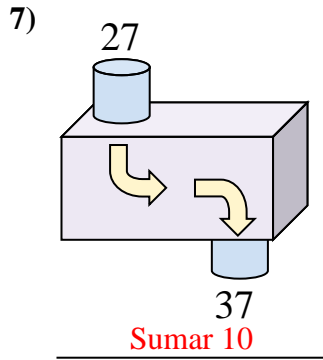
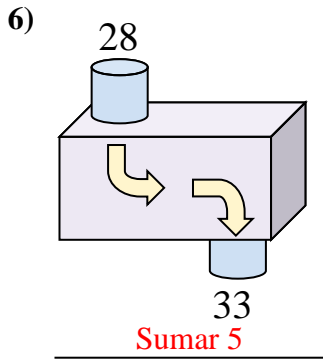
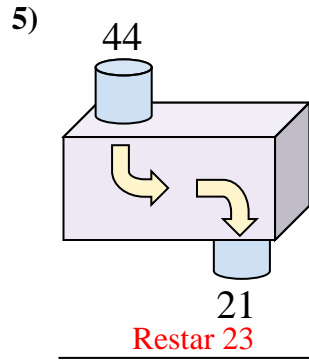
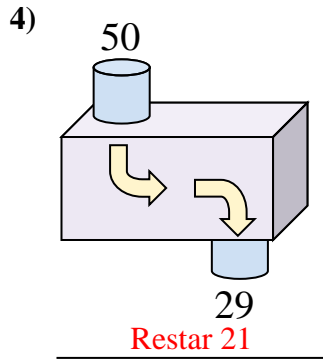
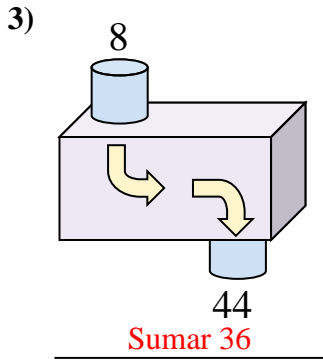
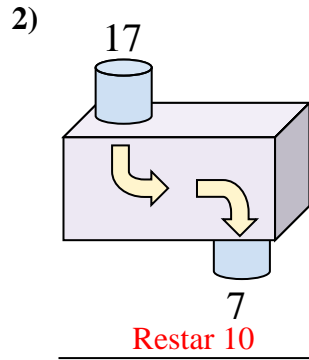
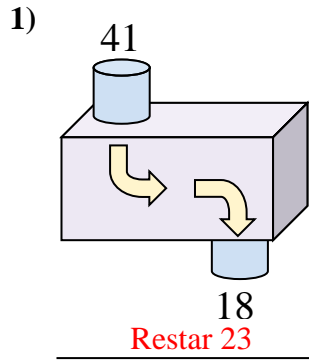
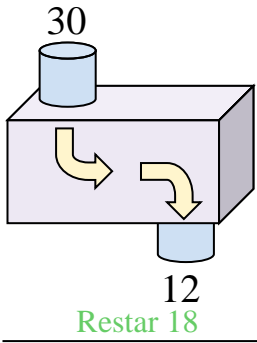
10. **Restar 8**

11. **Restar 8**



Determina la regla que cada máquina de función está usando.

Ej)



Respuestas

Ej. **Restar 18**

1. **Restar 23**

2. **Restar 10**

3. **Sumar 36**

4. **Restar 21**

5. **Restar 23**

6. **Sumar 5**

7. **Sumar 10**

8. **Restar 7**

9. **Sumar 5**

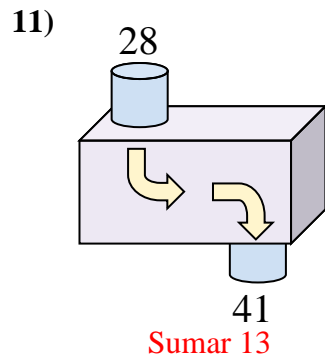
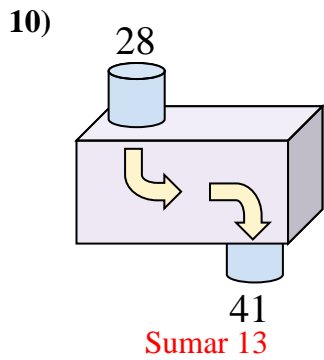
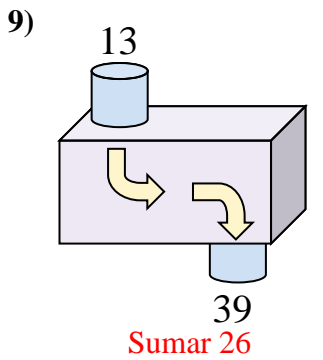
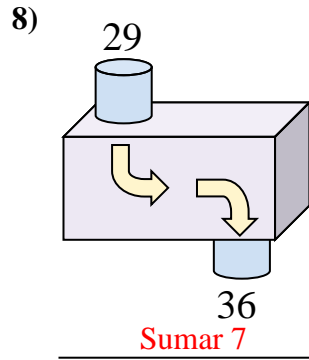
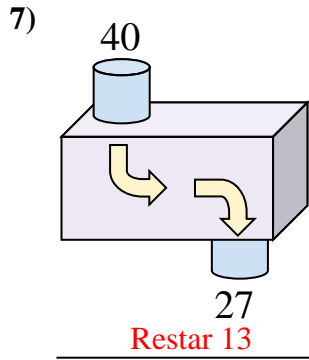
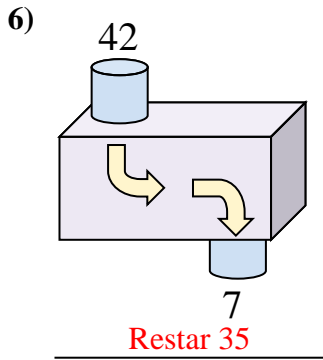
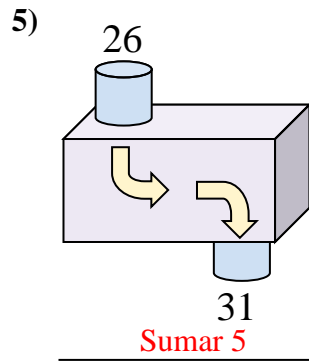
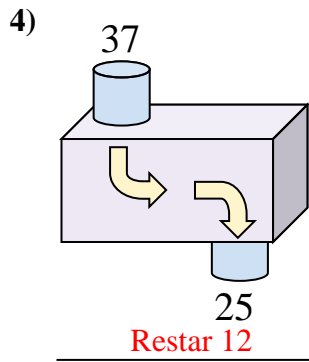
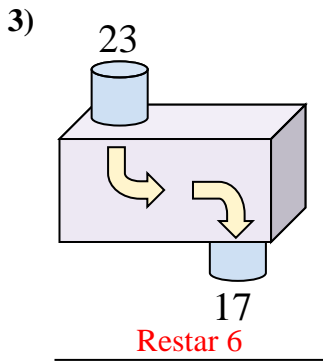
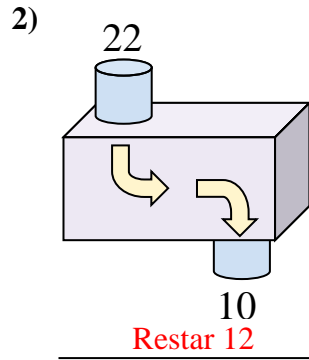
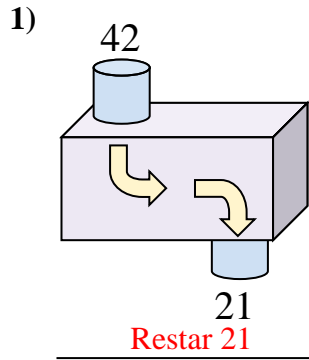
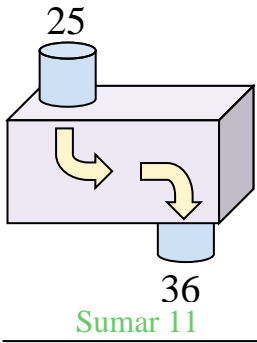
10. **Sumar 18**

11. **Sumar 18**



Determina la regla que cada máquina de función está usando.

Ej)



Respuestas

Ej. **Sumar 11**

1. **Restar 21**

2. **Restar 12**

3. **Restar 6**

4. **Restar 12**

5. **Sumar 5**

6. **Restar 35**

7. **Restar 13**

8. **Sumar 7**

9. **Sumar 26**

10. **Sumar 13**

11. **Sumar 13**

