



Usar las rectas numéricas para redondear cada número al 100 más cercano.

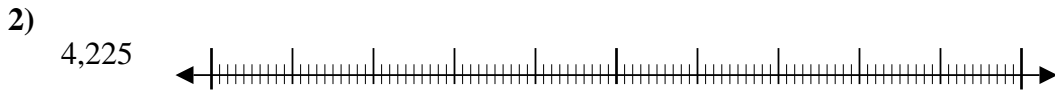


**Respuestas**

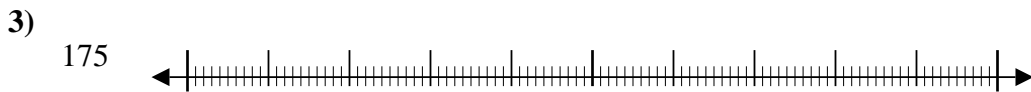
Ej. 90,600



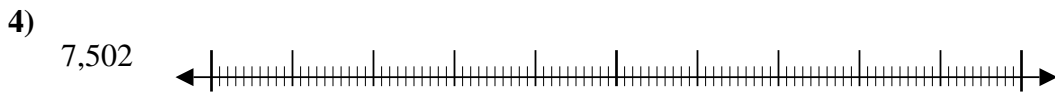
1. \_\_\_\_\_



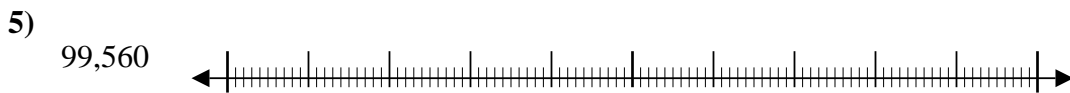
2. \_\_\_\_\_



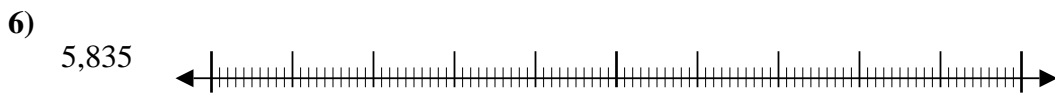
3. \_\_\_\_\_



4. \_\_\_\_\_



5. \_\_\_\_\_



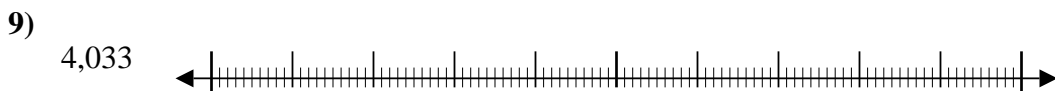
6. \_\_\_\_\_



7. \_\_\_\_\_



8. \_\_\_\_\_



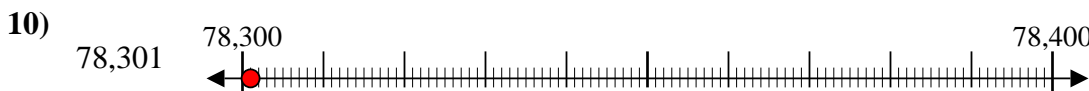
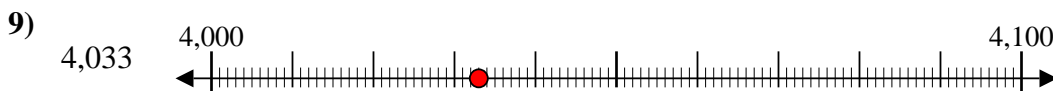
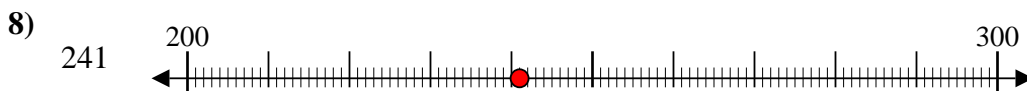
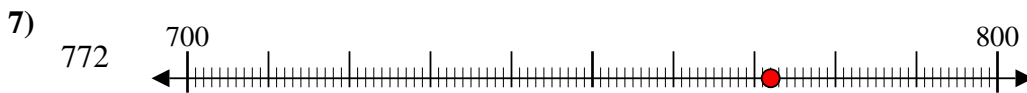
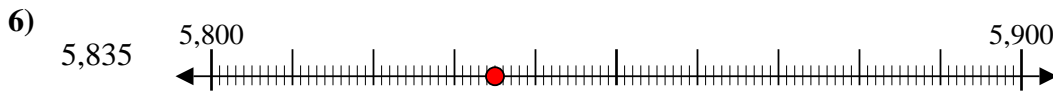
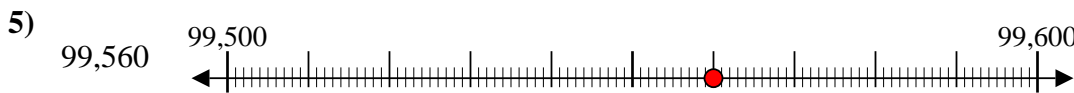
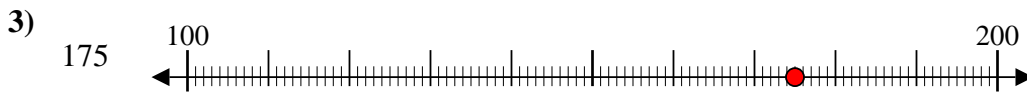
9. \_\_\_\_\_



10. \_\_\_\_\_



Usar las rectas numéricas para redondear cada número al 100 más cercano.



**Respuestas**

Ej. 90,600

1. 500

2. 4,200

3. 200

4. 7,500

5. 99,600

6. 5,800

7. 800

8. 200

9. 4,000

10. 78,300