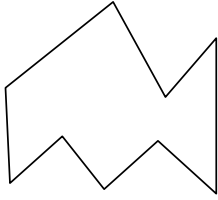




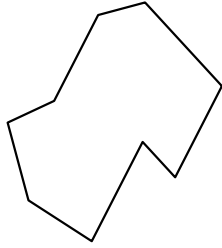
Identificar el tipo de forma mostrado.

Respuestas

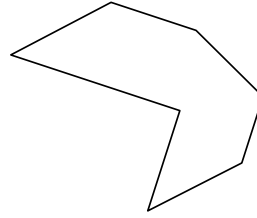
1)



2)



3)

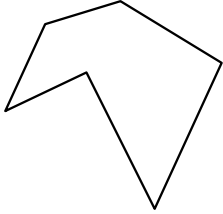


1. \_\_\_\_\_

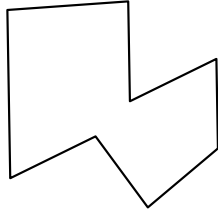
2. \_\_\_\_\_

3. \_\_\_\_\_

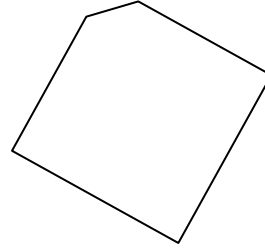
4)



5)



6)

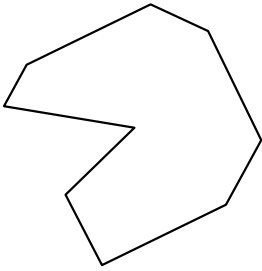


4. \_\_\_\_\_


5. \_\_\_\_\_

6. \_\_\_\_\_

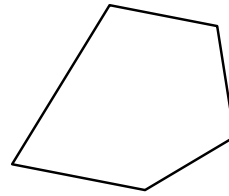
7)



8)



9)

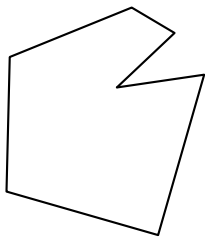


7. \_\_\_\_\_

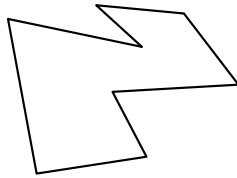
8. \_\_\_\_\_

9. \_\_\_\_\_

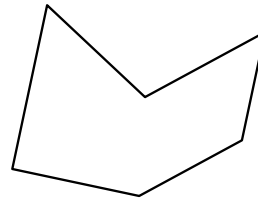
10)



11)



12)



10. \_\_\_\_\_

11. \_\_\_\_\_

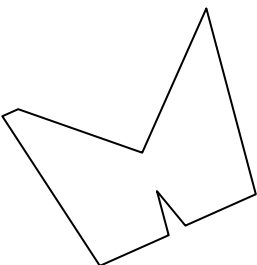
12. \_\_\_\_\_

13. \_\_\_\_\_

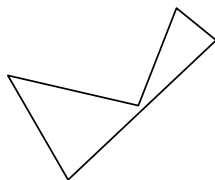
14. \_\_\_\_\_

15. \_\_\_\_\_

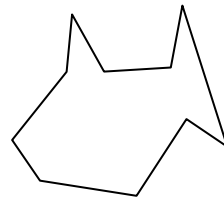
13)



14)



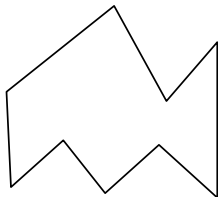
15)



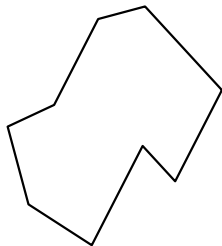


Identificar el tipo de forma mostrado.

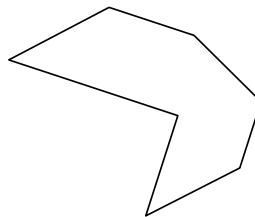
1)



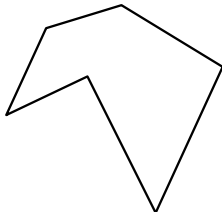
2)



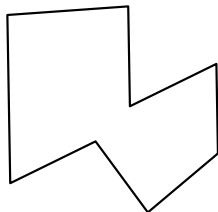
3)



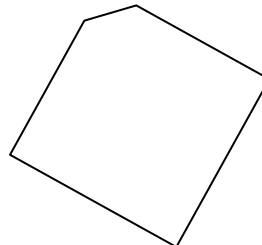
4)



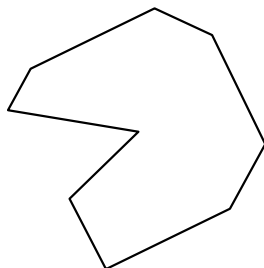
5)




6)



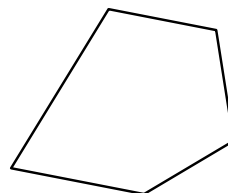
7)



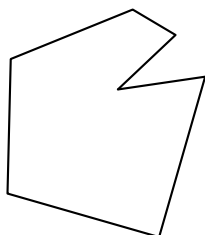
8)



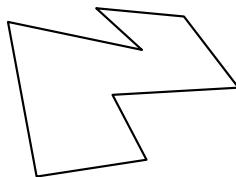
9)



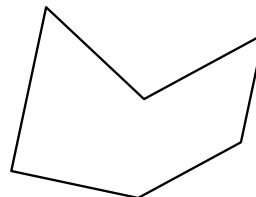
10)



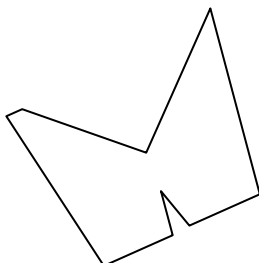
11)



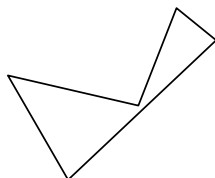
12)



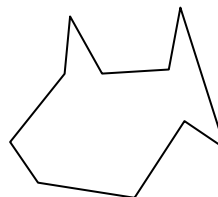
13)



14)



15)



Respuestas

1. nonagono

2. nonagono

3. heptágono

4. hexágono

5. octágonos

6. pentágono

7. nonagono

8. nonagono

9. pentágono

10. heptágono

11. octágonos

12. hexágono

13. nonagono

14. pentágono

15. decágono