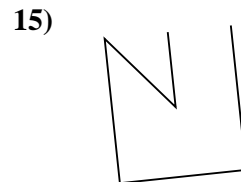
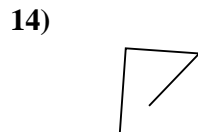
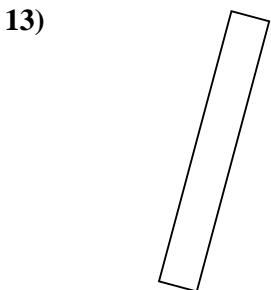
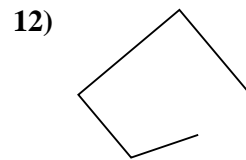
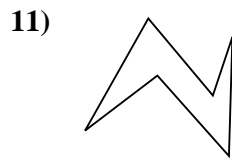
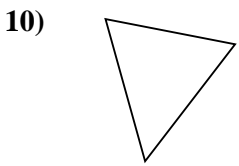
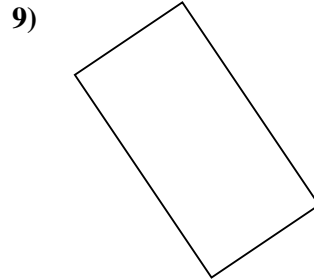
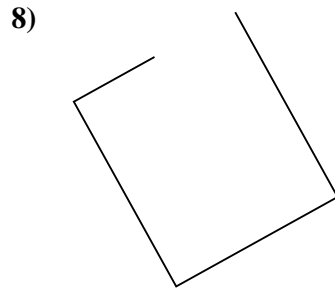
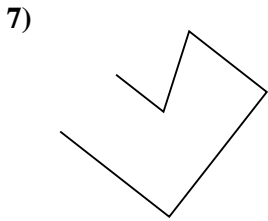

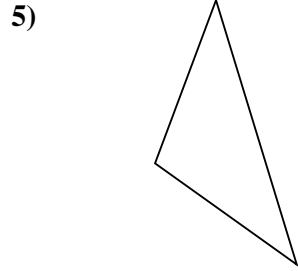
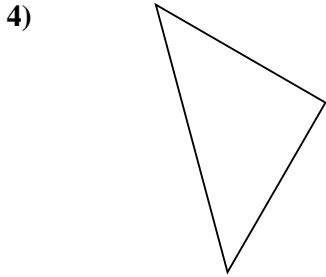
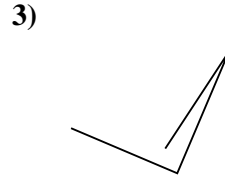
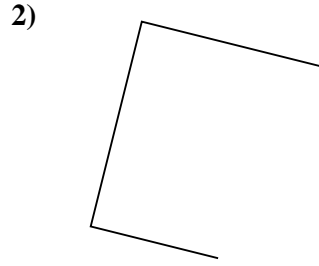
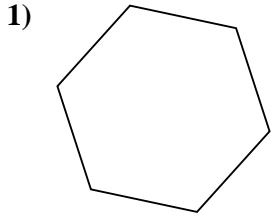




Determinar si la forma mostrada es un Triángulo, Cuadrado, Rectángulo, Hexágono u Otra.

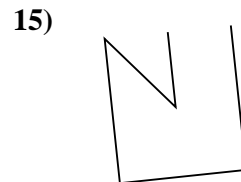
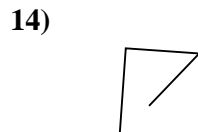
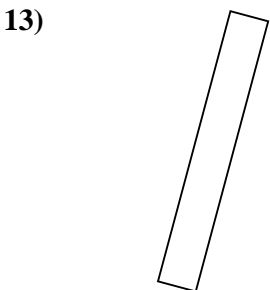
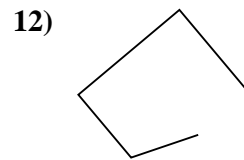
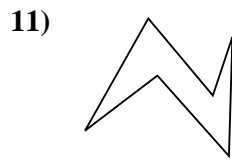
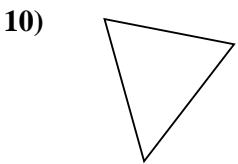
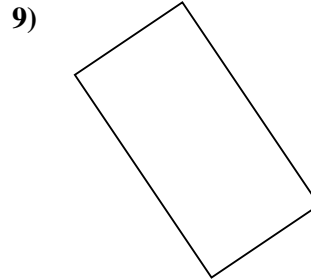
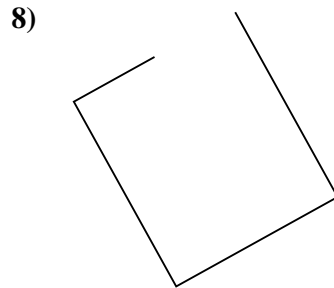
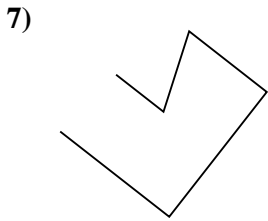

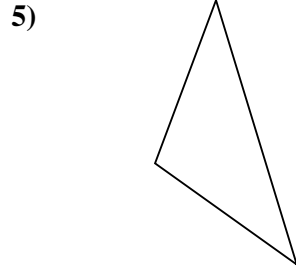
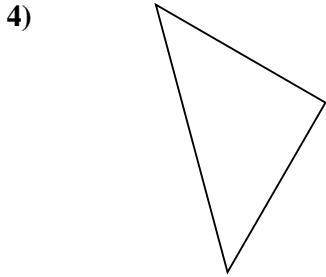
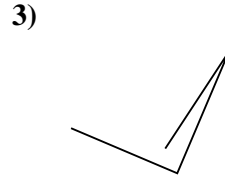
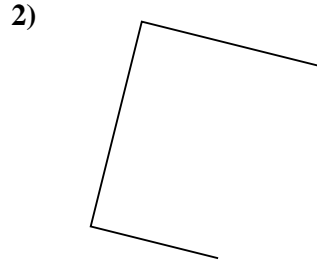
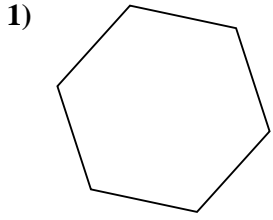


Respuestas

- 1. _____
- 2. _____
- 3. _____
- 4. _____
- 5. _____
- 6. _____
- 7. _____
- 8. _____
- 9. _____
- 10. _____
- 11. _____
- 12. _____
- 13. _____
- 14. _____
- 15. _____



Determinar si la forma mostrada es un Triángulo, Cuadrado, Rectángulo, Hexágono u Otra.



Respuestas

1. Hexágono

2. Otra

3. Otra

4. Triángulo

5. Triángulo

6. Hexágono

7. Otra

8. Otra

9. Rectángulo

10. Triángulo

11. Hexágono

12. Otra

13. Rectángulo

14. Otra

15. Otra