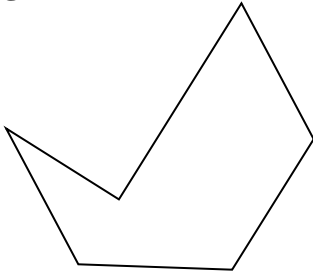


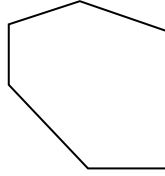


Determinar si la forma mostrada es un Triángulo, Cuadrado, Rectángulo, Hexágono u Otra.

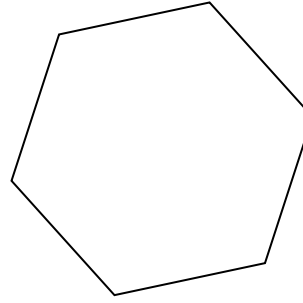
Respuestas



2)



3)



1. _____

2. _____

3. _____

4. _____

5. _____

6. _____

7. _____

8. _____

9. _____

10. _____

11. _____

12. _____

13. _____

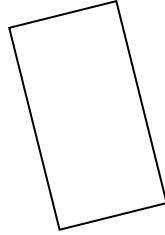
14. _____

15. _____


4)




5)



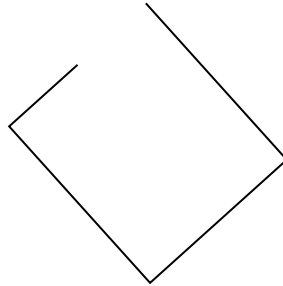
6)



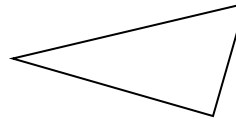
7)



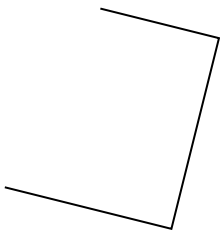
8)



9)



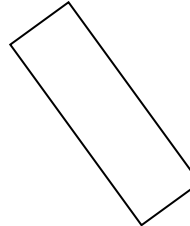
10)



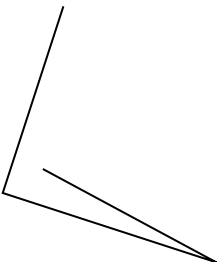
11)



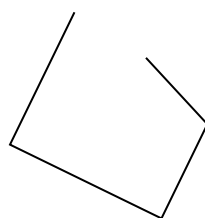
12)



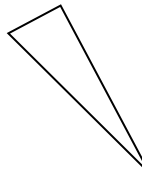
13)



14)

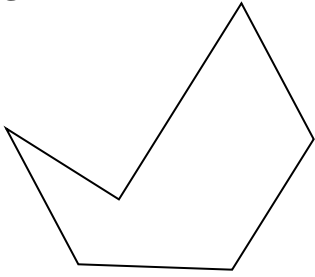


15)

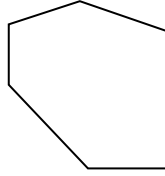




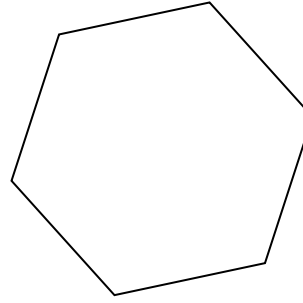
Determinar si la forma mostrada es un Triángulo, Cuadrado, Rectángulo, Hexágono u Otra.



2)



3)



Respuestas

1. Hexágono

2. Hexágono

3. Hexágono

4. Otra

5. Rectángulo

6. Otra

7. Otra

8. Otra

9. Triángulo

10. Otra

11. Triángulo

12. Rectángulo

13. Otra

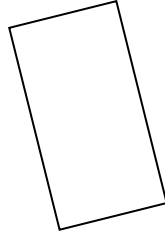
14. Otra

15. Triángulo


4)



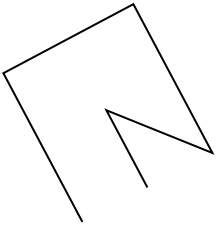
5)



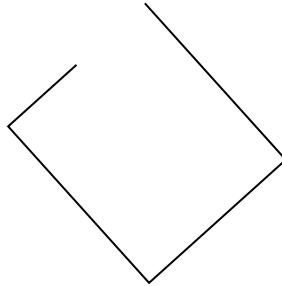
6)



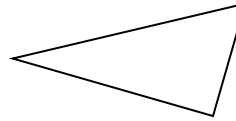
7)



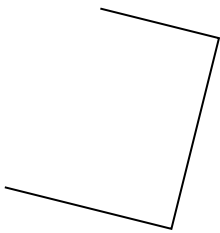
8)



9)



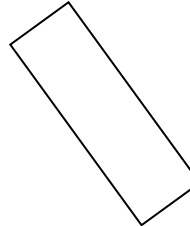
10)



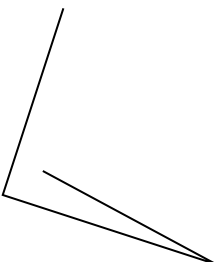
11)



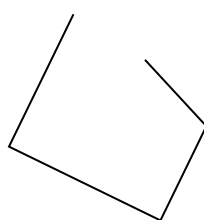
12)



13)



14)



15)

