




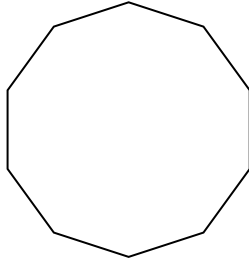
Determinar si la forma mostrada es una forma regular o irregular.

**Respuestas**

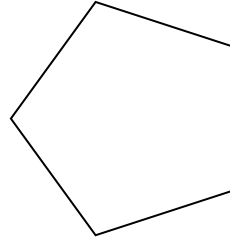
1)



2)



3)

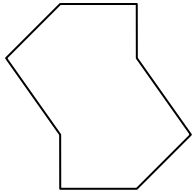


1. \_\_\_\_\_

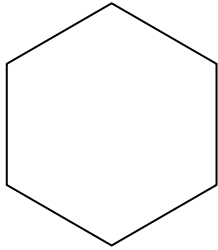
2. \_\_\_\_\_

3. \_\_\_\_\_

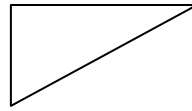
4)



5)



6)

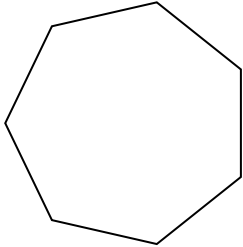


4. \_\_\_\_\_

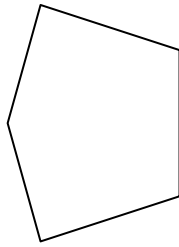
5. \_\_\_\_\_

6. \_\_\_\_\_


7)



8)



9)



7. \_\_\_\_\_

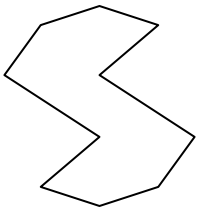
8. \_\_\_\_\_

9. \_\_\_\_\_

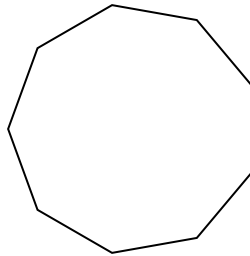
10. \_\_\_\_\_

11. \_\_\_\_\_

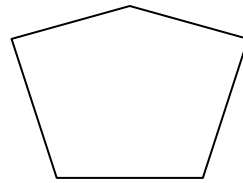
10)



11)



12)



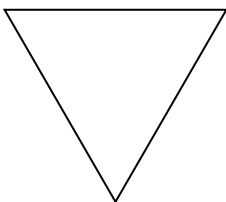
12. \_\_\_\_\_

13. \_\_\_\_\_

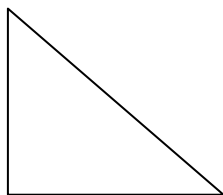
14. \_\_\_\_\_

15. \_\_\_\_\_

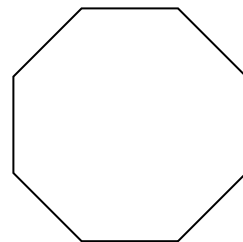
13)



14)

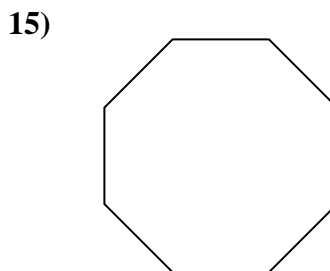
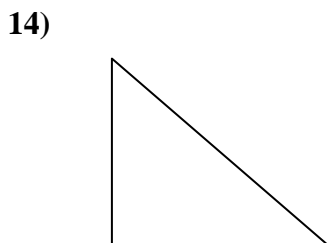
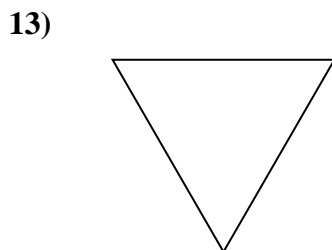
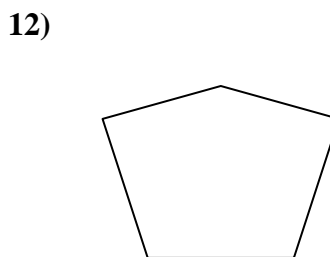
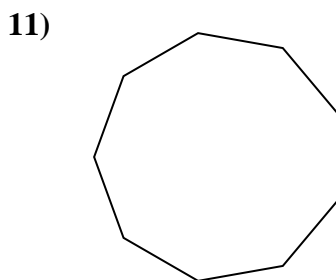
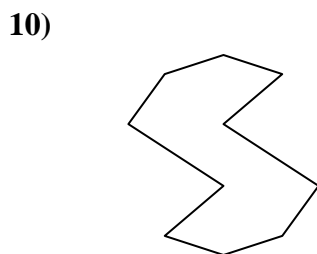
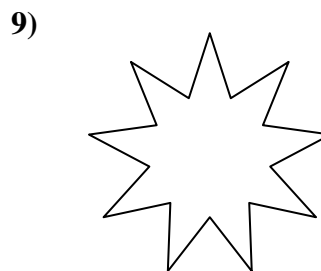
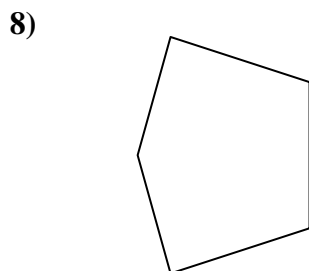
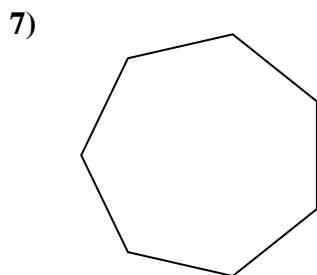
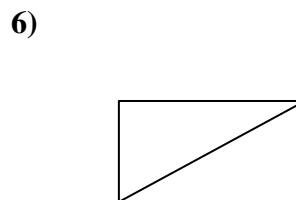
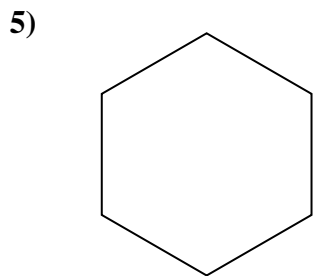
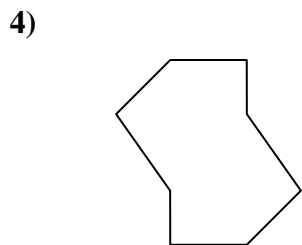
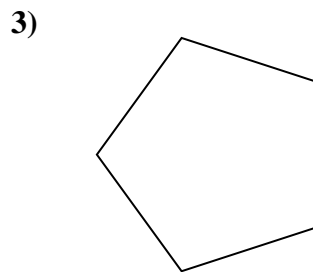
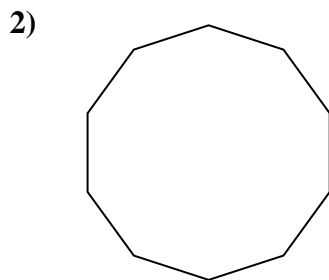



15)





Determinar si la forma mostrada es una forma regular o irregular.



**Respuestas**

1. irregular

2. regular

3. regular

4. irregular

5. regular

6. irregular

7. regular

8. irregular

9. irregular

10. irregular

11. regular

12. irregular

13. regular

14. irregular

15. regular