





Determinar si la forma mostrada es una forma regular o irregular.

Respuestas


1)



2)



3)



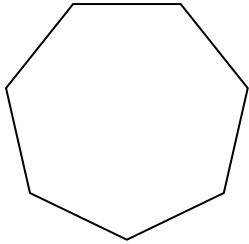
1. _____

2. _____

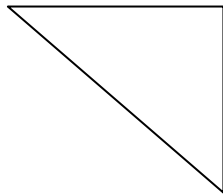
3. _____

4. _____

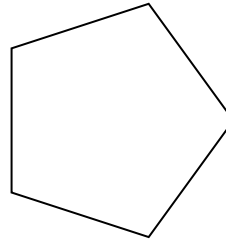
4)



5)



6)

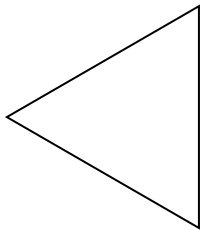


5. _____

6. _____

7. _____

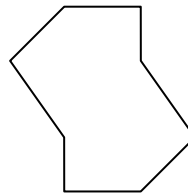
7)



8)



9)




8. _____

9. _____

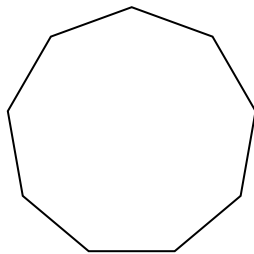
10. _____

11. _____

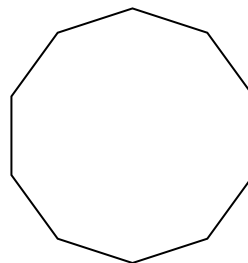
10)



11)



12)



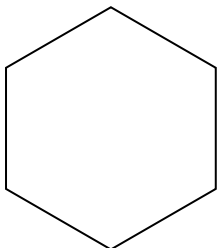
12. _____

13. _____


14. _____

15. _____

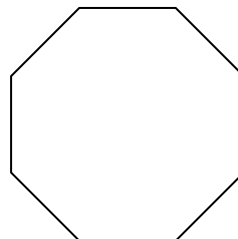
13)



14)




15)






Determinar si la forma mostrada es una forma regular o irregular.


1)



2)



3)



Respuestas

1. IrRegularee

2. IrRegularee

3. Regulare

4. Regulare

5. IrRegularee

6. Regulare

7. Regulare

8. IrRegularee

9. IrRegularee

10. IrRegularee

11. Regulare

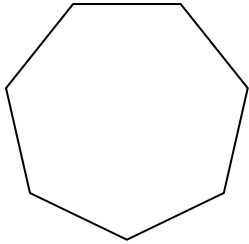
12. Regulare

13. Regulare

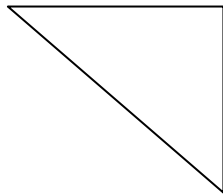
14. IrRegularee

15. Regulare

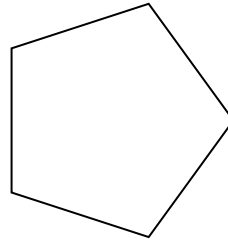
4)



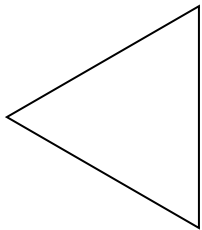
5)



6)



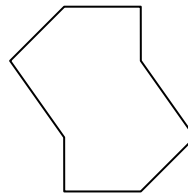
7)




8)



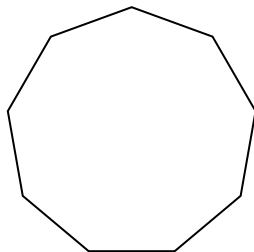
9)



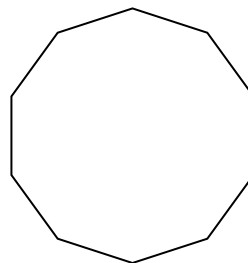
10)



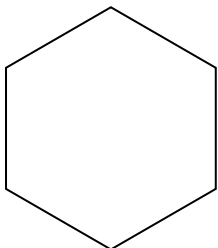
11)




12)



13)



14)



15)

