




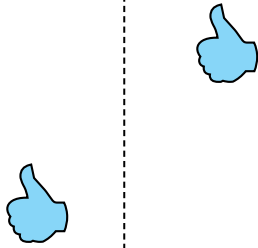
Determinar si la forma se está trasladando (deslizando), rotando (girando) o reflejando (volteando)

**Respuestas**

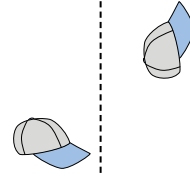
1)



2)



3)




1. \_\_\_\_\_

2. \_\_\_\_\_


3. \_\_\_\_\_

4. \_\_\_\_\_

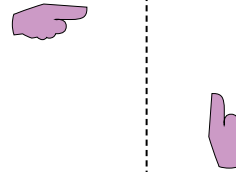
4)



5)



6)



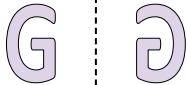
5. \_\_\_\_\_

6. \_\_\_\_\_

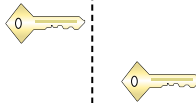
7. \_\_\_\_\_

8. \_\_\_\_\_

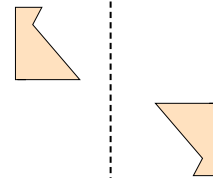
7)



8)



9)



9. \_\_\_\_\_

10. \_\_\_\_\_

11. \_\_\_\_\_

12. \_\_\_\_\_

10)



11)



12)



13. \_\_\_\_\_

14. \_\_\_\_\_

15. \_\_\_\_\_



13)



14)


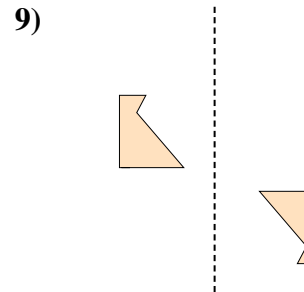
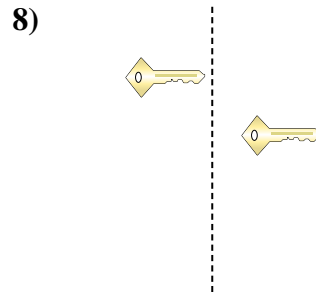
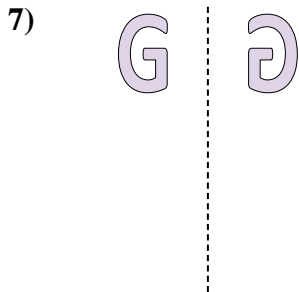
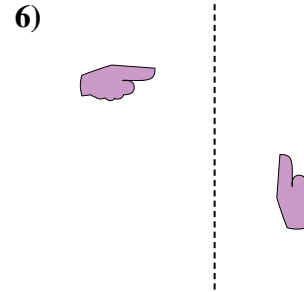
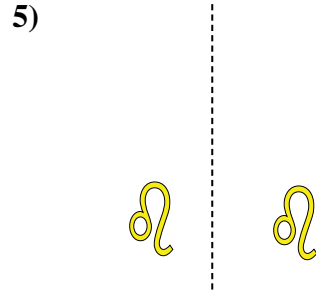
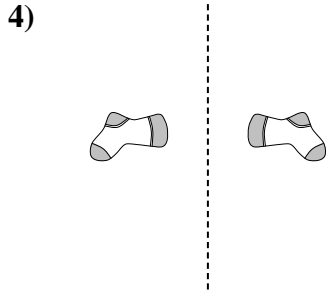
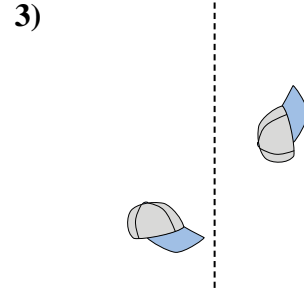
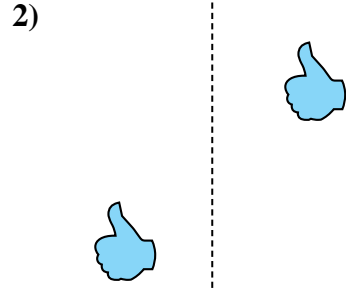
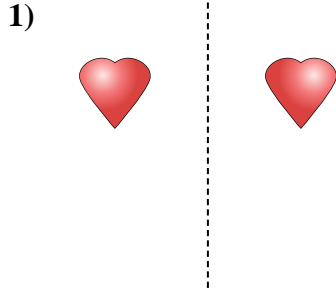


15)





Determinar si la forma se está trasladando (deslizando), rotando (girando) o reflejando (volteando)



Respuestas

1. volteando

2. deslizando

3. girando

4. volteando

5. deslizando

6. girando

7. volteando

8. deslizando

9. girando

10. volteando

11. deslizando

12. girando

13. volteando

14. deslizando

15. girando