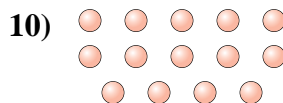

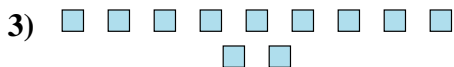
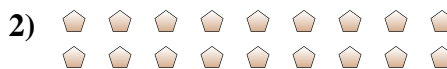




Determinar si el número de formas en la caja es par o impar.



Respuestas

1. _____

2. _____

3. _____

4. _____

5. _____

6. _____

7. _____

8. _____

9. _____

10. _____



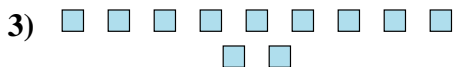
Determinar si el número de formas en la caja es par o impar.



20




18



11



12



20



7



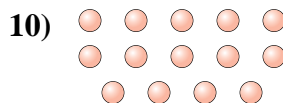
7



8



13



14

Respuestas

1. Par

2. Par

3. Impar

4. Par

5. Par

6. Impar

7. Impar

8. Par

9. Impar

10. Par