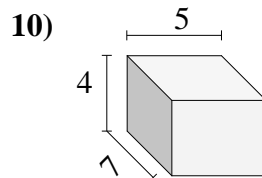
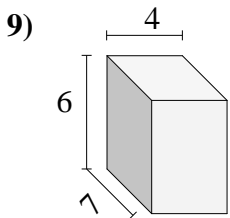
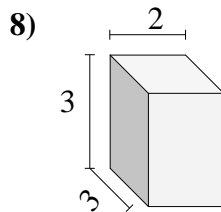
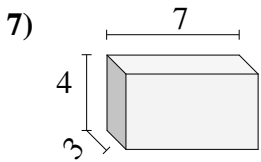
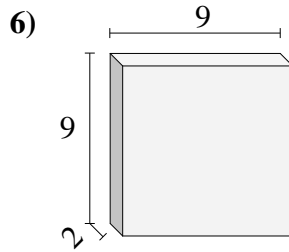
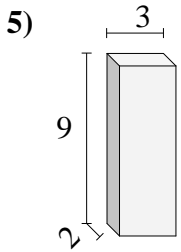
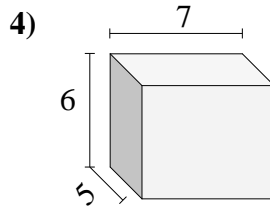
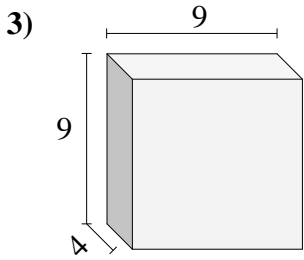
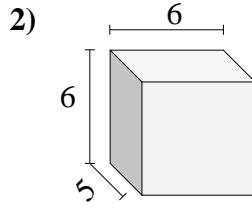
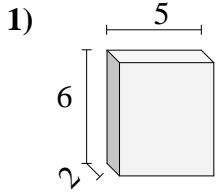




Encontrar el volumen de cada prisma rectangular. En cm (no estan a escala).

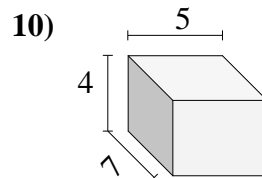
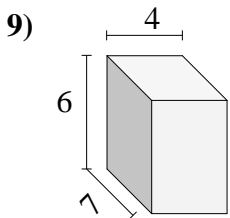
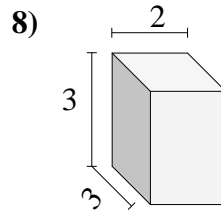
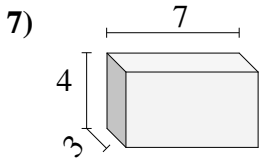
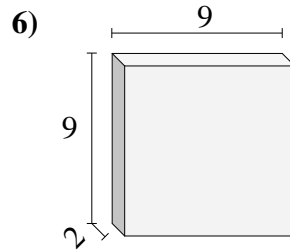
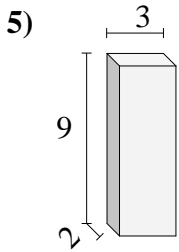
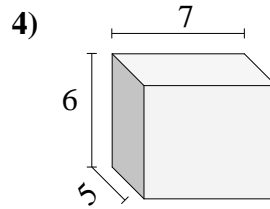
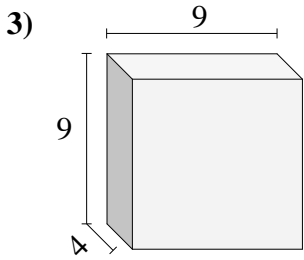
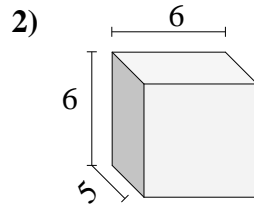
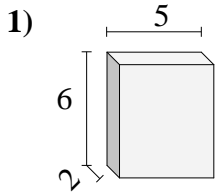


**Respuestas**

- 1. \_\_\_\_\_
- 2. \_\_\_\_\_
- 3. \_\_\_\_\_
- 4. \_\_\_\_\_
- 5. \_\_\_\_\_
- 6. \_\_\_\_\_
- 7. \_\_\_\_\_
- 8. \_\_\_\_\_
- 9. \_\_\_\_\_
- 10. \_\_\_\_\_



Encontrar el volumen de cada prisma rectangular. En cm (no estan a escala).



Respuestas

1. 60
2. 180
3. 324
4. 210
5. 54
6. 162
7. 84
8. 18
9. 168
10. 140