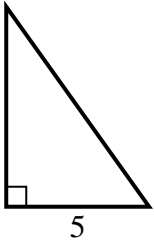


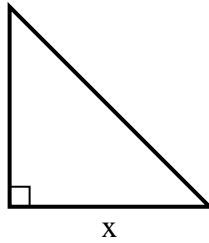


Encuentra el valor de X.

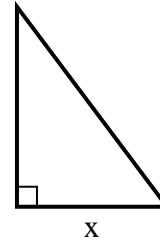
1) area = $17.5 u^2$



2) area = $8 u^2$



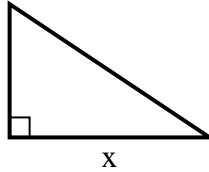
3) area = $6 u^2$



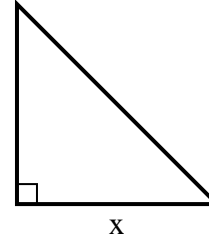
4) area = $12 u^2$



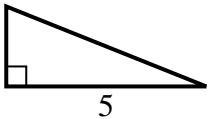
5) area = $3 u^2$



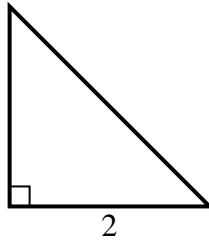
6) area = $12.5 u^2$



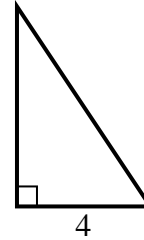
7) area = $5 u^2$



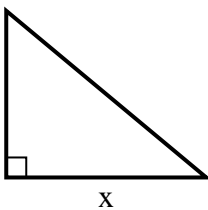
8) area = $2 u^2$



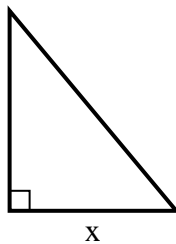
9) area = $12 u^2$



10) area = $15 u^2$



11) area = $15 u^2$



12) area = $6 u^2$



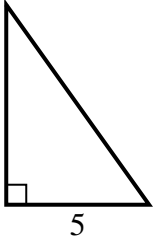
Respuestas

1. _____
2. _____
3. _____
4. _____
5. _____
6. _____
7. _____
8. _____
9. _____
10. _____
11. _____
12. _____

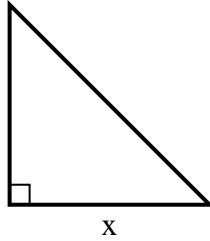


Encuentra el valor de X.

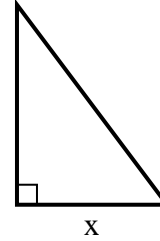
1) area = $17.5 u^2$



2) area = $8 u^2$



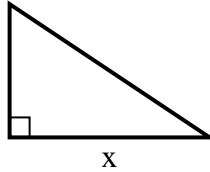
3) area = $6 u^2$



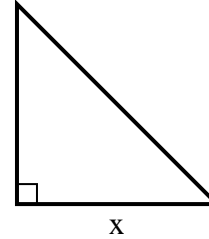
4) area = $12 u^2$



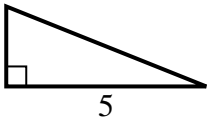
5) area = $3 u^2$



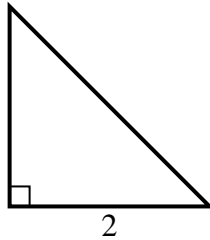
6) area = $12.5 u^2$



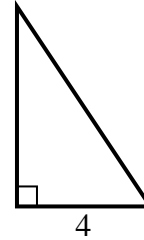
7) area = $5 u^2$



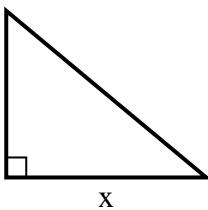
8) area = $2 u^2$



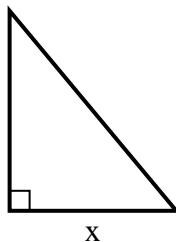
9) area = $12 u^2$



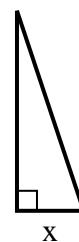
10) area = $15 u^2$



11) area = $15 u^2$



12) area = $6 u^2$



Respuestas

1. 7

2. 4

3. 3

4. 3

5. 3

6. 5

7. 2

8. 2

9. 6

10. 6

11. 5

12. 2