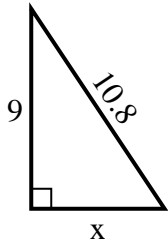




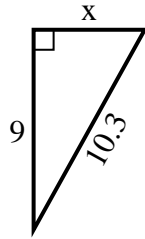
**SPANISH\_INSTRUCTIONS**

**Respuestas**

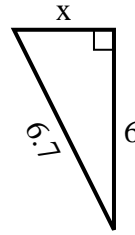
1) perímetro = 25.8 u



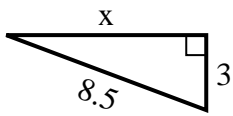
2) perímetro = 24.3 u



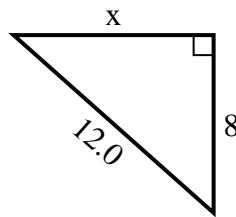
3) perímetro = 15.7 u



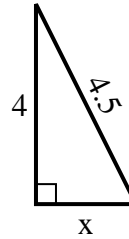
4) perímetro = 19.5 u



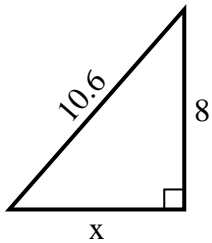
5) perímetro = 29 u



6) perímetro = 10.5 u



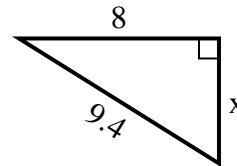
7) perímetro = 25.6 u



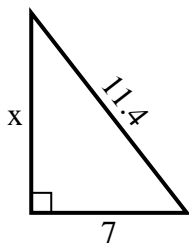
8) perímetro = 14.3 u



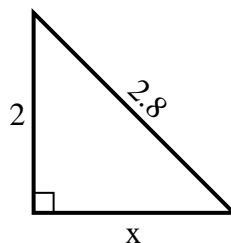
9) perímetro = 22.4 u



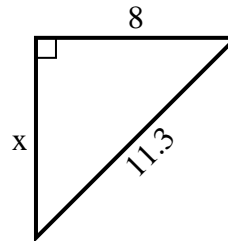
10) perímetro = 27.4 u



11) perímetro = 6.8 u



12) perímetro = 27.3 u



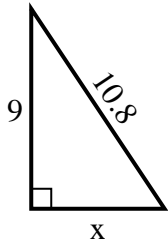
1. \_\_\_\_\_
2. \_\_\_\_\_
3. \_\_\_\_\_
4. \_\_\_\_\_
5. \_\_\_\_\_
6. \_\_\_\_\_
7. \_\_\_\_\_
8. \_\_\_\_\_
9. \_\_\_\_\_
10. \_\_\_\_\_
11. \_\_\_\_\_
12. \_\_\_\_\_



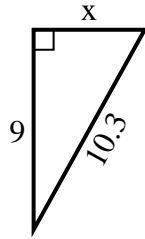
**SPANISH\_INSTRUCTIONS**

**Respuestas**

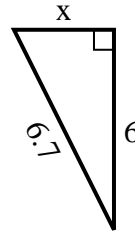
1) perímetro = 25.8 u



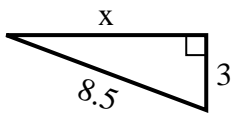
2) perímetro = 24.3 u



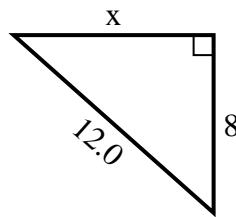
3) perímetro = 15.7 u



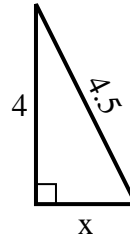
4) perímetro = 19.5 u



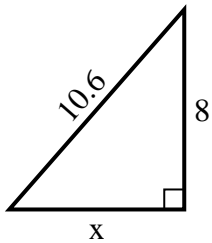
5) perímetro = 29 u



6) perímetro = 10.5 u



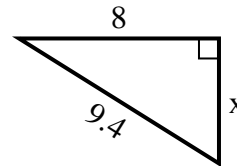
7) perímetro = 25.6 u



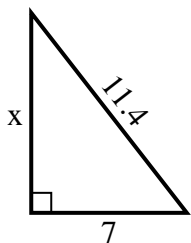
8) perímetro = 14.3 u



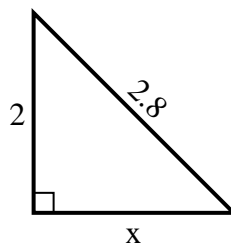
9) perímetro = 22.4 u



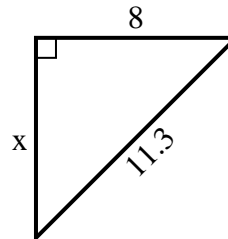
10) perímetro = 27.4 u



11) perímetro = 6.8 u



12) perímetro = 27.3 u



1. 6
2. 5
3. 3
4. 8
5. 9
6. 2
7. 7
8. 2
9. 5
10. 9
11. 2
12. 8