



Determina si el ángulo mostrado es 'mayor', 'menor' o 'igual' a 90°.

**Respuestas**

Ej)



1)



2)

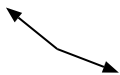


Ej. menor

1. \_\_\_\_\_

2. \_\_\_\_\_

3)



4)



5)

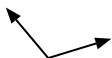


3. \_\_\_\_\_

4. \_\_\_\_\_

5. \_\_\_\_\_

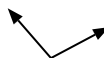
6)



7)



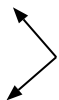
8)



6. \_\_\_\_\_

7. \_\_\_\_\_

9)



10)



11)



9. \_\_\_\_\_

10. \_\_\_\_\_

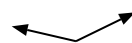
12)



13)



14)



11. \_\_\_\_\_

12. \_\_\_\_\_

13. \_\_\_\_\_

15)



16)



17)



14. \_\_\_\_\_

15. \_\_\_\_\_

16. \_\_\_\_\_

18)



19)



20)



17. \_\_\_\_\_

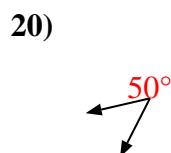
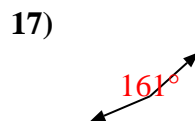
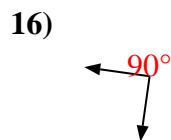
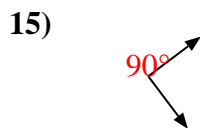
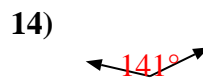
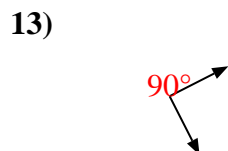
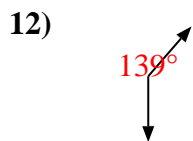
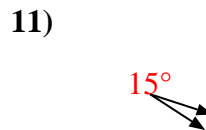
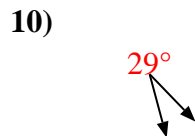
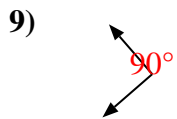
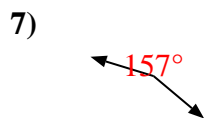
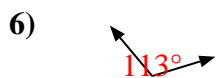

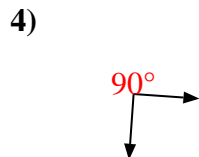
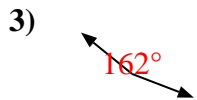
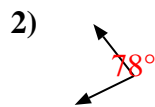
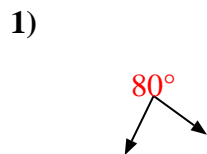
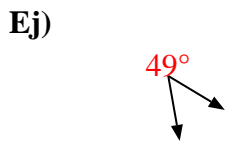
18. \_\_\_\_\_

19. \_\_\_\_\_

20. \_\_\_\_\_



Determina si el ángulo mostrado es 'mayor', 'menor' o 'igual' a  $90^\circ$ .



**Respuestas**

Ej. menor

1. menor

2. menor

3. mayor

4. igual

5. menor

6. mayor

7. mayor

8. mayor

9. igual

10. menor

11. menor

12. mayor

13. igual

14. mayor

15. igual

16. igual

17. mayor

18. igual

19. igual

20. menor