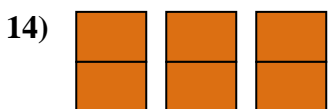
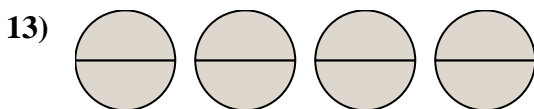
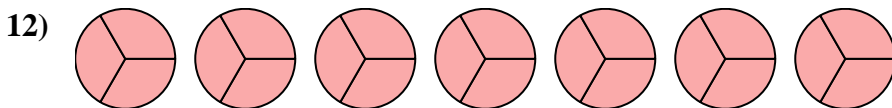
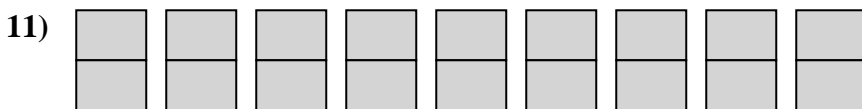
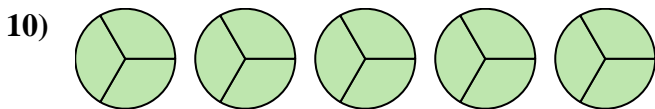
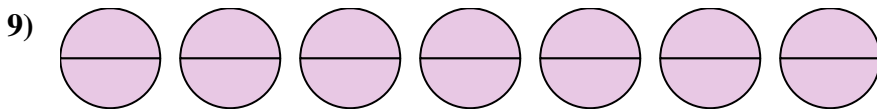
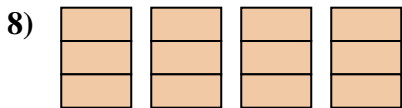
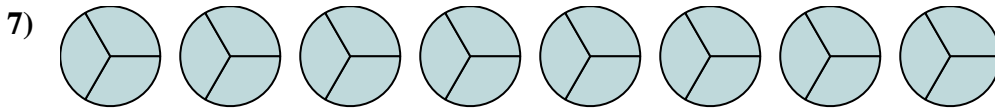
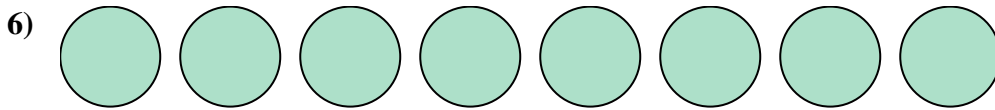
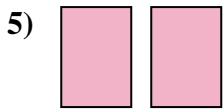

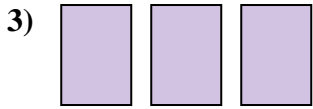
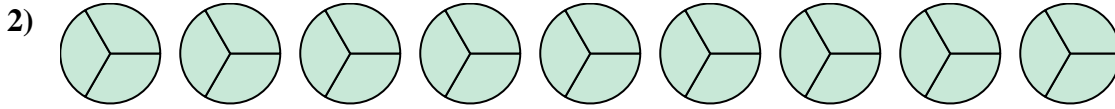
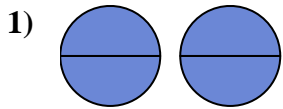




Nombre: _____

Escribe la cantidad sombreada como una fracción.



Respuestas

1. _____

2. _____

3. _____

4. _____

5. _____

6. _____

7. _____

8. _____

9. _____

10. _____

11. _____

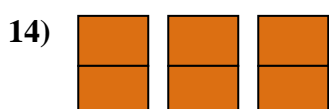
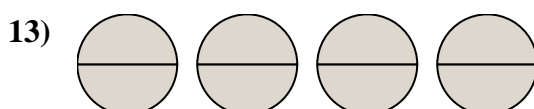
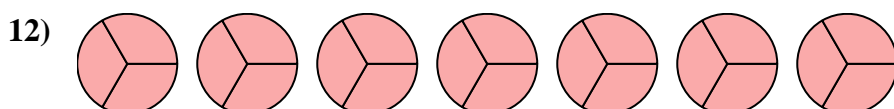
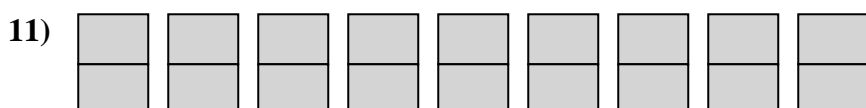
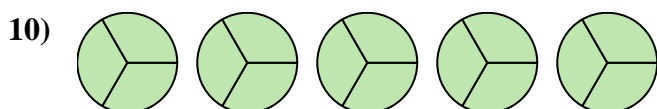
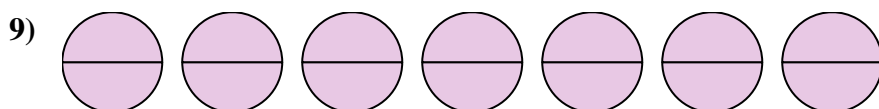
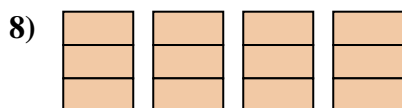
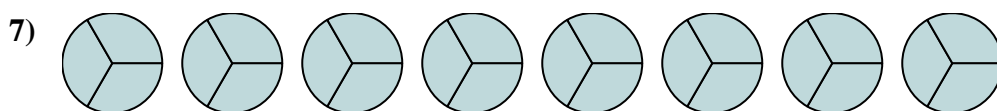
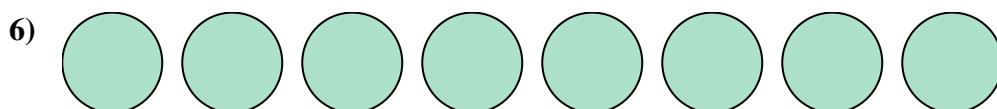
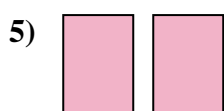

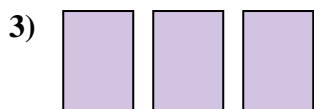
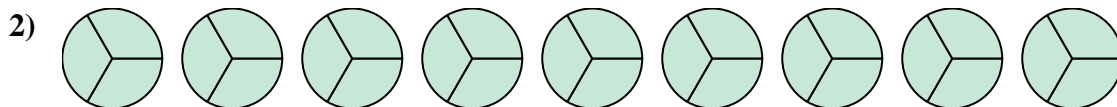
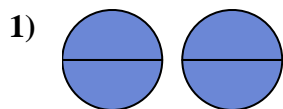
12. _____

13. _____

14. _____



Escribe la cantidad sombreada como una fracción.

**Respuestas**

1. $\frac{4}{2}$

2. $\frac{27}{3}$

3. $\frac{3}{1}$

4. $\frac{7}{1}$

5. $\frac{2}{1}$

6. $\frac{8}{1}$

7. $\frac{24}{3}$

8. $\frac{12}{3}$

9. $\frac{14}{2}$

10. $\frac{15}{3}$

11. $\frac{18}{2}$

12. $\frac{21}{3}$

13. $\frac{8}{2}$

14. $\frac{6}{2}$