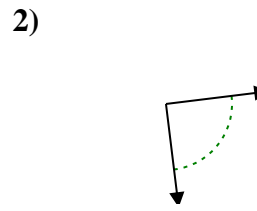
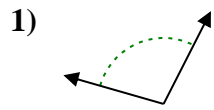
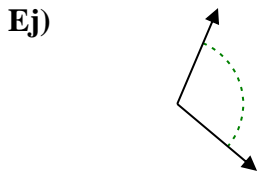




Determina si el ángulo mostrado es agudo, obtuso, recto o llano.

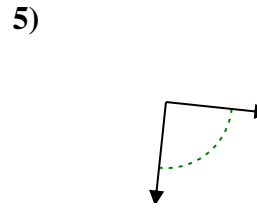
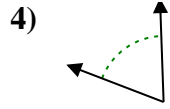
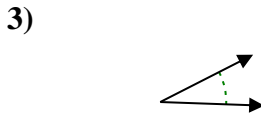
**Respuestas**



Ej. obtuso

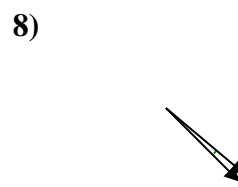
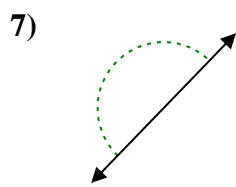
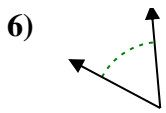
1. \_\_\_\_\_

2. \_\_\_\_\_



3. \_\_\_\_\_

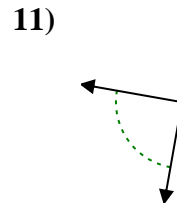
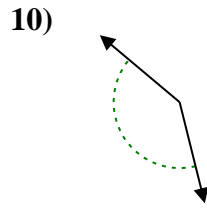
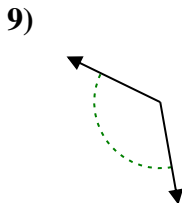
4. \_\_\_\_\_



5. \_\_\_\_\_

6. \_\_\_\_\_

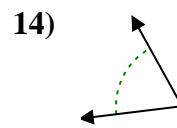
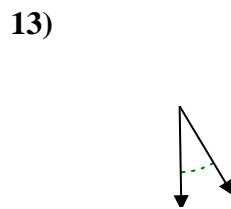
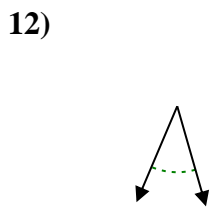
7. \_\_\_\_\_



8. \_\_\_\_\_

9. \_\_\_\_\_

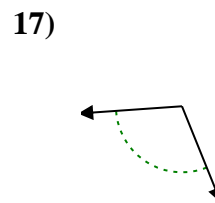
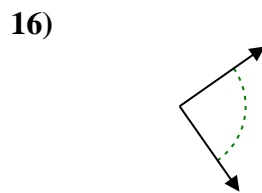
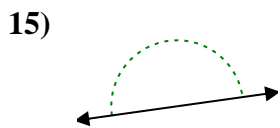
10. \_\_\_\_\_



11. \_\_\_\_\_

12. \_\_\_\_\_

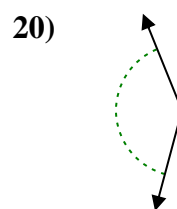
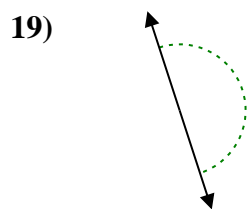
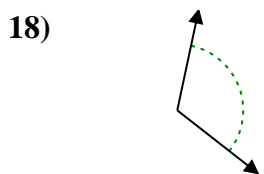
13. \_\_\_\_\_



14. \_\_\_\_\_

15. \_\_\_\_\_

16. \_\_\_\_\_



17. \_\_\_\_\_

18. \_\_\_\_\_

19. \_\_\_\_\_

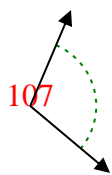
20. \_\_\_\_\_

1-10	95	90	85	80	75	70	65	60	55	50
11-20	45	40	35	30	25	20	15	10	5	0

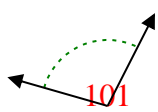


Determina si el ángulo mostrado es agudo, obtuso, recto o llano.

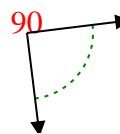
Ej)



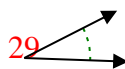
1)



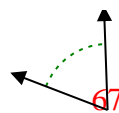
2)



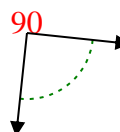
3)



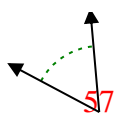
4)



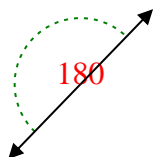
5)



6)



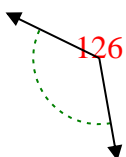
7)



8)



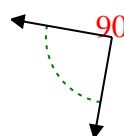
9)



10)



11)



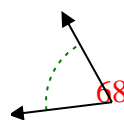
12)



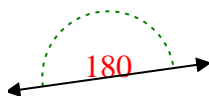
13)



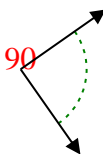
14)



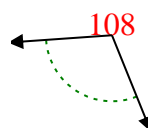
15)



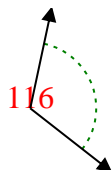
16)



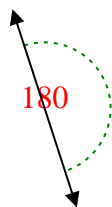
17)



18)



19)



20)



**Respuestas**

Ej. obtuso

1. obtuso

2. derecho

3. agudo

4. agudo

5. derecho

6. agudo

7. recto

8. agudo

9. obtuso

10. obtuso

11. derecho

12. agudo

13. agudo

14. agudo

15. recto

16. derecho

17. obtuso

18. obtuso

19. recto

20. obtuso