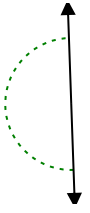




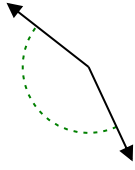
Determina si el ángulo mostrado es agudo, obtuso, recto o llano.

Respuestas

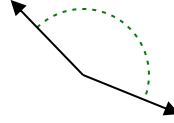
Ej)



1)

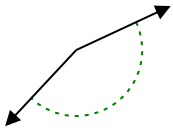


2)

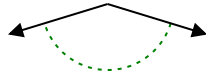


Ej. **recto**

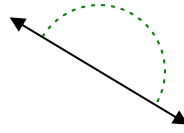
3)



4)



5)



1. _____

2. _____

6)



7)



8)



3. _____

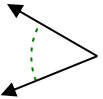
4. _____

5. _____

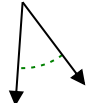
6. _____

7. _____

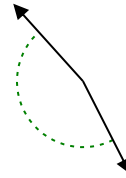
9)



10)



11)



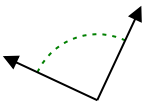
8. _____

9. _____

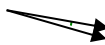
10. _____

11. _____

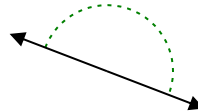
12)



13)



14)

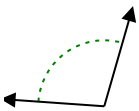


12. _____

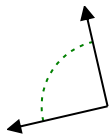
13. _____

14. _____

15)



16)



17)



15. _____

16. _____

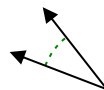
18)



19)



20)



17. _____

18. _____

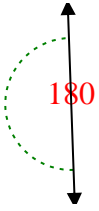
19. _____

20. _____

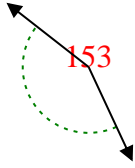


Determina si el ángulo mostrado es agudo, obtuso, recto o llano.

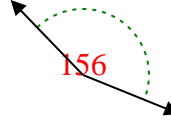
Ej)



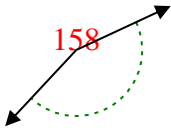
1)



2)



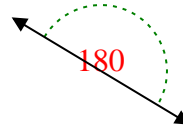
3)



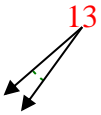
4)



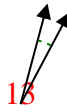
5)



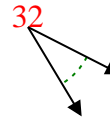
6)



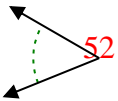
7)



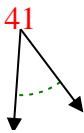
8)



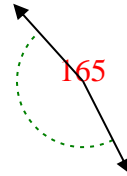
9)



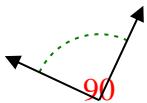
10)



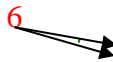
11)



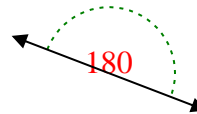
12)



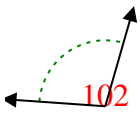
13)



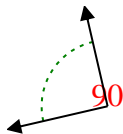
14)



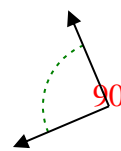
15)



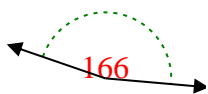
16)



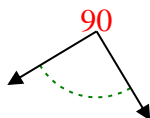
17)



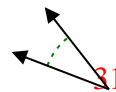
18)



19)



20)



Respuestas

Ej. recto

1. obtuso

2. obtuso

3. obtuso

4. obtuso

5. recto

6. agudo

7. agudo

8. agudo

9. agudo

10. agudo

11. obtuso

12. derecho

13. agudo

14. recto

15. obtuso

16. derecho

17. derecho

18. obtuso

19. derecho

20. agudo