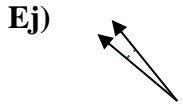


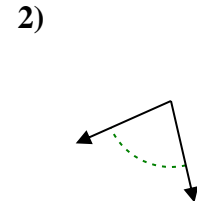
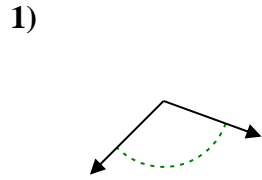


Determina si el ángulo mostrado es agudo, obtuso, recto o llano.

**Respuestas**

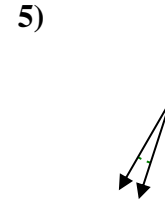
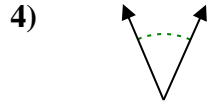
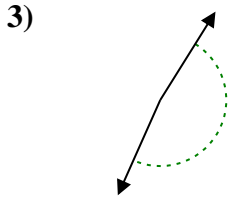


Ej. agudo



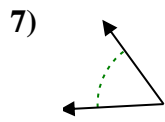
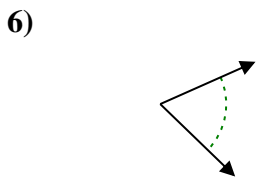
1. \_\_\_\_\_

2. \_\_\_\_\_



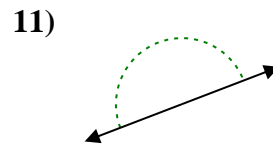
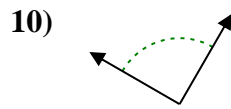
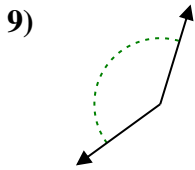
3. \_\_\_\_\_

4. \_\_\_\_\_



5. \_\_\_\_\_

6. \_\_\_\_\_

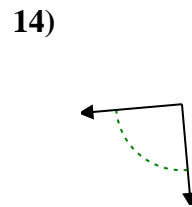
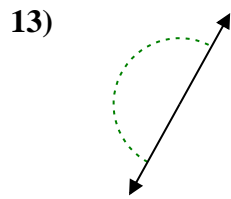
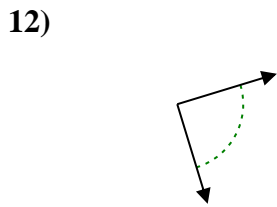


7. \_\_\_\_\_

8. \_\_\_\_\_

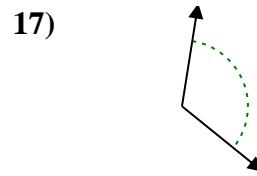
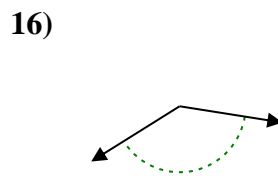
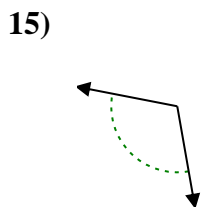
9. \_\_\_\_\_

10. \_\_\_\_\_



11. \_\_\_\_\_

12. \_\_\_\_\_

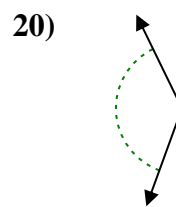
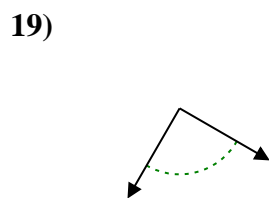
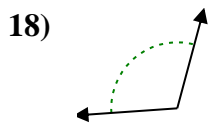


13. \_\_\_\_\_

14. \_\_\_\_\_

15. \_\_\_\_\_

16. \_\_\_\_\_



17. \_\_\_\_\_

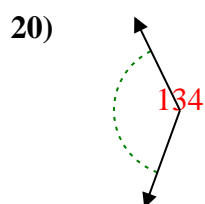
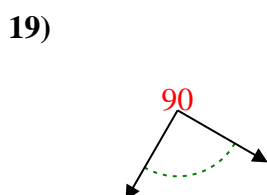
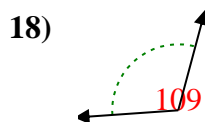
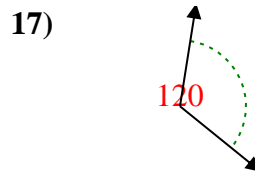
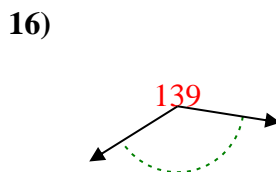
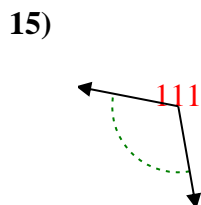
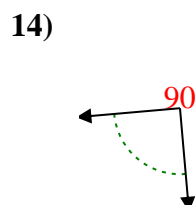
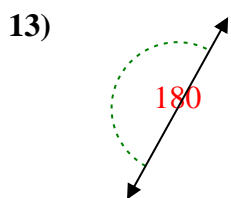
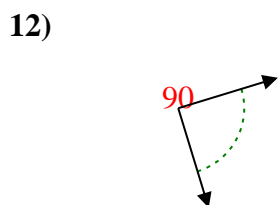
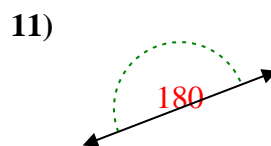
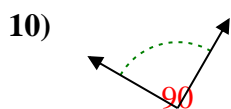
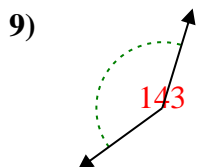
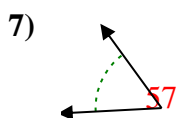
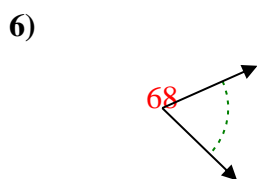
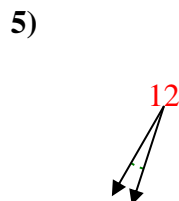
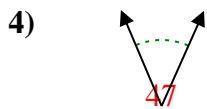
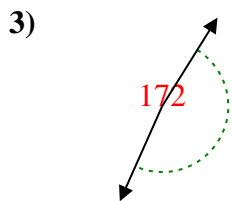
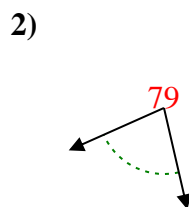
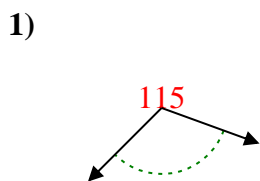
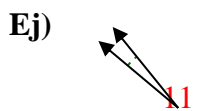
18. \_\_\_\_\_

19. \_\_\_\_\_

20. \_\_\_\_\_



Determina si el ángulo mostrado es agudo, obtuso, recto o llano.



**Respuestas**

Ej. agudo

1. obtuso

2. agudo

3. obtuso

4. agudo

5. agudo

6. agudo

7. agudo

8. agudo

9. obtuso

10. derecho

11. recto

12. derecho

13. recto

14. derecho

15. obtuso

16. obtuso

17. obtuso

18. obtuso

19. derecho

20. obtuso