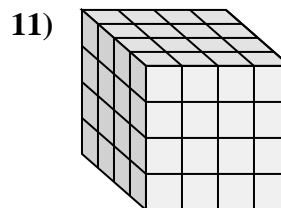
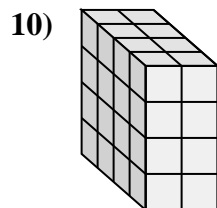
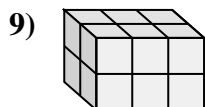
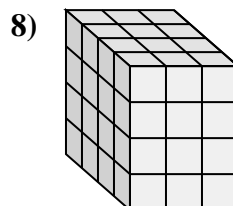
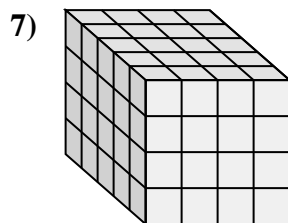
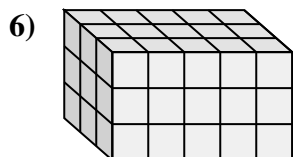
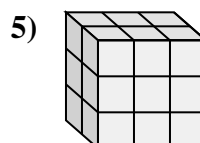
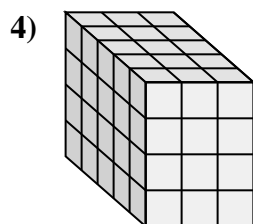
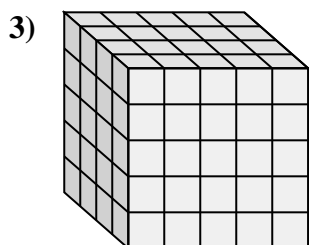
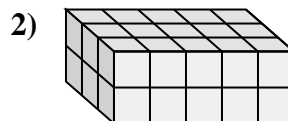
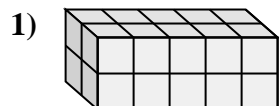
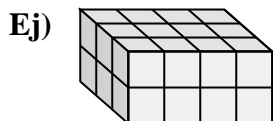




Empareje cada problema con la ecuación que podría representarlo. Responda con el término y la letra que faltan.



A. $4 \times 3 \times 4 = \underline{\quad}$

B. $\underline{\quad} \times 5 \times 5 = 100$

C. $\underline{\quad} \times 3 \times 2 = 12$

D. $\underline{\quad} \times 4 \times 4 = 80$

E. $5 \times \underline{\quad} \times 4 = 60$

F. $\underline{\quad} \times 5 \times 2 = 20$

G. $4 \times 4 \times \underline{\quad} = 64$

H. $3 \times \underline{\quad} \times 2 = 30$

I. $\underline{\quad} \times 2 \times 4 = 32$

J. $3 \times 4 \times 2 = \underline{\quad}$

K. $3 \times 5 \times \underline{\quad} = 45$

L. $2 \times 3 \times \underline{\quad} = 18$

Respuestas

Ej. **J, 24**

1. _____

2. _____

3. _____

4. _____

5. _____

6. _____

7. _____

8. _____

9. _____

10. _____

11. _____

