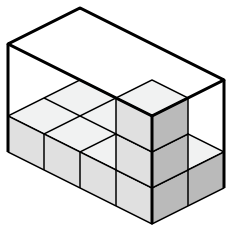


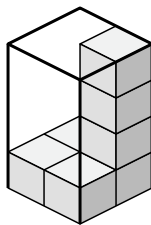


Cree una expresión para determinar el volumen de cada caja.

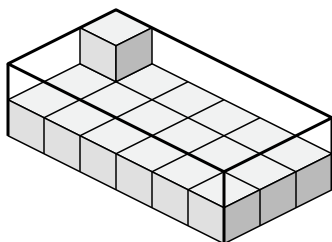
1)



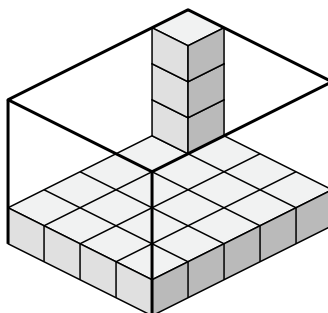
2)



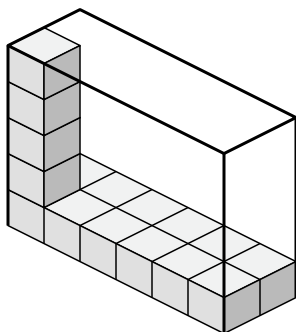
3)



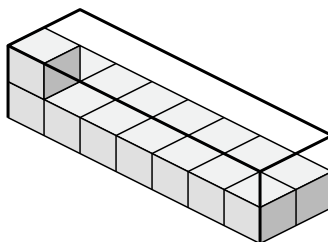
4)



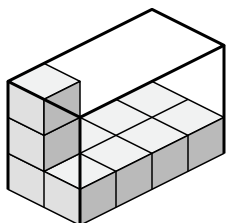
5)



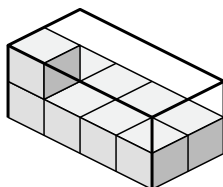
6)



7)



8)



Respuestas

1. _____

2. _____

3. _____

4. _____

5. _____

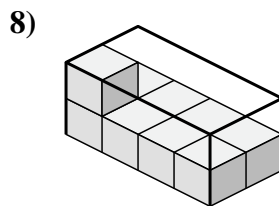
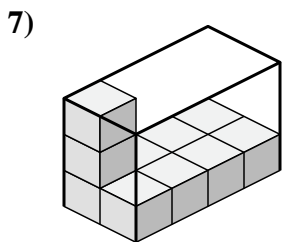
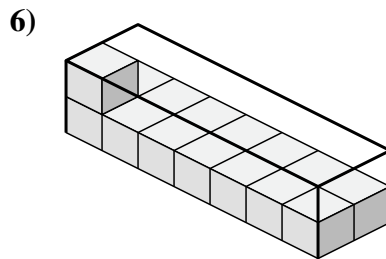
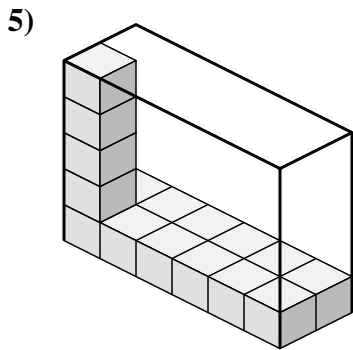
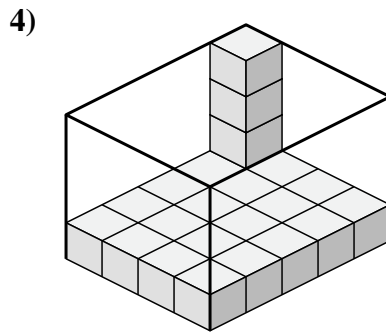
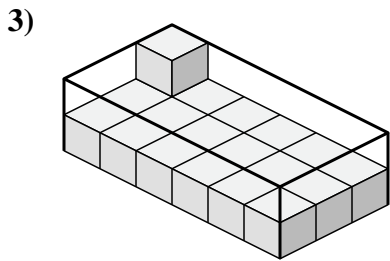
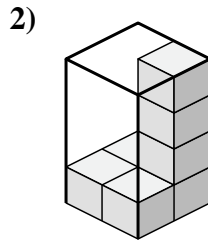
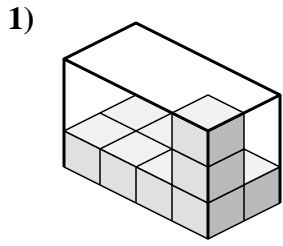
6. _____

7. _____

8. _____



Cree una expresión para determinar el volumen de cada caja.



Respuestas

1. 4×2×3

2. 2×2×4

3. 6×3×2

4. 4×5×4

5. 6×2×5

6. 7×2×2

7. 2×4×3

8. 4×2×2