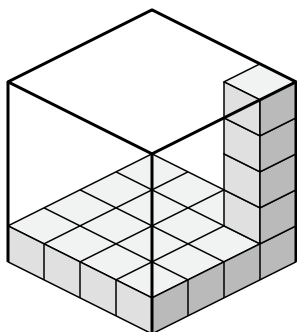


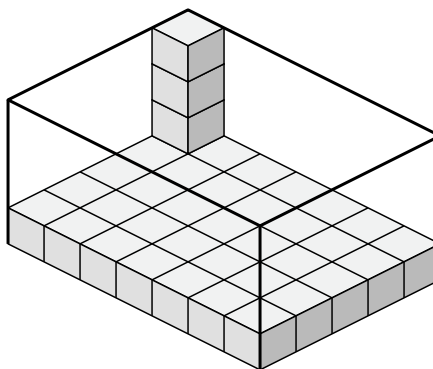


Determina el volumen de cada caja. Cada bloque es de una unidad cúbica ( $u^3$ ).

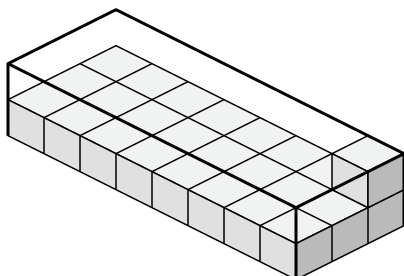
1)



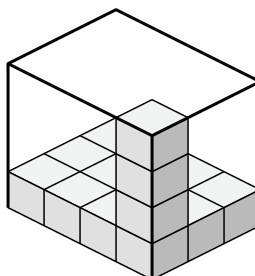
2)



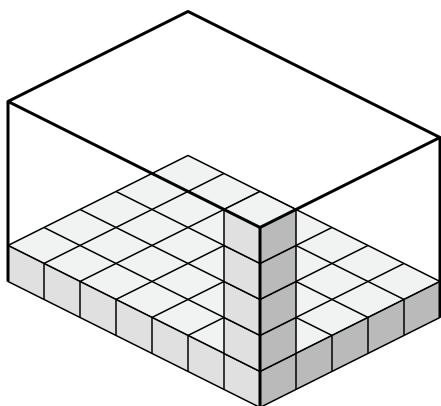
3)



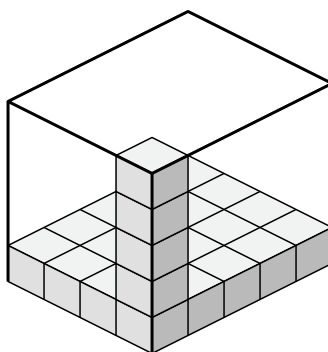
4)



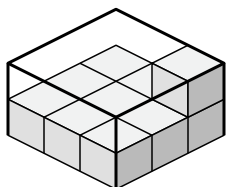
5)



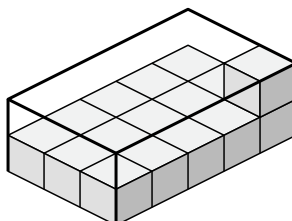
6)



7)



8)



**Respuestas**

1. \_\_\_\_\_

2. \_\_\_\_\_

3. \_\_\_\_\_

4. \_\_\_\_\_

5. \_\_\_\_\_

6. \_\_\_\_\_

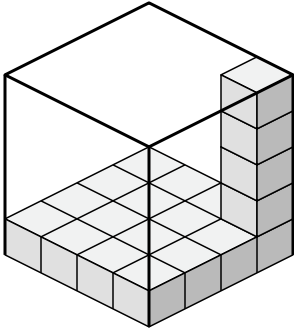
7. \_\_\_\_\_

8. \_\_\_\_\_

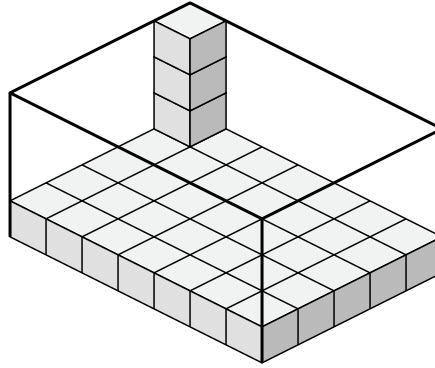


Determina el volumen de cada caja. Cada bloque es de una unidad cúbica ( $u^3$ ).

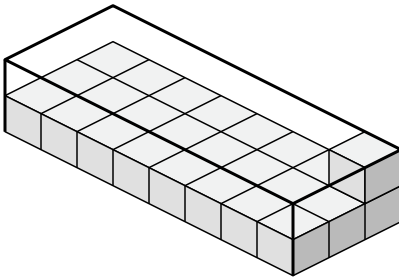
1)



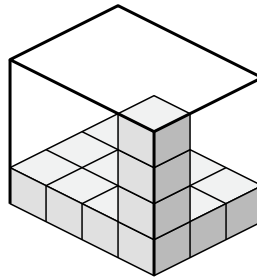
2)



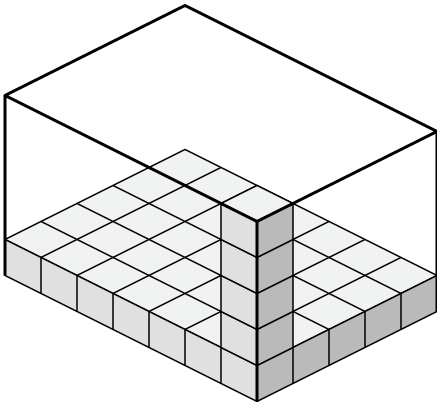
3)



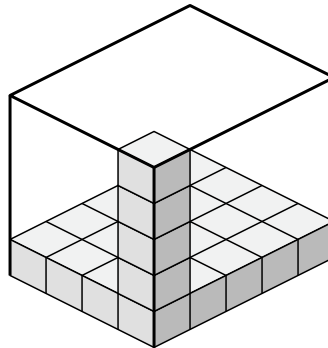
4)



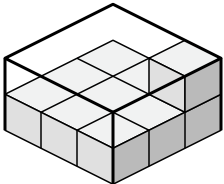
5)



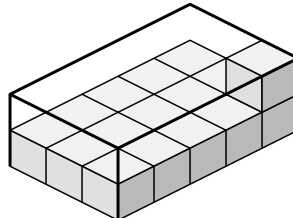
6)



7)



8)



**Respuestas**

1. **80  $u^3$**

2. **140  $u^3$**

3. **48  $u^3$**

4. **48  $u^3$**

5. **175  $u^3$**

6. **100  $u^3$**

7. **18  $u^3$**

8. **30  $u^3$**