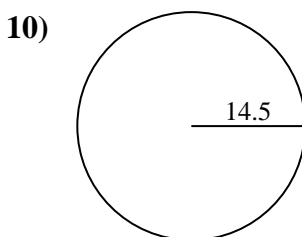
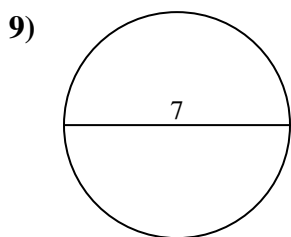
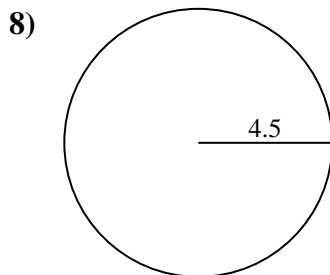
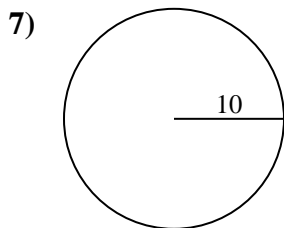
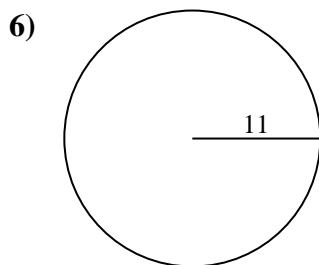
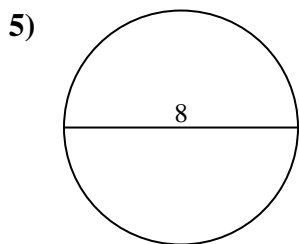
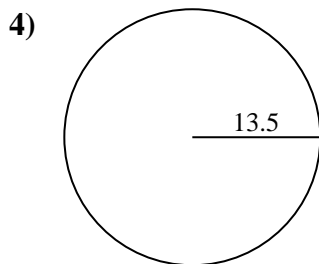
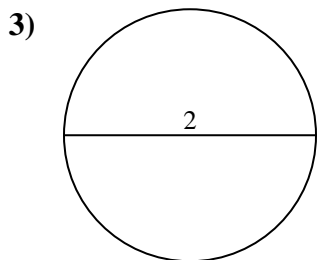
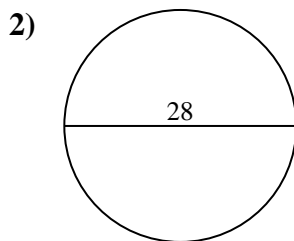
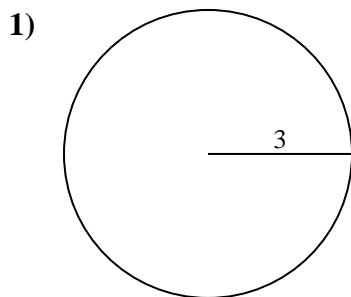




Encuentra el área y circunferencia de cada círculo. Los círculos no están a escala.

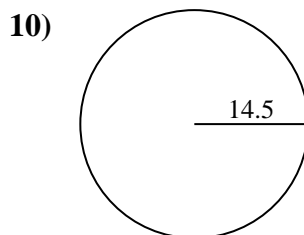
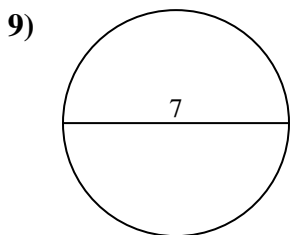
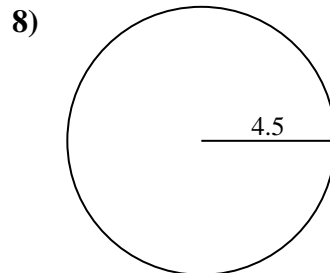
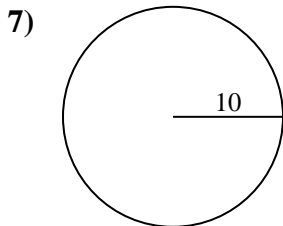
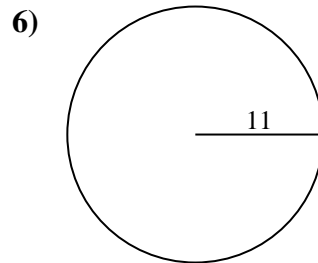
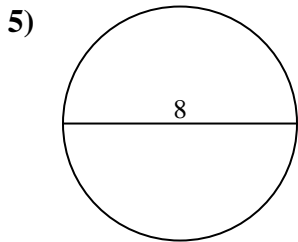
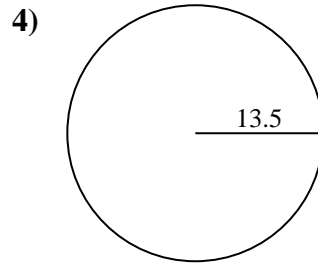
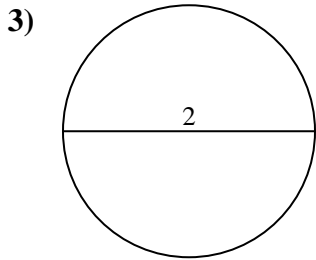
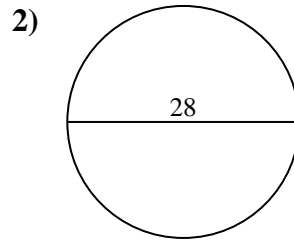
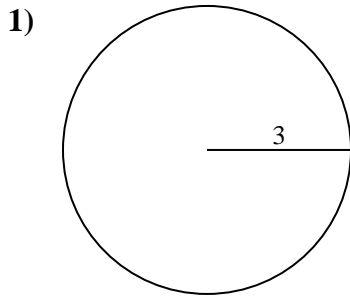


Respuestas

- 1. _____
- 2. _____
- 3. _____
- 4. _____
- 5. _____
- 6. _____
- 7. _____
- 8. _____
- 9. _____
- 10. _____



Encuentra el área y circunferencia de cada círculo. Los círculos no están a escala.



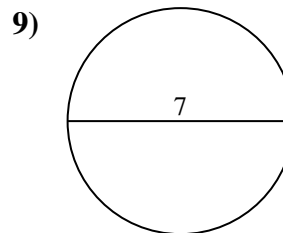
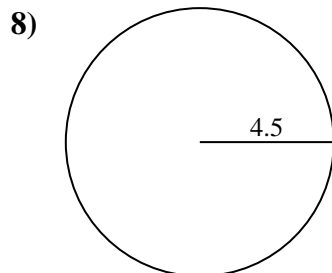
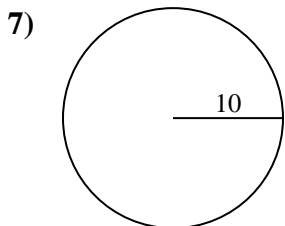
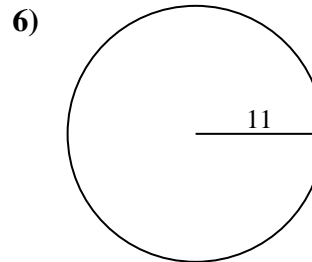
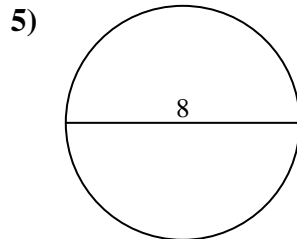
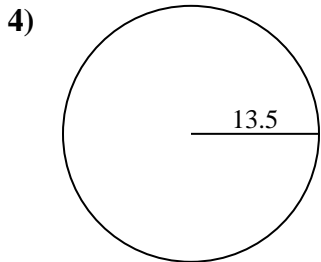
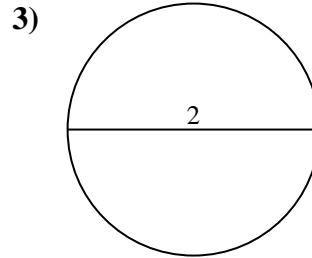
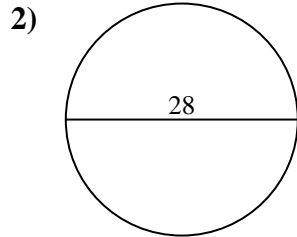
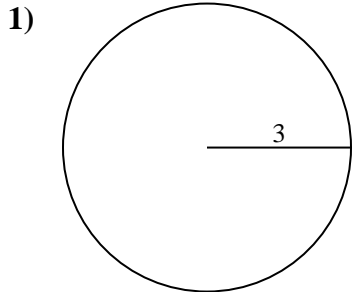
Respuestas

1.	<u>28.3</u>	<u>18.8</u>
2.	<u>615.8</u>	<u>88</u>
3.	<u>3.1</u>	<u>6.3</u>
4.	<u>572.6</u>	<u>84.8</u>
5.	<u>50.3</u>	<u>25.1</u>
6.	<u>380.1</u>	<u>69.1</u>
7.	<u>314.2</u>	<u>62.8</u>
8.	<u>63.6</u>	<u>28.3</u>
9.	<u>38.5</u>	<u>22</u>
10.	<u>660.5</u>	<u>91.1</u>



Encuentra el área y circunferencia de cada círculo. Los círculos no están a escala.

314.2	63.6	84.8	615.8	69.1
28.3	6.3	380.1	28.3	88
572.6	50.3	3.1	38.5	22
62.8	25.1	18.8		



Respuestas

1. _____
2. _____
3. _____
4. _____
5. _____
6. _____
7. _____
8. _____
9. _____