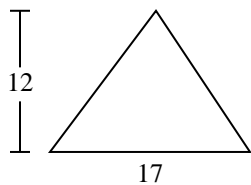




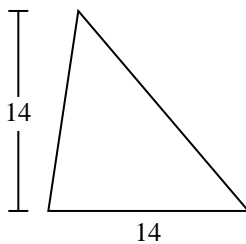
Encuentra el área de cada triángulo. Redondea tu respuesta a la décima más cercana.

Respuestas

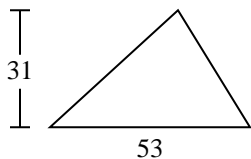
1)



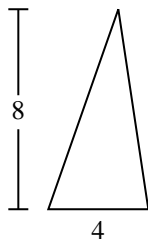
2)



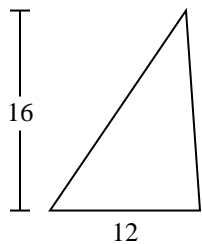
3)



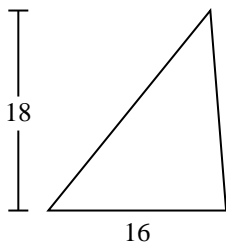
4)



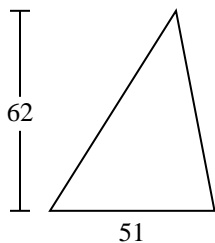
5)



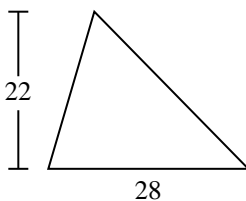
6)



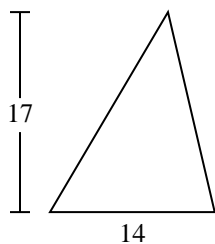
7)



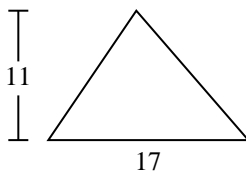
8)



9)



10)

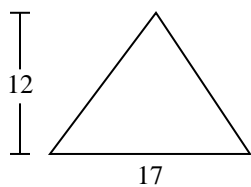


- 1. _____
- 2. _____
- 3. _____
- 4. _____
- 5. _____
- 6. _____
- 7. _____
- 8. _____
- 9. _____
- 10. _____

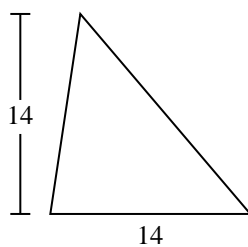


Encuentra el área de cada triángulo. Redondea tu respuesta a la décima más cercana.

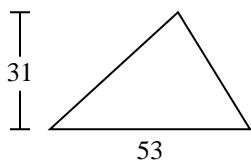
1)



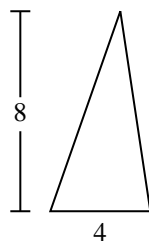
2)



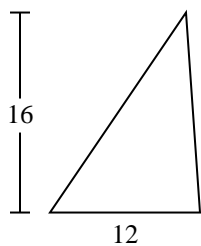
3)



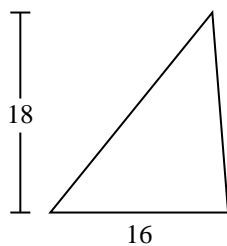
4)



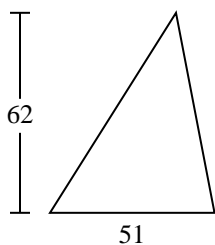
5)



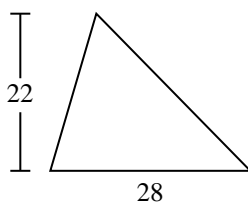
6)



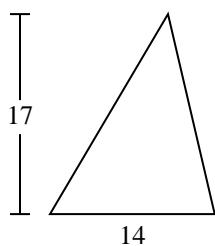
7)



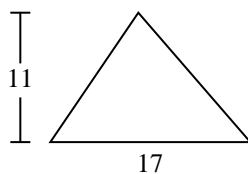
8)



9)



10)

**Respuestas**1. **102**2. **98**3. **821.5**4. **16**5. **96**6. **144**7. **1,581**8. **308**9. **119**10. **93.5**



Encuentra el área de cada triángulo. Redondea tu respuesta a la décima más cercana.

102

1,581

308

144

16

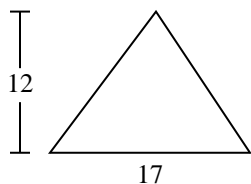
119

821.5

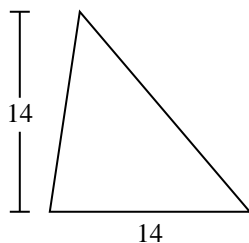
98

96

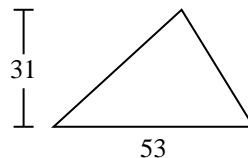
1)



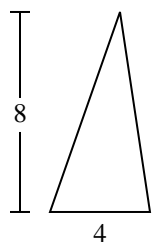
2)



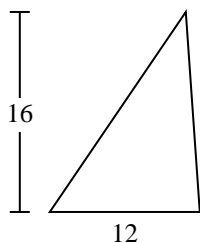
3)



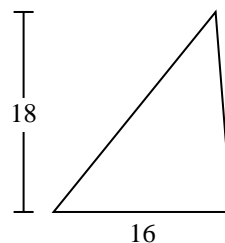
4)



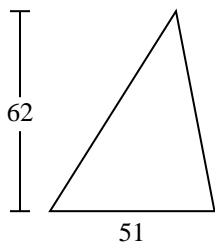
5)



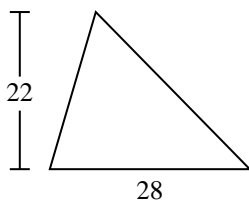
6)



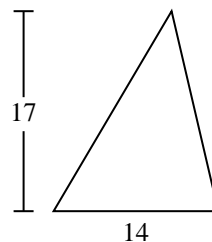
7)



8)



9)



Respuestas

1. _____

2. _____

3. _____

4. _____

5. _____

6. _____

7. _____

8. _____

9. _____