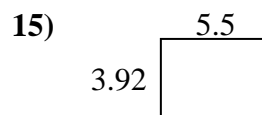
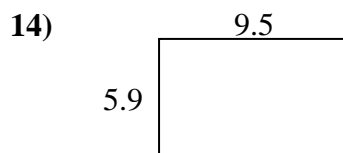
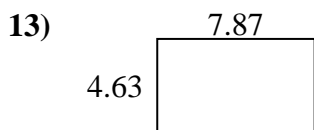
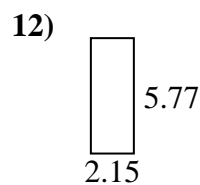
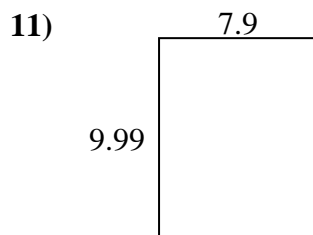
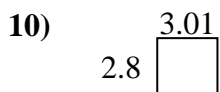
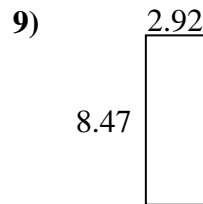
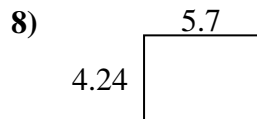
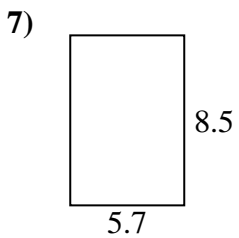
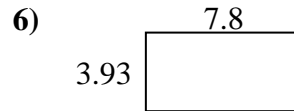
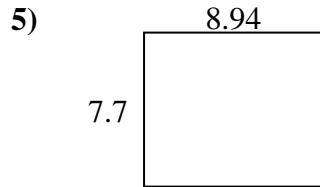
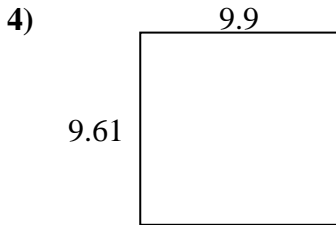
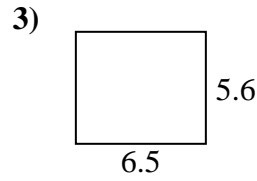
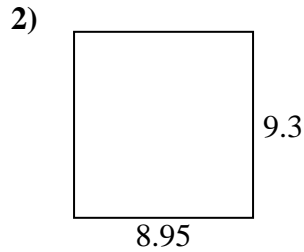
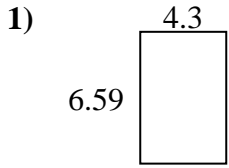




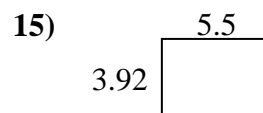
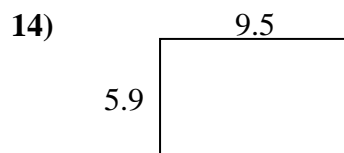
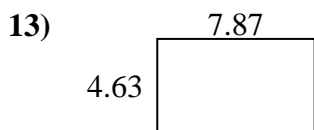
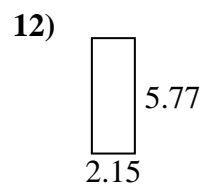
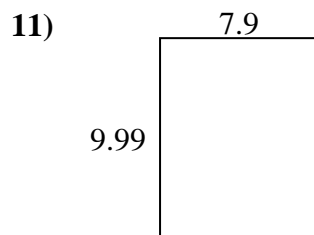
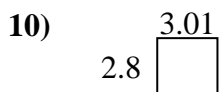
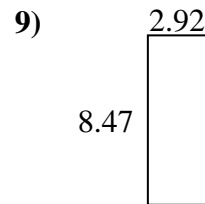
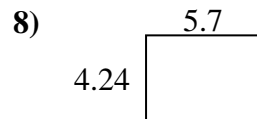
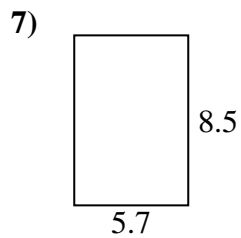
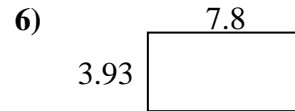
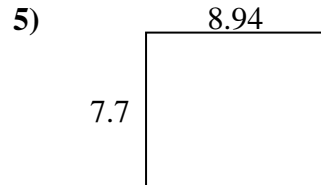
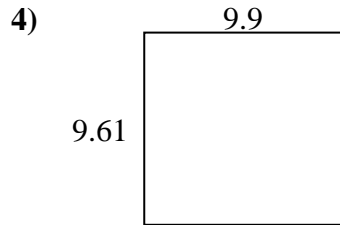
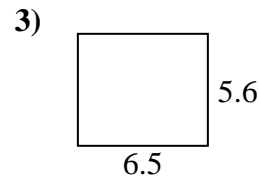
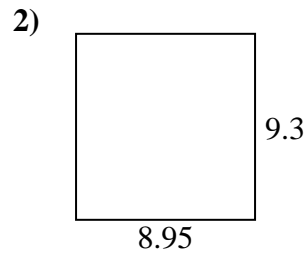
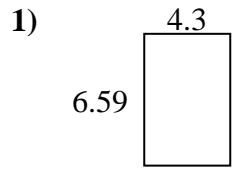
Encuentra el perímetro y el área de cada figura. Responde con la décima más cercana.

Respuestas

1. _____
2. _____
3. _____
4. _____
5. _____
6. _____
7. _____
8. _____
9. _____
10. _____
11. _____
12. _____
13. _____
14. _____
15. _____



Encuentra el perímetro y el área de cada figura. Responde con la décima más cercana.

**Respuestas**

1.	<u>28.3</u>	<u>21.8</u>
2.	<u>83.2</u>	<u>36.5</u>
3.	<u>36.4</u>	<u>24.2</u>
4.	<u>95.1</u>	<u>39.0</u>
5.	<u>68.8</u>	<u>33.3</u>
6.	<u>30.7</u>	<u>23.5</u>
7.	<u>48.5</u>	<u>28.4</u>
8.	<u>24.2</u>	<u>19.9</u>
9.	<u>24.7</u>	<u>22.8</u>
10.	<u>8.4</u>	<u>11.6</u>
11.	<u>78.9</u>	<u>35.8</u>
12.	<u>12.4</u>	<u>15.8</u>
13.	<u>36.4</u>	<u>25.0</u>
14.	<u>56.1</u>	<u>30.8</u>
15.	<u>21.6</u>	<u>18.8</u>