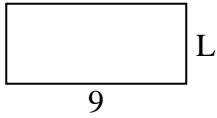


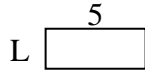


Determina el valor de 'P'.


1) Área = $36u^2$



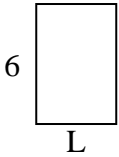
2) Área = $10u^2$



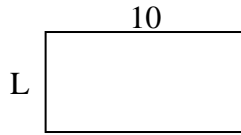
3) Área = $14u^2$



4) Área = $24u^2$



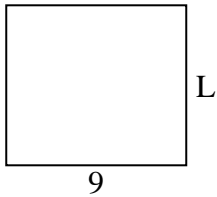
5) Área = $50u^2$



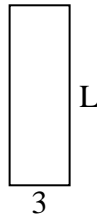
6) Área = $6u^2$



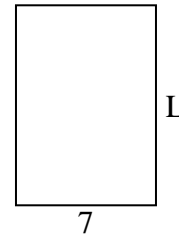
7) Área = $72u^2$



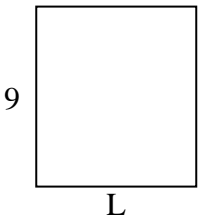
8) Área = $27u^2$



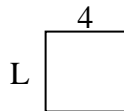
9) Área = $70u^2$



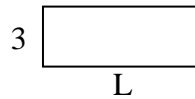
10) Área = $72u^2$




11) Área = $16u^2$



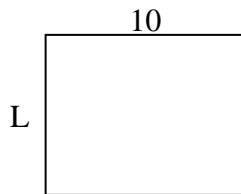
12) Área = $24u^2$




13) Área = $14u^2$



14) Área = $80u^2$



15) Área = $27u^2$



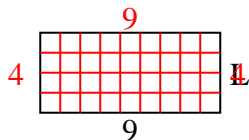
Respuestas

1. _____
2. _____
3. _____
4. _____
5. _____
6. _____
7. _____
8. _____
9. _____
10. _____
11. _____
12. _____
13. _____
14. _____
15. _____

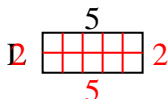


Determina el valor de 'P'.

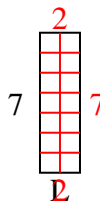
1) Área = $36u^2$



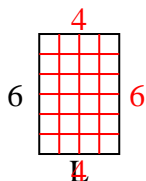
2) Área = $10u^2$



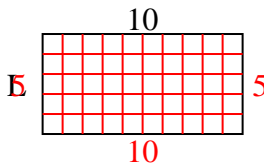
3) Área = $14u^2$



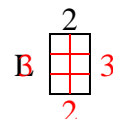
4) Área = $24u^2$



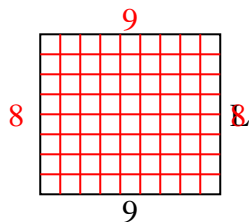
5) Área = $50u^2$



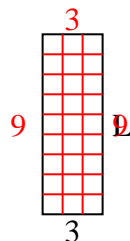
6) Área = $6u^2$



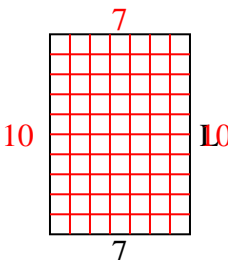
7) Área = $72u^2$



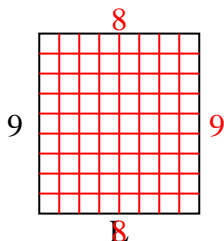
8) Área = $27u^2$



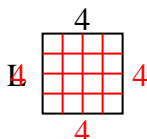
9) Área = $70u^2$



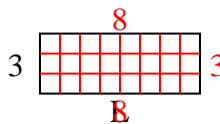
10) Área = $72u^2$



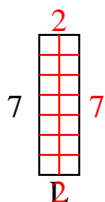
11) Área = $16u^2$



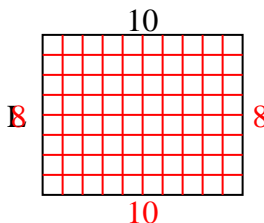
12) Área = $24u^2$



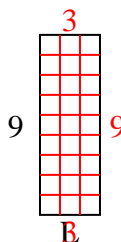
13) Área = $14u^2$



14) Área = $80u^2$



15) Área = $27u^2$



Respuestas

1. 4
2. 2
3. 2
4. 4
5. 5
6. 3
7. 8
8. 9
9. 10
10. 8
11. 4
12. 8
13. 2
14. 8
15. 3