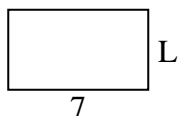


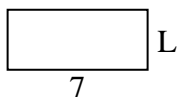


Determina el valor de 'L'. Las longitudes están en cm (no a escala).

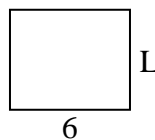
1) perímetro = 22



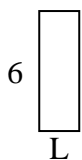
2) perímetro = 20



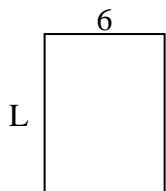
3) perímetro = 22



4) perímetro = 16



5) perímetro = 28



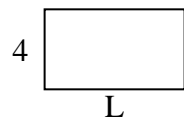
6) perímetro = 10



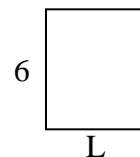
7) perímetro = 22



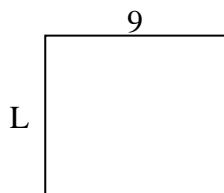
8) perímetro = 22



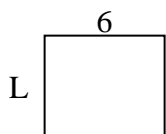
9) perímetro = 22



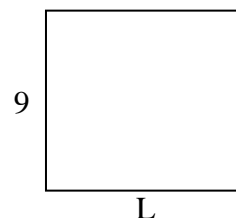
10) perímetro = 34



11) perímetro = 22



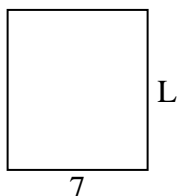
12) perímetro = 38



13) perímetro = 26



14) perímetro = 30



15) perímetro = 30

**Respuestas**

1. _____

2. _____

3. _____

4. _____

5. _____

6. _____

7. _____

8. _____

9. _____

10. _____

11. _____

12. _____

13. _____

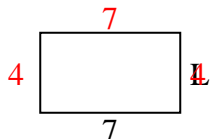
14. _____

15. _____

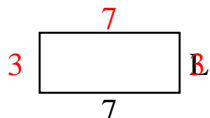


Determina el valor de 'L'. Las longitudes están en cm (no a escala).

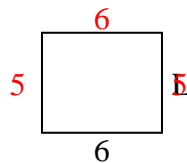
1) perímetro = 22



2) perímetro = 20



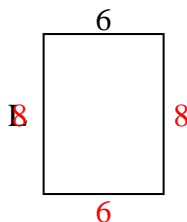
3) perímetro = 22



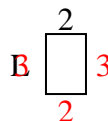
4) perímetro = 16



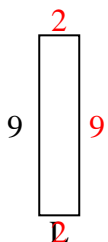
5) perímetro = 28



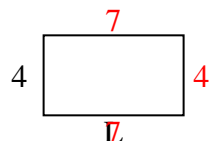
6) perímetro = 10



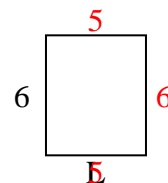
7) perímetro = 22



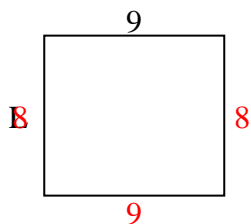
8) perímetro = 22



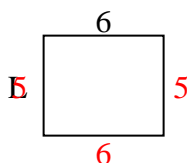
9) perímetro = 22



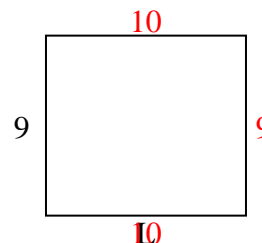
10) perímetro = 34



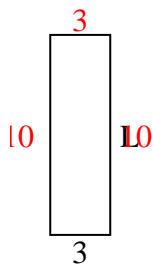
11) perímetro = 22



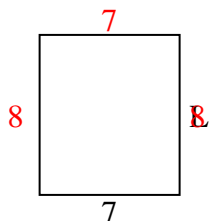
12) perímetro = 38



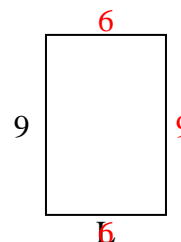
13) perímetro = 26



14) perímetro = 30



15) perímetro = 30

**Respuestas**1. **4 cm**2. **3 cm**3. **5 cm**4. **2 cm**5. **8 cm**6. **3 cm**7. **2 cm**8. **7 cm**9. **5 cm**10. **8 cm**11. **5 cm**12. **10 cm**13. **10 cm**14. **8 cm**15. **6 cm**