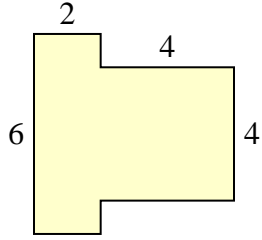




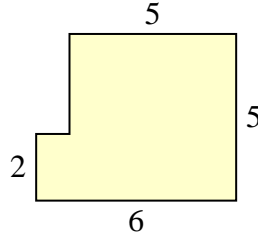
Encuentra el área total de cada figura. La medida está en milímetros (mm). No a escala.

**Respuestas**

1)



2)



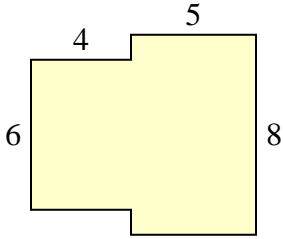
1. \_\_\_\_\_

2. \_\_\_\_\_

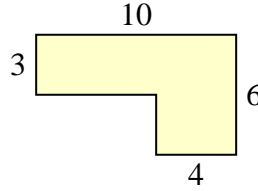
3. \_\_\_\_\_

4. \_\_\_\_\_

3)



4)



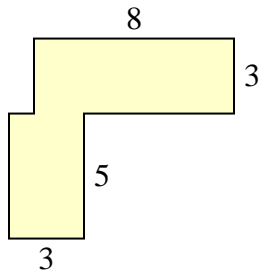
5. \_\_\_\_\_

6. \_\_\_\_\_

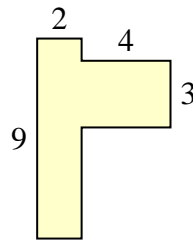
7. \_\_\_\_\_

8. \_\_\_\_\_

5)



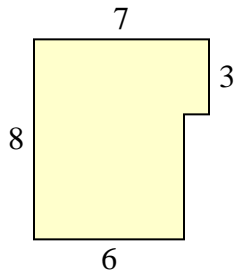
6)



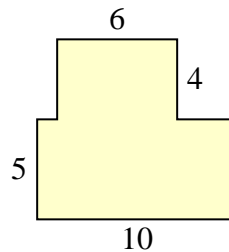
9. \_\_\_\_\_

10. \_\_\_\_\_

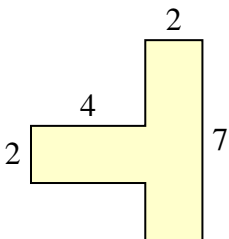
7)



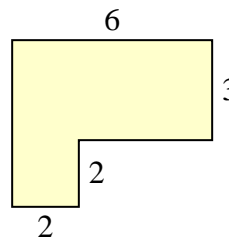
8)



9)

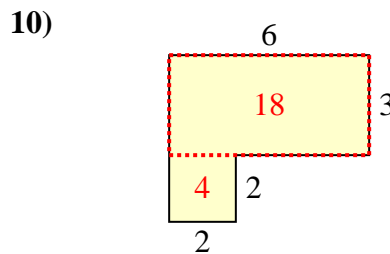
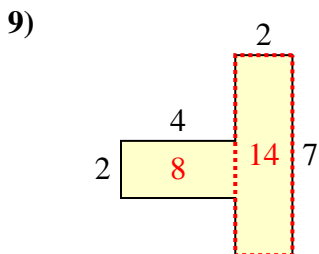
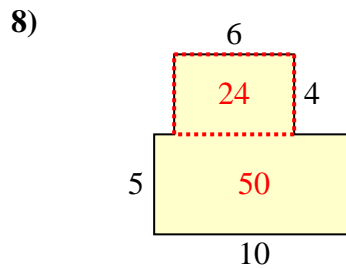
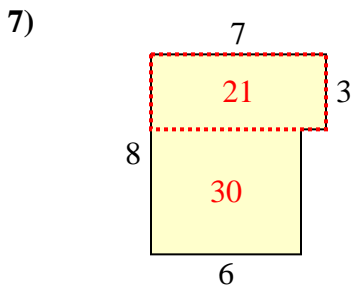
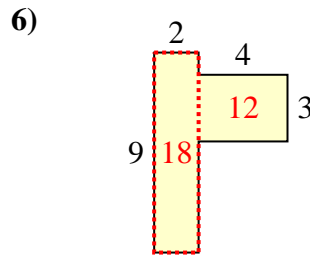
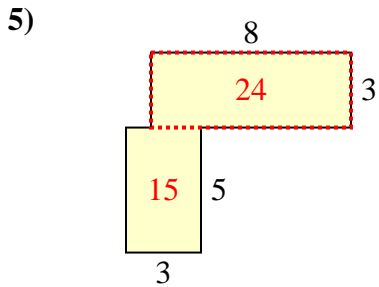
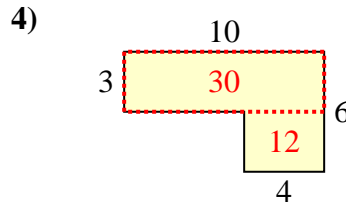
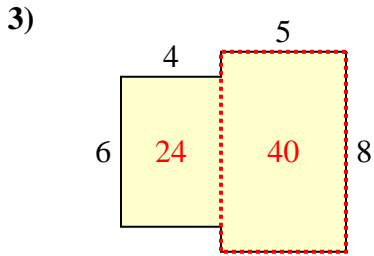
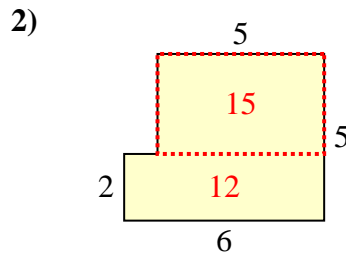
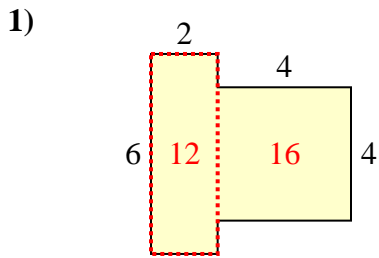


10)





Encuentra el área total de cada figura. La medida está en milímetros (mm). No a escala.



**Respuestas**

1. 28 mm<sup>2</sup>
2. 27 mm<sup>2</sup>
3. 64 mm<sup>2</sup>
4. 42 mm<sup>2</sup>
5. 39 mm<sup>2</sup>
6. 30 mm<sup>2</sup>
7. 51 mm<sup>2</sup>
8. 74 mm<sup>2</sup>
9. 22 mm<sup>2</sup>
10. 22 mm<sup>2</sup>