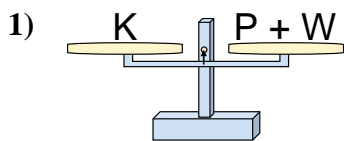


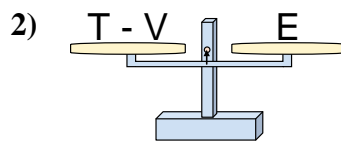


Las escalas mostradas están balanceadas. Determine que enunciado es correcto.

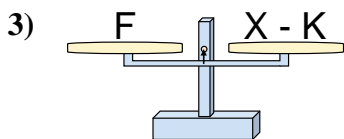
**Respuestas**



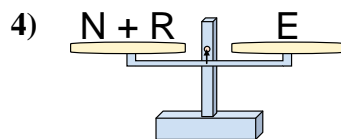
- A.  $P = W + K$
- B.  $P = K - W$
- C.  $P = K + W$
- D.  $P = W - K$



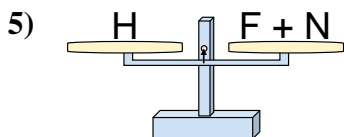
- A.  $T = E + E$
- B.  $T = V - E$
- C.  $T = E - V$
- D.  $T = V + E$



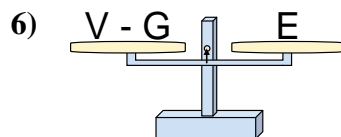
- A.  $X = K + F$
- B.  $X = F + F$
- C.  $X = F - K$
- D.  $X = K - F$



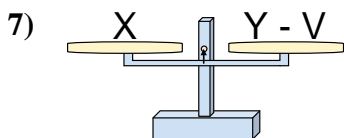
- A.  $N = E - R$
- B.  $N = R + E$
- C.  $N = E + R$
- D.  $N = R - E$



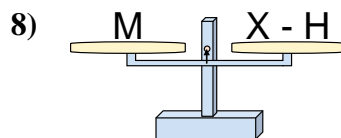
- A.  $F = N + H$
- B.  $F = N - H$
- C.  $F = H + N$
- D.  $F = H - N$



- A.  $V = G - E$
- B.  $V = E + E$
- C.  $V = G + E$
- D.  $V = E - G$



- A.  $Y = V - X$
- B.  $Y = X - V$
- C.  $Y = X + X$
- D.  $Y = V + X$



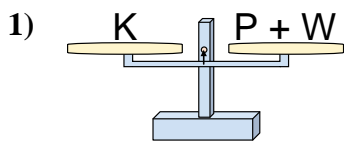
- A.  $X = M - H$
- B.  $X = M + M$
- C.  $X = H - M$
- D.  $X = H + M$

- 1. \_\_\_\_\_
- 2. \_\_\_\_\_
- 3. \_\_\_\_\_
- 4. \_\_\_\_\_
- 5. \_\_\_\_\_
- 6. \_\_\_\_\_
- 7. \_\_\_\_\_
- 8. \_\_\_\_\_

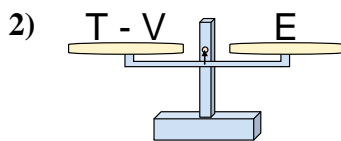


Las escalas mostradas están balanceadas. Determine que enunciado es correcto.

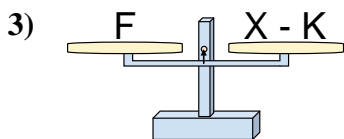
**Respuestas**



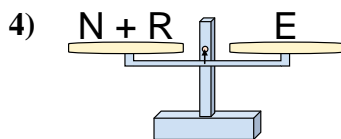
- A.  $P = W + K$
- B.  $P = K - W$
- C.  $P = K + W$
- D.  $P = W - K$



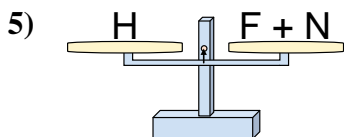
- A.  $T = E + E$
- B.  $T = V - E$
- C.  $T = E - V$
- D.  $T = V + E$



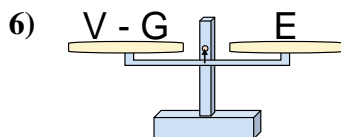
- A.  $X = K + F$
- B.  $X = F + F$
- C.  $X = F - K$
- D.  $X = K - F$



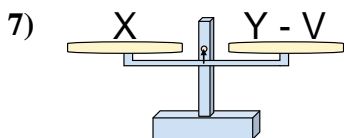
- A.  $N = E - R$
- B.  $N = R + E$
- C.  $N = E + R$
- D.  $N = R - E$



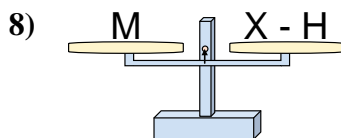
- A.  $F = N + H$
- B.  $F = N - H$
- C.  $F = H + N$
- D.  $F = H - N$



- A.  $V = G - E$
- B.  $V = E + E$
- C.  $V = G + E$
- D.  $V = E - G$



- A.  $Y = V - X$
- B.  $Y = X - V$
- C.  $Y = X + X$
- D.  $Y = V + X$



- A.  $X = M - H$
- B.  $X = M + M$
- C.  $X = H - M$
- D.  $X = H + M$

- 1.     **B**
- 2.     **D**
- 3.     **A**
- 4.     **A**
- 5.     **D**
- 6.     **C**
- 7.     **D**
- 8.     **D**