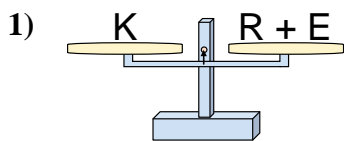


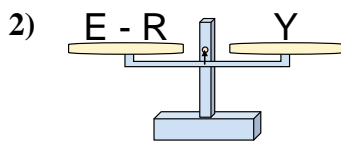


Las escalas mostradas están balanceadas. Determine que enunciado es correcto.

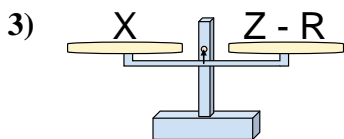
**Respuestas**



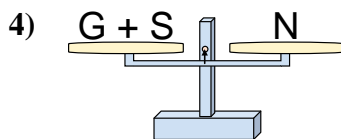
- A.  $R = E - K$
- B.  $R = E + K$
- C.  $R = K + E$
- D.  $R = K - E$



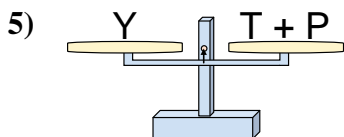
- A.  $E = Y + Y$
- B.  $E = R + Y$
- C.  $E = R - Y$
- D.  $E = Y - R$



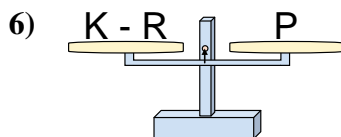
- A.  $Z = R - X$
- B.  $Z = X + X$
- C.  $Z = X - R$
- D.  $Z = R + X$



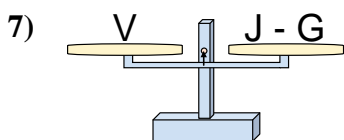
- A.  $G = S + N$
- B.  $G = N + S$
- C.  $G = S - N$
- D.  $G = N - S$



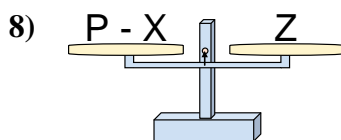
- A.  $T = P + Y$
- B.  $T = P - Y$
- C.  $T = Y - P$
- D.  $T = Y + P$



- A.  $K = P + P$
- B.  $K = R - P$
- C.  $K = R + P$
- D.  $K = P - R$



- A.  $J = G - V$
- B.  $J = G + V$
- C.  $J = V - G$
- D.  $J = V + V$



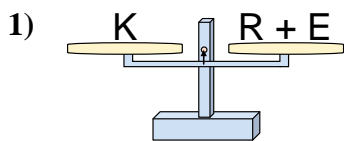
- A.  $P = X - Z$
- B.  $P = X + Z$
- C.  $P = Z + Z$
- D.  $P = Z - X$

- 1. \_\_\_\_\_
- 2. \_\_\_\_\_
- 3. \_\_\_\_\_
- 4. \_\_\_\_\_
- 5. \_\_\_\_\_
- 6. \_\_\_\_\_
- 7. \_\_\_\_\_
- 8. \_\_\_\_\_

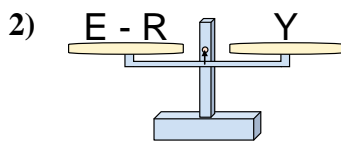


Las escalas mostradas están balanceadas. Determine que enunciado es correcto.

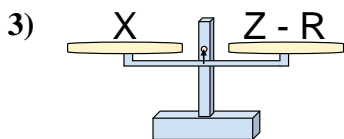
**Respuestas**



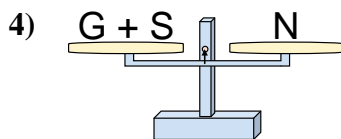
- A.  $R = E - K$
- B.  $R = E + K$
- C.  $R = K + E$
- D.  $R = K - E$



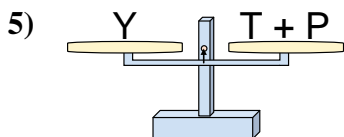
- A.  $E = Y + Y$
- B.  $E = R + Y$
- C.  $E = R - Y$
- D.  $E = Y - R$



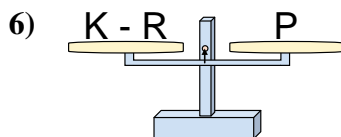
- A.  $Z = R - X$
- B.  $Z = X + X$
- C.  $Z = X - R$
- D.  $Z = R + X$



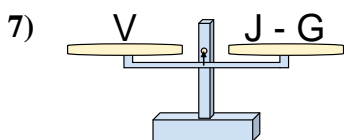
- A.  $G = S + N$
- B.  $G = N + S$
- C.  $G = S - N$
- D.  $G = N - S$



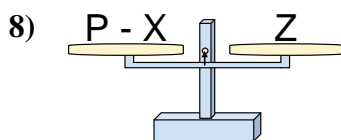
- A.  $T = P + Y$
- B.  $T = P - Y$
- C.  $T = Y - P$
- D.  $T = Y + P$



- A.  $K = P + P$
- B.  $K = R - P$
- C.  $K = R + P$
- D.  $K = P - R$



- A.  $J = G - V$
- B.  $J = G + V$
- C.  $J = V - G$
- D.  $J = V + V$



- A.  $P = X - Z$
- B.  $P = X + Z$
- C.  $P = Z + Z$
- D.  $P = Z - X$

- 1.     **D**
- 2.     **B**
- 3.     **D**
- 4.     **D**
- 5.     **C**
- 6.     **C**
- 7.     **B**
- 8.     **B**