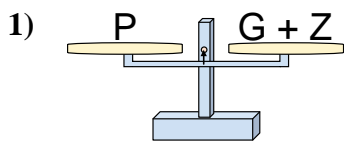


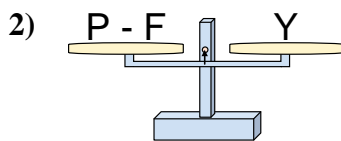


Las escalas mostradas están balanceadas. Determine que enunciado es correcto.

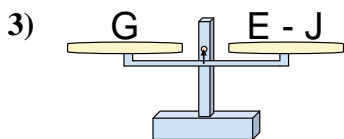
**Respuestas**



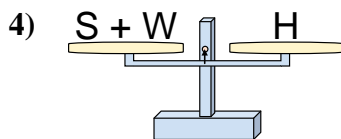
- A.  $G = P - Z$
- B.  $G = Z - P$
- C.  $G = Z + P$
- D.  $G = P + Z$



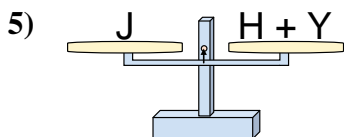
- A.  $P = F + Y$
- B.  $P = Y - F$
- C.  $P = F - Y$
- D.  $P = Y + Y$



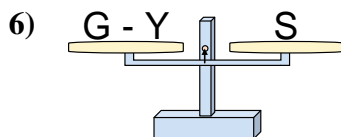
- A.  $E = G + G$
- B.  $E = J - G$
- C.  $E = J + G$
- D.  $E = G - J$



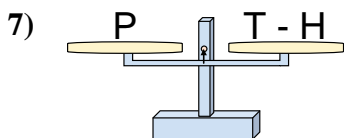
- A.  $S = H - W$
- B.  $S = W + H$
- C.  $S = W - H$
- D.  $S = H + W$



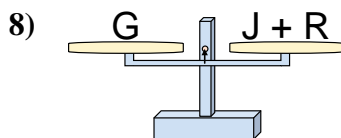
- A.  $H = Y - J$
- B.  $H = Y + J$
- C.  $H = J + Y$
- D.  $H = J - Y$



- A.  $G = S - Y$
- B.  $G = S + S$
- C.  $G = Y - S$
- D.  $G = Y + S$



- A.  $T = H + P$
- B.  $T = P + P$
- C.  $T = H - P$
- D.  $T = P - H$



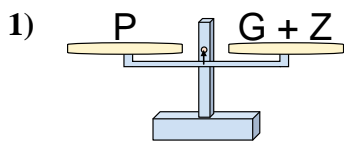
- A.  $J = G - R$
- B.  $J = R - G$
- C.  $J = G + R$
- D.  $J = R + G$

- 1. \_\_\_\_\_
- 2. \_\_\_\_\_
- 3. \_\_\_\_\_
- 4. \_\_\_\_\_
- 5. \_\_\_\_\_
- 6. \_\_\_\_\_
- 7. \_\_\_\_\_
- 8. \_\_\_\_\_

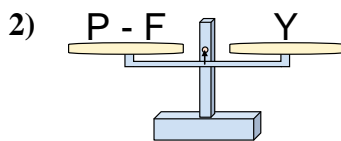


Las escalas mostradas están balanceadas. Determine que enunciado es correcto.

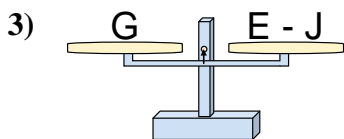
**Respuestas**



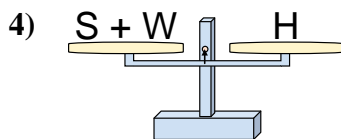
- A.  $G = P - Z$
- B.  $G = Z - P$
- C.  $G = Z + P$
- D.  $G = P + Z$



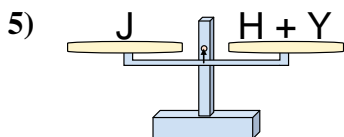
- A.  $P = F + Y$
- B.  $P = Y - F$
- C.  $P = F - Y$
- D.  $P = Y + Y$



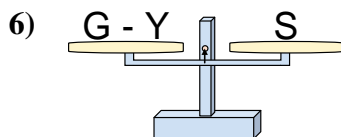
- A.  $E = G + G$
- B.  $E = J - G$
- C.  $E = J + G$
- D.  $E = G - J$



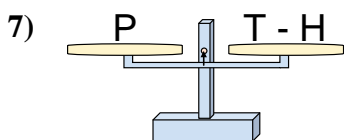
- A.  $S = H - W$
- B.  $S = W + H$
- C.  $S = W - H$
- D.  $S = H + W$



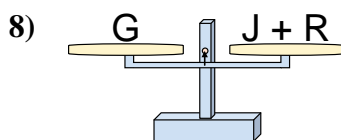
- A.  $H = Y - J$
- B.  $H = Y + J$
- C.  $H = J + Y$
- D.  $H = J - Y$



- A.  $G = S - Y$
- B.  $G = S + S$
- C.  $G = Y - S$
- D.  $G = Y + S$



- A.  $T = H + P$
- B.  $T = P + P$
- C.  $T = H - P$
- D.  $T = P - H$



- A.  $J = G - R$
- B.  $J = R - G$
- C.  $J = G + R$
- D.  $J = R + G$

- 1.   **A**
- 2.   **A**
- 3.   **C**
- 4.   **A**
- 5.   **D**
- 6.   **D**
- 7.   **A**
- 8.   **A**