



Determina cual gráfica pertenece a la tabla.

Respuestas

1)

Gente	
	6,000
	9,000
	8,000
	4,000
	7,000

2)

Gente	
	9,000
	8,000
	4,000
	7,000
	6,000

3)

Gente	
	4,000
	9,000
	8,000
	6,000
	7,000

4)

Gente	
	8,000
	7,000
	4,000
	6,000
	9,000

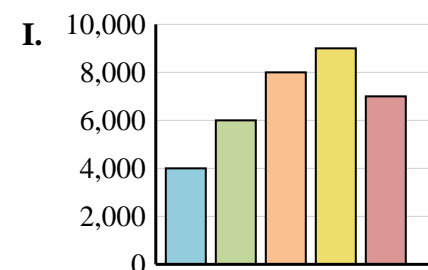
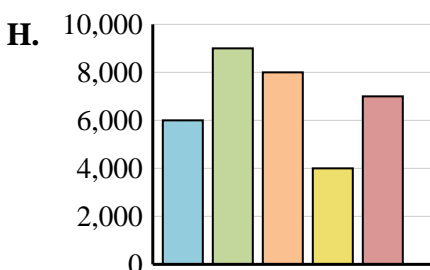
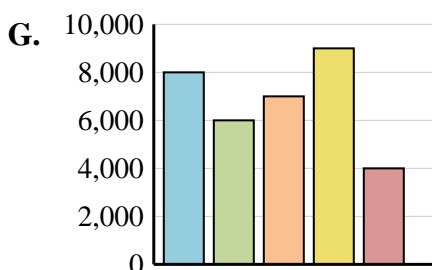
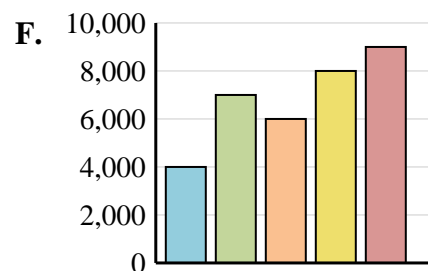
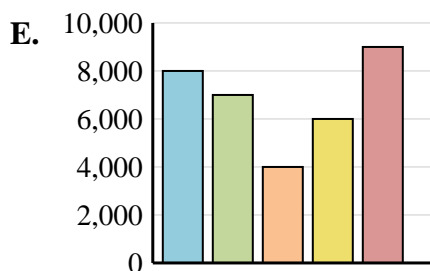
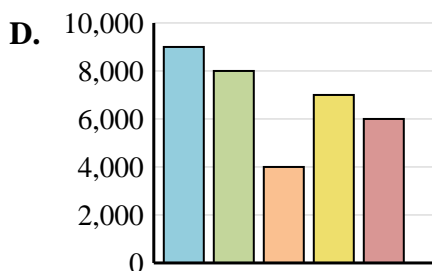
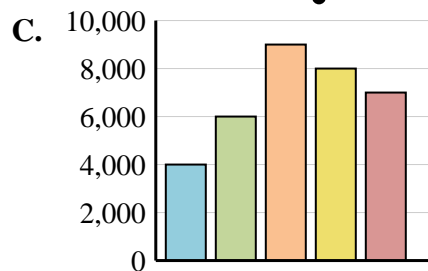
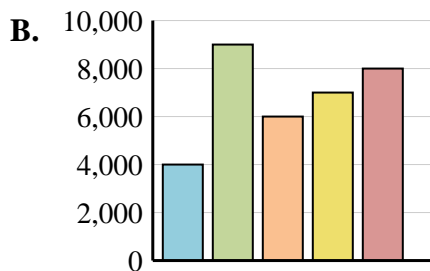
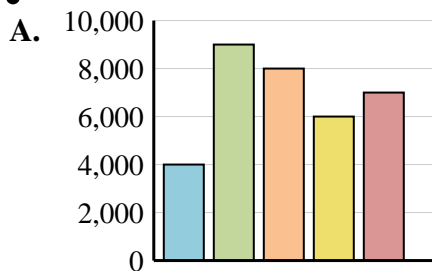
5)

Gente	
	8,000
	6,000
	7,000
	9,000
	4,000

6)

Gente	
	4,000
	9,000
	6,000
	7,000
	8,000

1. _____
2. _____
3. _____
4. _____
5. _____
6. _____





Determina cual gráfica pertenece a la tabla.

Respuestas

1)

	Gente
	6,000
	9,000
	8,000
	4,000
	7,000

2)

	Gente
	9,000
	8,000
	4,000
	7,000
	6,000

3)

	Gente
	4,000
	9,000
	8,000
	6,000
	7,000

4)

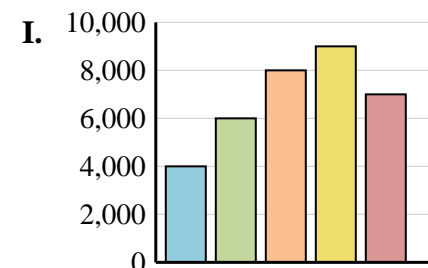
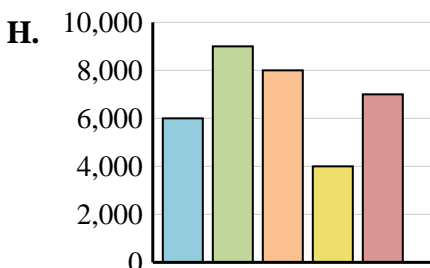
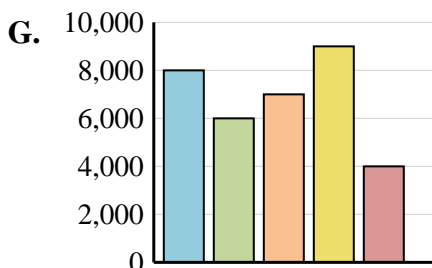
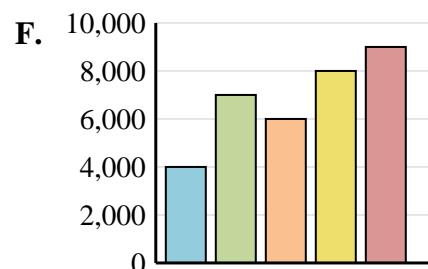
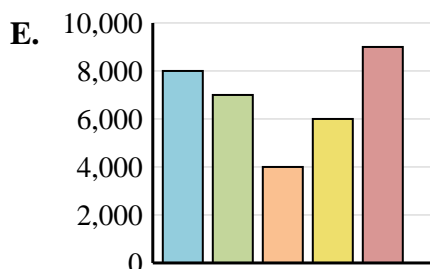
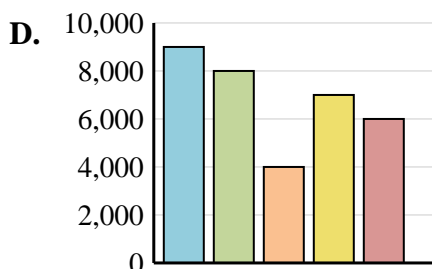
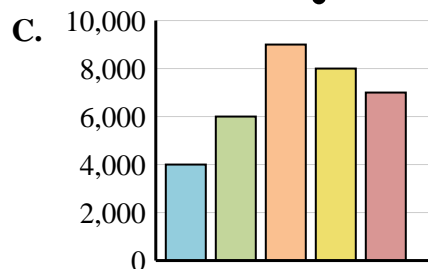
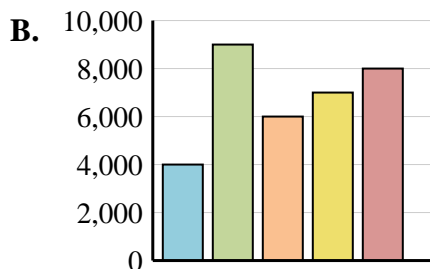
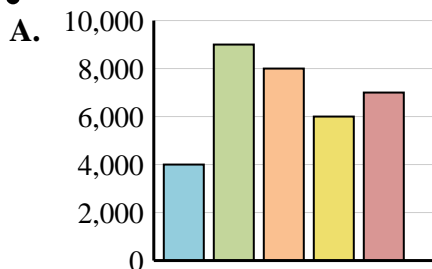
	Gente
	8,000
	7,000
	4,000
	6,000
	9,000

5)

	Gente
	8,000
	6,000
	7,000
	9,000
	4,000

6)

	Gente
	4,000
	9,000
	6,000
	7,000
	8,000



1. **H**
2. **D**
3. **A**
4. **E**
5. **G**
6. **B**