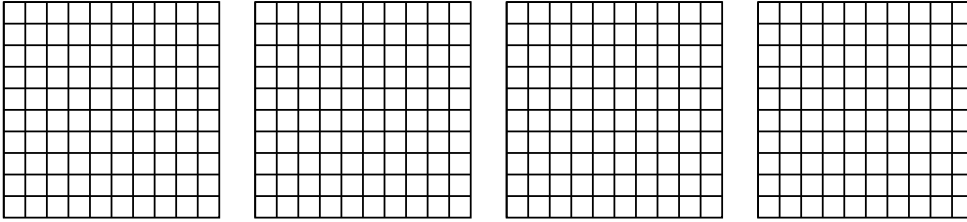


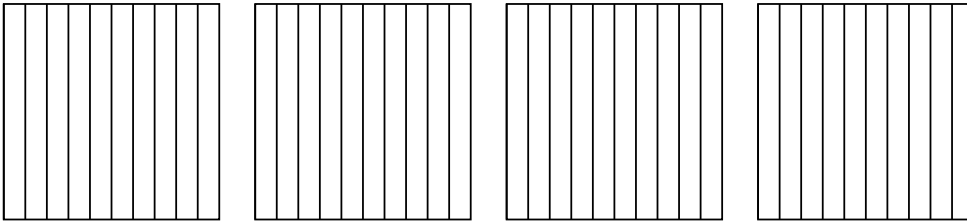


Usa el modelo visual para resolver cada problema.


1) $4 \times 0.54 =$



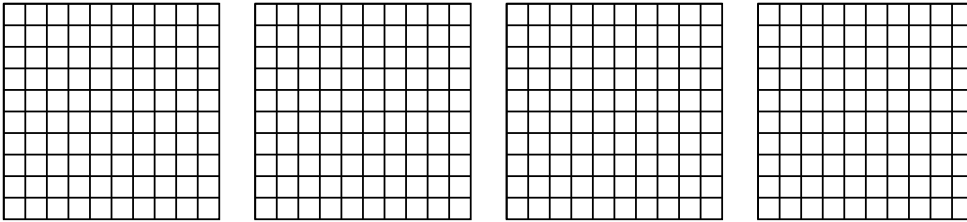
2) $4 \times 0.7 =$



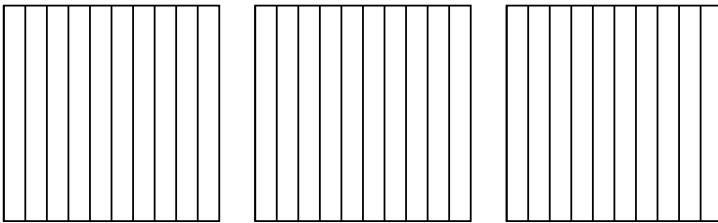
3) $3 \times 0.65 =$



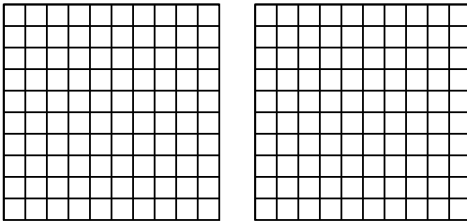
4) $4 \times 0.21 =$



5) $3 \times 0.2 =$



6) $2 \times 0.23 =$



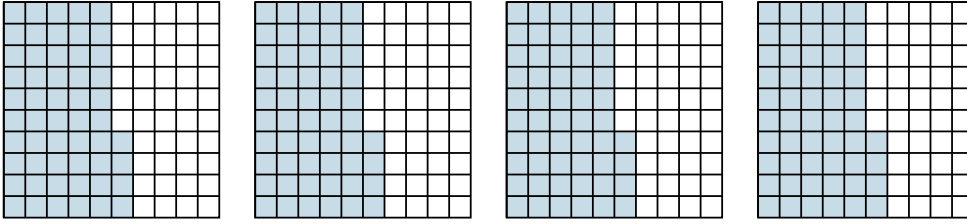
Respuestas

- 1. _____
- 2. _____
- 3. _____
- 4. _____
- 5. _____
- 6. _____

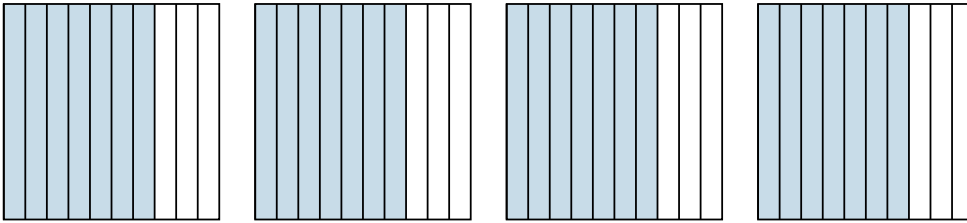


Usa el modelo visual para resolver cada problema.

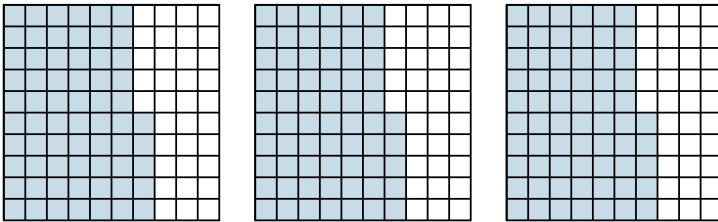
1) $4 \times 0.54 =$



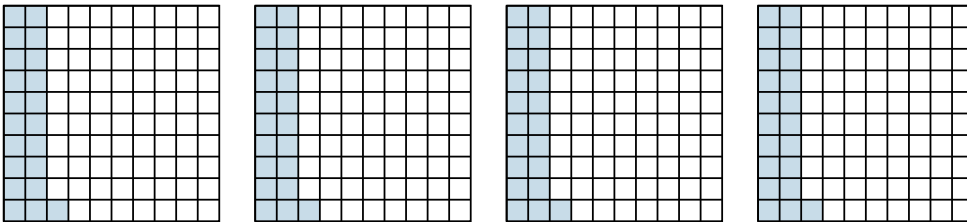
2) $4 \times 0.7 =$




3) $3 \times 0.65 =$



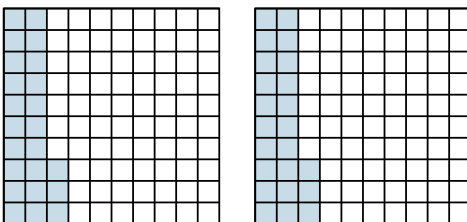
4) $4 \times 0.21 =$



5) $3 \times 0.2 =$



6) $2 \times 0.23 =$



Respuestas

1. $\frac{216}{100} = 2.16$

2. $\frac{28}{10} = 2.8$

3. $\frac{195}{100} = 1.95$

4. $\frac{84}{100} = 0.84$

5. $\frac{6}{10} = 0.6$

6. $\frac{46}{100} = 0.46$