



Determina cuál letra representa mejor la suma.

1)  $\frac{1}{3} + \frac{2}{3}$

3)  $\frac{8}{10} + \frac{2}{10}$

5)  $\frac{3}{5} + \frac{1}{5}$

7)  $\frac{7}{8} + \frac{2}{8}$

9)  $\frac{2}{4} + \frac{1}{4}$

11)  $\frac{2}{10} + \frac{3}{10}$

13)  $\frac{10}{12} + \frac{5}{12}$

2)  $\frac{8}{12} + \frac{8}{12}$

4)  $\frac{2}{5} + \frac{4}{5}$

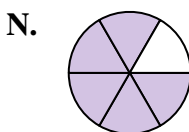
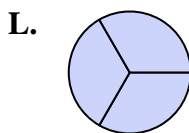
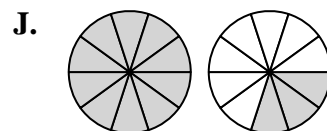
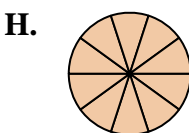
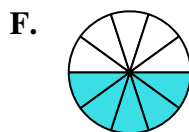
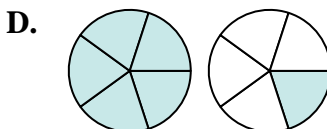
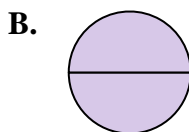
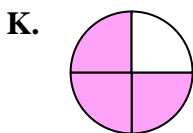
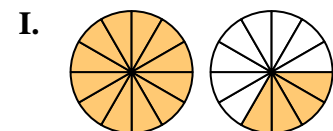
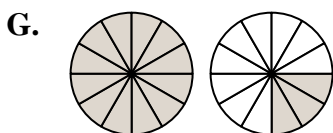
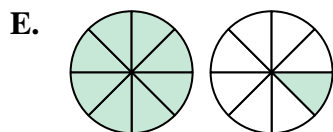
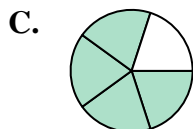
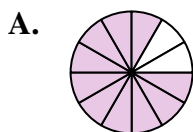
6)  $\frac{1}{2} + \frac{1}{2}$

8)  $\frac{1}{3} + \frac{1}{3}$

10)  $\frac{2}{12} + \frac{8}{12}$

12)  $\frac{5}{10} + \frac{8}{10}$

14)  $\frac{4}{6} + \frac{1}{6}$

**Respuestas**

1. \_\_\_\_\_

2. \_\_\_\_\_

3. \_\_\_\_\_

4. \_\_\_\_\_

5. \_\_\_\_\_

6. \_\_\_\_\_

7. \_\_\_\_\_

8. \_\_\_\_\_

9. \_\_\_\_\_

10. \_\_\_\_\_

11. \_\_\_\_\_

12. \_\_\_\_\_

13. \_\_\_\_\_

14. \_\_\_\_\_



Determina cuál letra representa mejor la suma.

1)  $\frac{1}{3} + \frac{2}{3}$

3)  $\frac{8}{10} + \frac{2}{10}$

5)  $\frac{3}{5} + \frac{1}{5}$

7)  $\frac{7}{8} + \frac{2}{8}$

9)  $\frac{2}{4} + \frac{1}{4}$

11)  $\frac{2}{10} + \frac{3}{10}$

13)  $\frac{10}{12} + \frac{5}{12}$

2)  $\frac{8}{12} + \frac{8}{12}$

4)  $\frac{2}{5} + \frac{4}{5}$

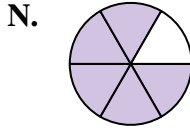
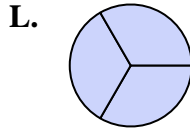
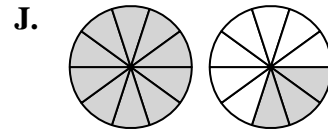
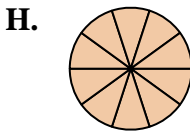
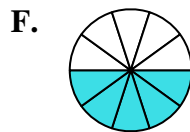
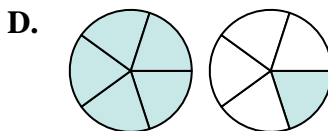
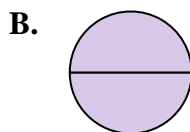
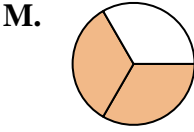
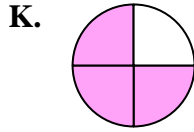
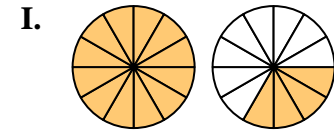
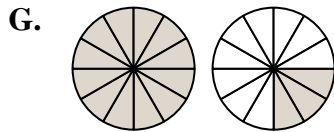
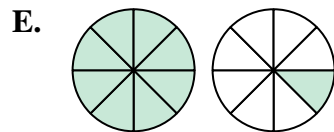
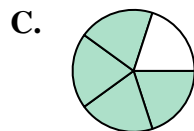
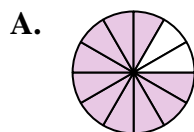
6)  $\frac{1}{2} + \frac{1}{2}$

8)  $\frac{1}{3} + \frac{1}{3}$

10)  $\frac{2}{12} + \frac{8}{12}$

12)  $\frac{5}{10} + \frac{8}{10}$

14)  $\frac{4}{6} + \frac{1}{6}$

**Respuestas**

1. **L**  $\frac{3}{3}$

2. **I**  $1\frac{4}{12}$

3. **H**  $1\frac{10}{10}$

4. **D**  $1\frac{1}{5}$

5. **C**  $\frac{4}{5}$

6. **B**  $\frac{2}{2}$

7. **E**  $1\frac{1}{8}$

8. **M**  $\frac{2}{3}$

9. **K**  $\frac{3}{4}$

10. **A**  $1\frac{10}{12}$

11. **F**  $\frac{5}{10}$

12. **J**  $1\frac{3}{10}$

13. **G**  $1\frac{3}{12}$

14. **N**  $\frac{5}{6}$