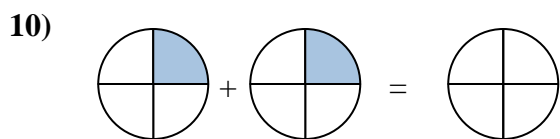
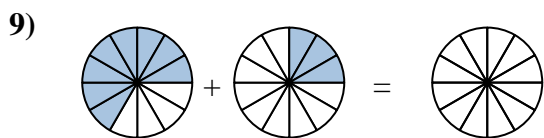
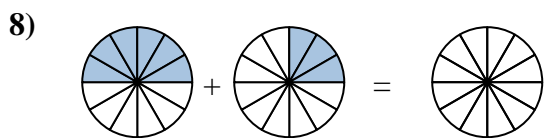
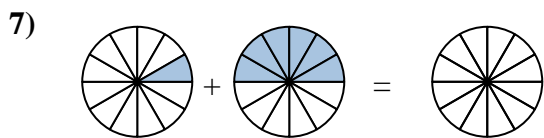
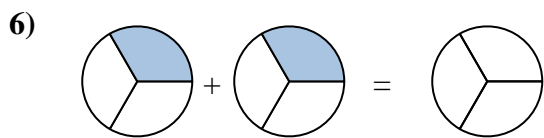
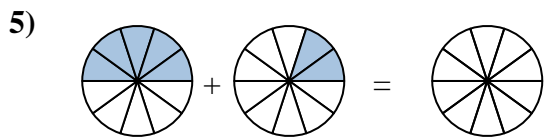
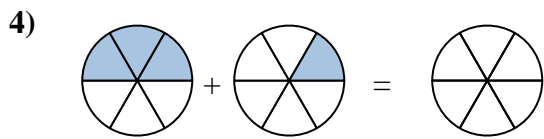
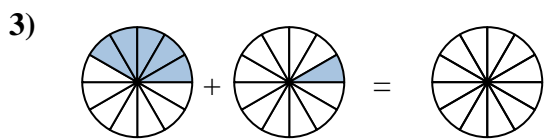
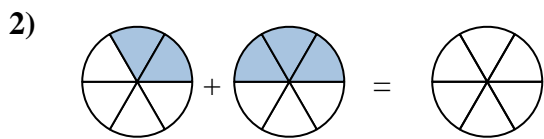
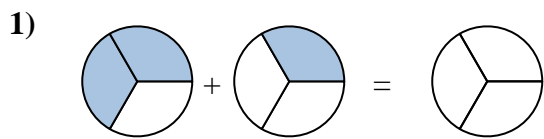
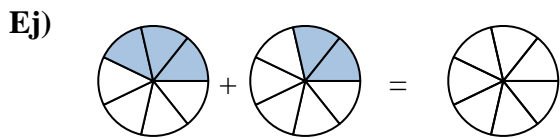




Sombrea la fracción para resolver el problema.



Respuestas

Ej. $\frac{3}{7}$ $\frac{2}{7}$ $\frac{5}{7}$

1. _____

2. _____

3. _____

4. _____

5. _____

6. _____

7. _____

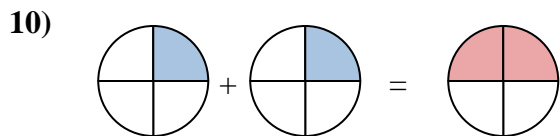
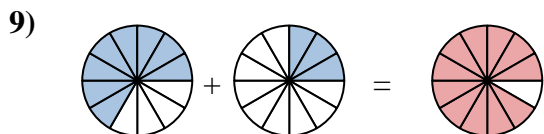
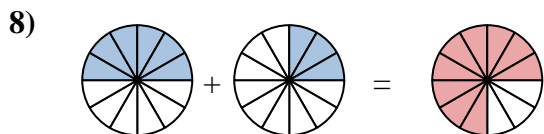
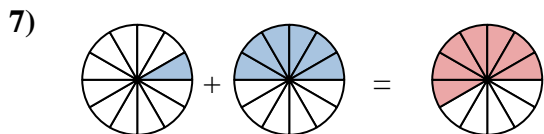
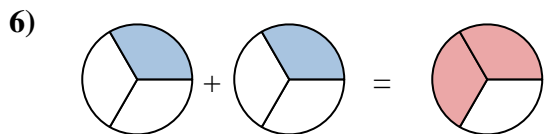
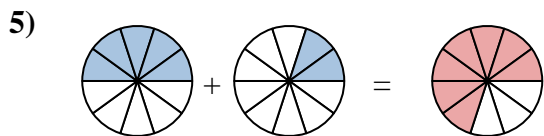
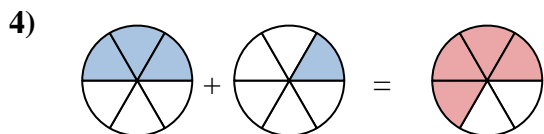
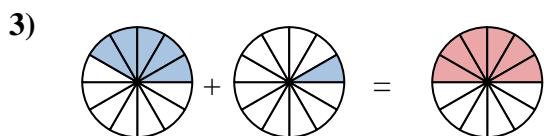
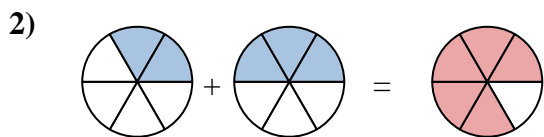
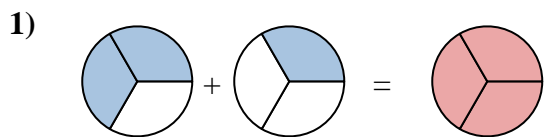
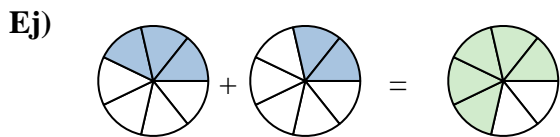
8. _____

9. _____

10. _____



Sombrea la fracción para resolver el problema.

**Respuestas**

| | | | |
|-----|----------------|----------------|-----------------|
| Ej. | $\frac{3}{7}$ | $\frac{2}{7}$ | $\frac{5}{7}$ |
| 1. | $\frac{2}{3}$ | $\frac{1}{3}$ | $\frac{3}{3}$ |
| 2. | $\frac{2}{6}$ | $\frac{3}{6}$ | $\frac{5}{6}$ |
| 3. | $\frac{5}{12}$ | $\frac{1}{12}$ | $\frac{6}{12}$ |
| 4. | $\frac{3}{6}$ | $\frac{1}{6}$ | $\frac{4}{6}$ |
| 5. | $\frac{5}{10}$ | $\frac{2}{10}$ | $\frac{7}{10}$ |
| 6. | $\frac{1}{3}$ | $\frac{1}{3}$ | $\frac{2}{3}$ |
| 7. | $\frac{1}{12}$ | $\frac{6}{12}$ | $\frac{7}{12}$ |
| 8. | $\frac{6}{12}$ | $\frac{3}{12}$ | $\frac{9}{12}$ |
| 9. | $\frac{8}{12}$ | $\frac{3}{12}$ | $\frac{11}{12}$ |
| 10. | $\frac{1}{4}$ | $\frac{1}{4}$ | $\frac{2}{4}$ |