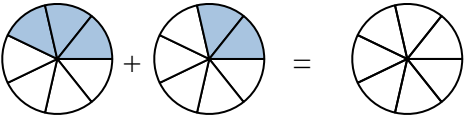
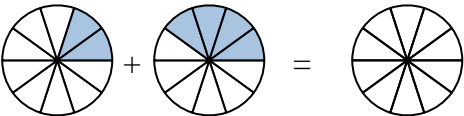
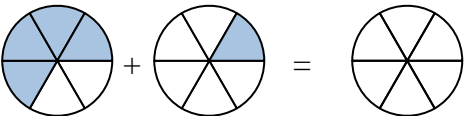





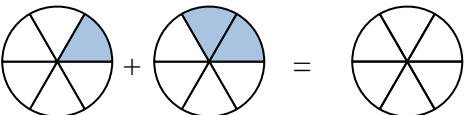
Sombrea la fracción para resolver el problema.

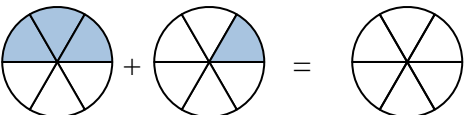
Ej) 


1) 

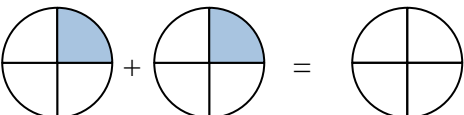
2) 

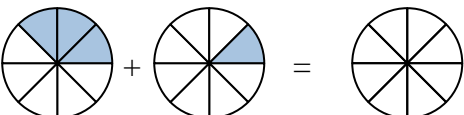
3) 


4) 

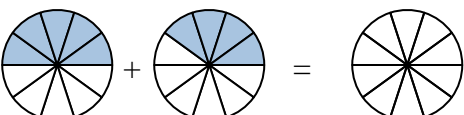
5) 

6) 

7) 

8) 

9) 

10) 

**Respuestas**

Ej.  $\frac{3}{7}$     $\frac{2}{7}$     $\frac{5}{7}$

1. \_\_\_\_\_

2. \_\_\_\_\_

3. \_\_\_\_\_

4. \_\_\_\_\_

5. \_\_\_\_\_

6. \_\_\_\_\_

7. \_\_\_\_\_

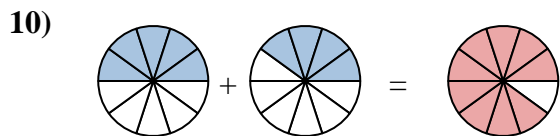
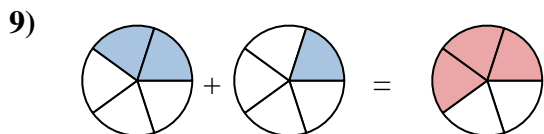
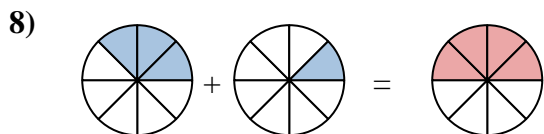
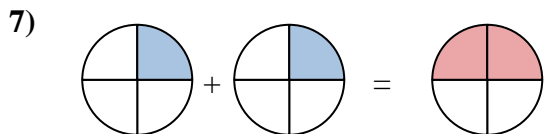
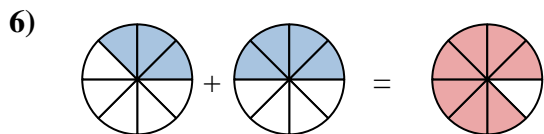
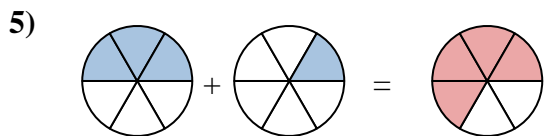
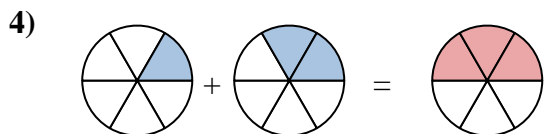
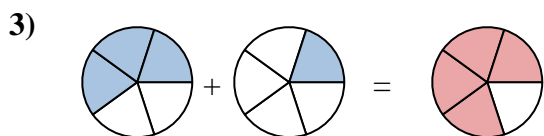
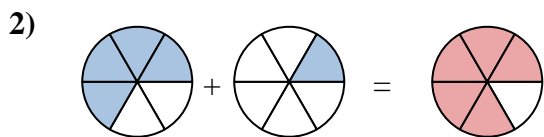
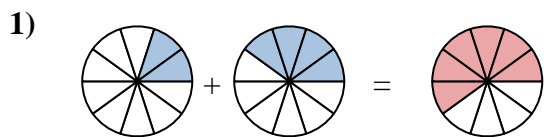
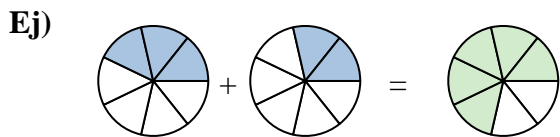
8. \_\_\_\_\_

9. \_\_\_\_\_

10. \_\_\_\_\_



Sombrea la fracción para resolver el problema.

**Respuestas**

Ej.  $\frac{3}{7}$   $\frac{2}{7}$   $\frac{5}{7}$

1.  $\frac{2}{10}$   $\frac{4}{10}$   $\frac{6}{10}$

2.  $\frac{4}{6}$   $\frac{1}{6}$   $\frac{5}{6}$

3.  $\frac{3}{5}$   $\frac{1}{5}$   $\frac{4}{5}$

4.  $\frac{1}{6}$   $\frac{2}{6}$   $\frac{3}{6}$

5.  $\frac{3}{6}$   $\frac{1}{6}$   $\frac{4}{6}$

6.  $\frac{3}{8}$   $\frac{4}{8}$   $\frac{7}{8}$

7.  $\frac{1}{4}$   $\frac{1}{4}$   $\frac{2}{4}$

8.  $\frac{3}{8}$   $\frac{1}{8}$   $\frac{4}{8}$

9.  $\frac{2}{5}$   $\frac{1}{5}$   $\frac{3}{5}$

10.  $\frac{5}{10}$   $\frac{4}{10}$   $\frac{9}{10}$