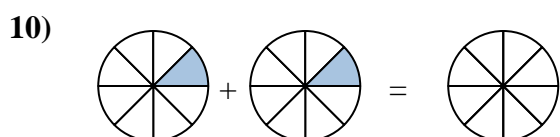
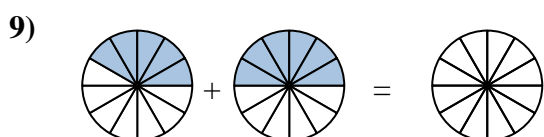
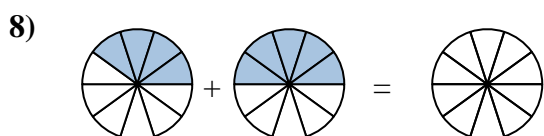
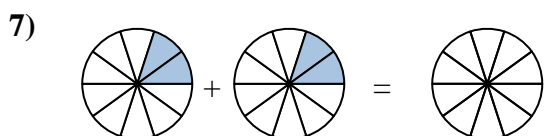
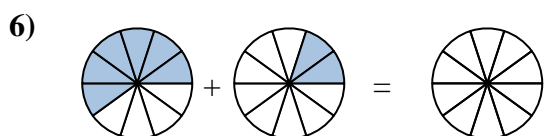
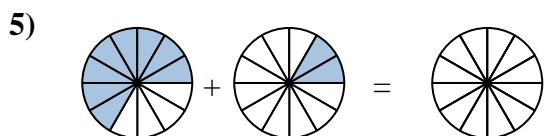
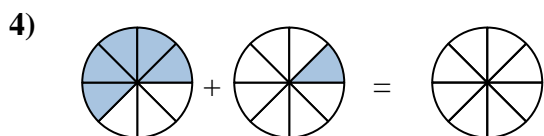
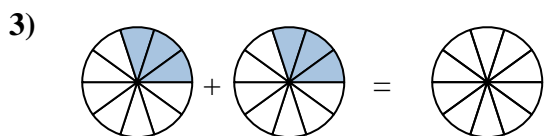
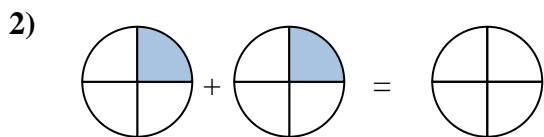
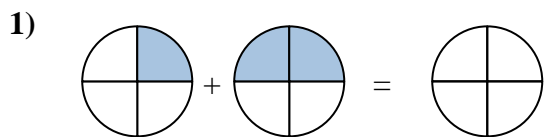
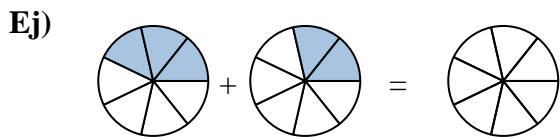




Sombrea la fracción para resolver el problema.

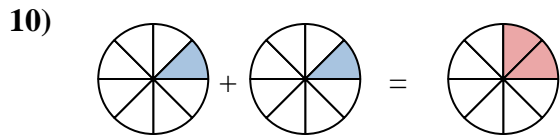
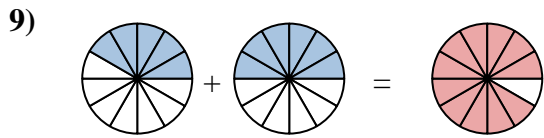
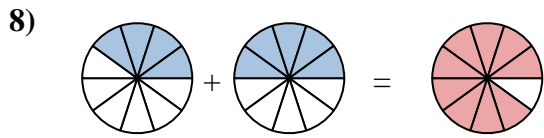
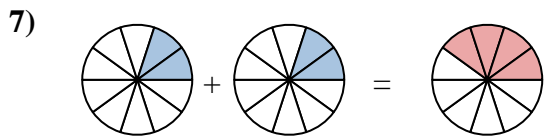
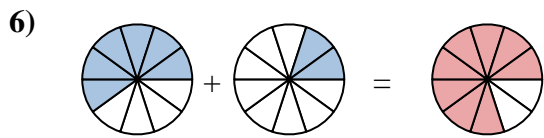
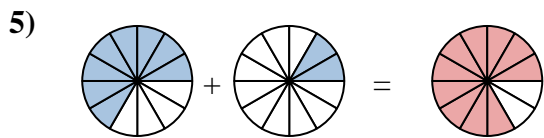
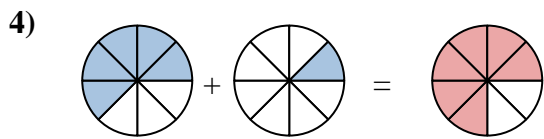
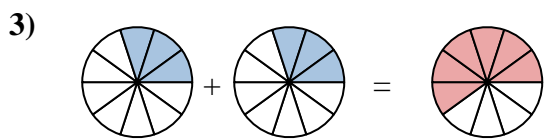
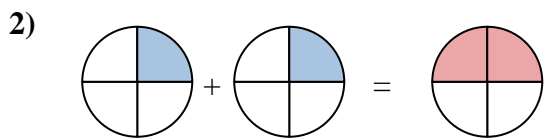
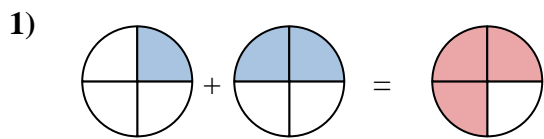
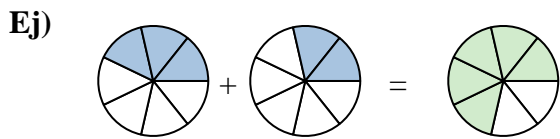


Respuestas

Ej.	$\frac{3}{7}$	$\frac{2}{7}$	$\frac{5}{7}$
1.	_____	_____	_____
2.	_____	_____	_____
3.	_____	_____	_____
4.	_____	_____	_____
5.	_____	_____	_____
6.	_____	_____	_____
7.	_____	_____	_____
8.	_____	_____	_____
9.	_____	_____	_____
10.	_____	_____	_____



Sombrea la fracción para resolver el problema.

**Respuestas**

Ej.	$\frac{3}{7}$	$\frac{2}{7}$	$\frac{5}{7}$
1.	$\frac{1}{4}$	$\frac{2}{4}$	$\frac{3}{4}$
2.	$\frac{1}{4}$	$\frac{1}{4}$	$\frac{2}{4}$
3.	$\frac{3}{10}$	$\frac{3}{10}$	$\frac{6}{10}$
4.	$\frac{5}{8}$	$\frac{1}{8}$	$\frac{6}{8}$
5.	$\frac{8}{12}$	$\frac{2}{12}$	$\frac{10}{12}$
6.	$\frac{6}{10}$	$\frac{2}{10}$	$\frac{8}{10}$
7.	$\frac{2}{10}$	$\frac{2}{10}$	$\frac{4}{10}$
8.	$\frac{4}{10}$	$\frac{5}{10}$	$\frac{9}{10}$
9.	$\frac{5}{12}$	$\frac{6}{12}$	$\frac{11}{12}$
10.	$\frac{1}{8}$	$\frac{1}{8}$	$\frac{2}{8}$